

CRACK THE CODE - PENGUIN FACTS

Name: _____ Date: _____

Crack the Code to find the answer to the questions about penguins.

A	B	C	D	E	F	G	H	I	J	K	L	M
1	2	3	4	5	6	7	8	9	10	11	12	13
N	O	P	Q	R	S	T	U	V	W	X	Y	Z
14	15	16	17	18	19	20	21	22	23	24	25	26

1.) What do penguins eat?

11 18 9 12 12 , 19 17 21 9 4 , and 6 9 19 8

2.) What is the smallest species of penguin called?


12 9 20 20 12 5 2 12 21 5 16 5 14 7 21 9 14

3.) How fast can some penguins swim?

6 9 6 20 5 5 14 13 16 8

4.) How many different species of penguins are there?

14 9 14 5 20 5 5 14



Name: _____ Date: _____

Summer Word Search

G	S	G	R	V	S	B	L	O	H	J	P
T	U	F	O	R	W	N	K	Q	N	P	M
M	M	H	B	Z	I	H	O	T	O	L	B
V	M	S	U	Y	M	I	P	E	I	S	U
P	E	Z	G	Z	S	S	M	G	T	S	V
F	R	K	S	M	U	E	K	B	A	P	N
L	J	N	O	B	I	S	A	L	C	C	E
N	O	I	V	T	T	S	X	M	A	H	N
N	L	V	W	S	E	A	J	U	V	M	U
D	V	P	U	B	B	L	O	O	P	X	J
X	T	G	A	J	N	G	H	G	R	S	U
U	U	L	A	B	J	N	R	C	T	F	L
A	L	X	O	A	W	U	J	I	A	T	Y
V	H	C	S	U	N	S	C	R	E	E	N
Y	P	E	R	O	S	U	N	N	Y	K	B
E	D	A	N	O	M	E	L	J	F	U	B

SUMMER

SUNNY

SUNSCREEN

POOL

LEMONADE

BEACH

SWIMSUIT

BUGS

VACATION

BASEBALL


JUNE

JULY

HOT





AUGUST

SUNGLASSES













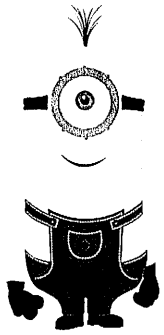


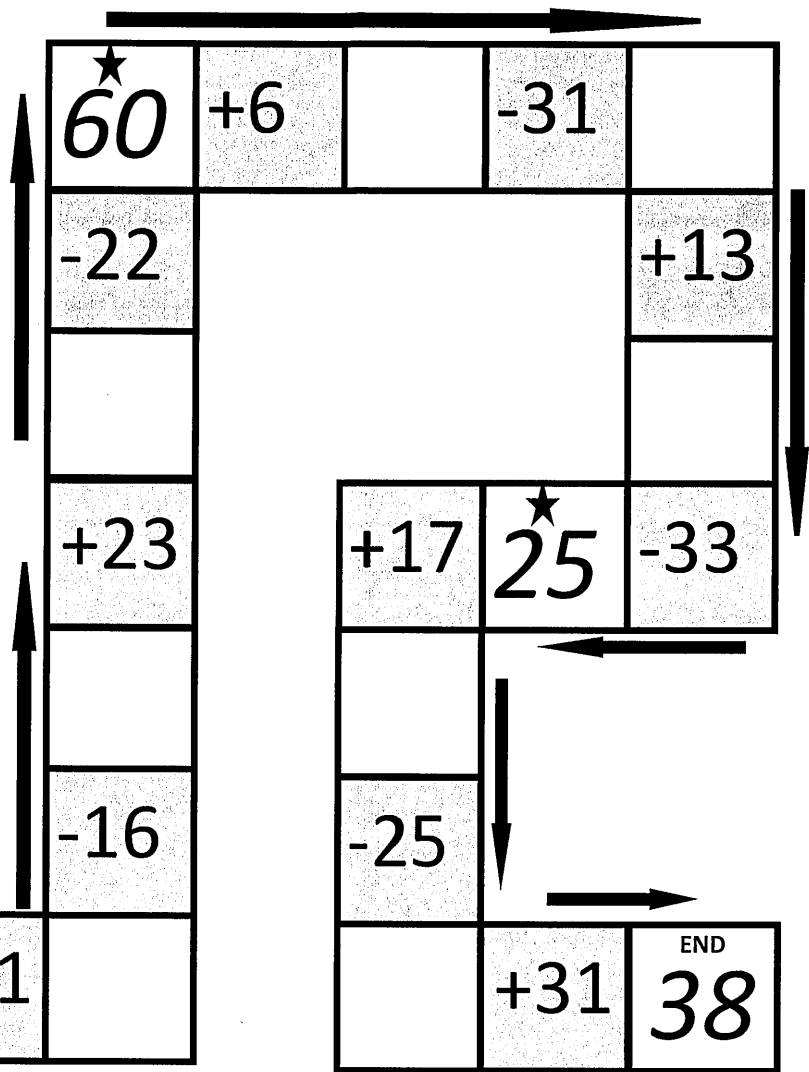
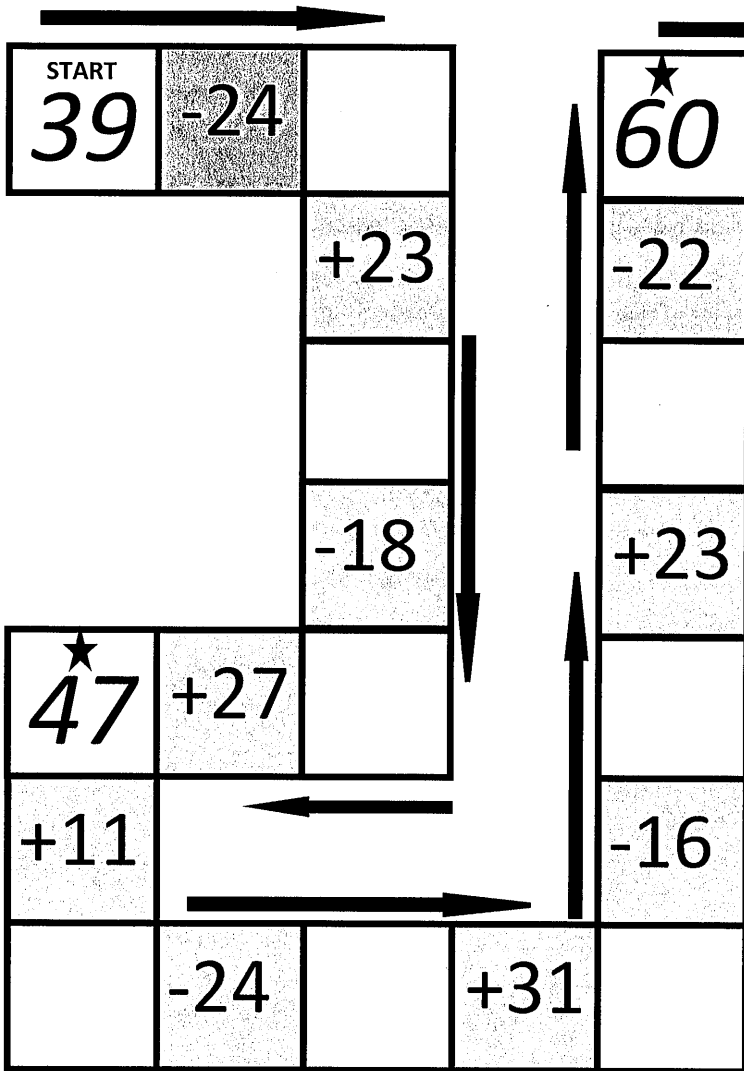
Unscramble the Minions

Unscramble the minions to make sight words. ~~cut and paste them~~



Complete the Pattern



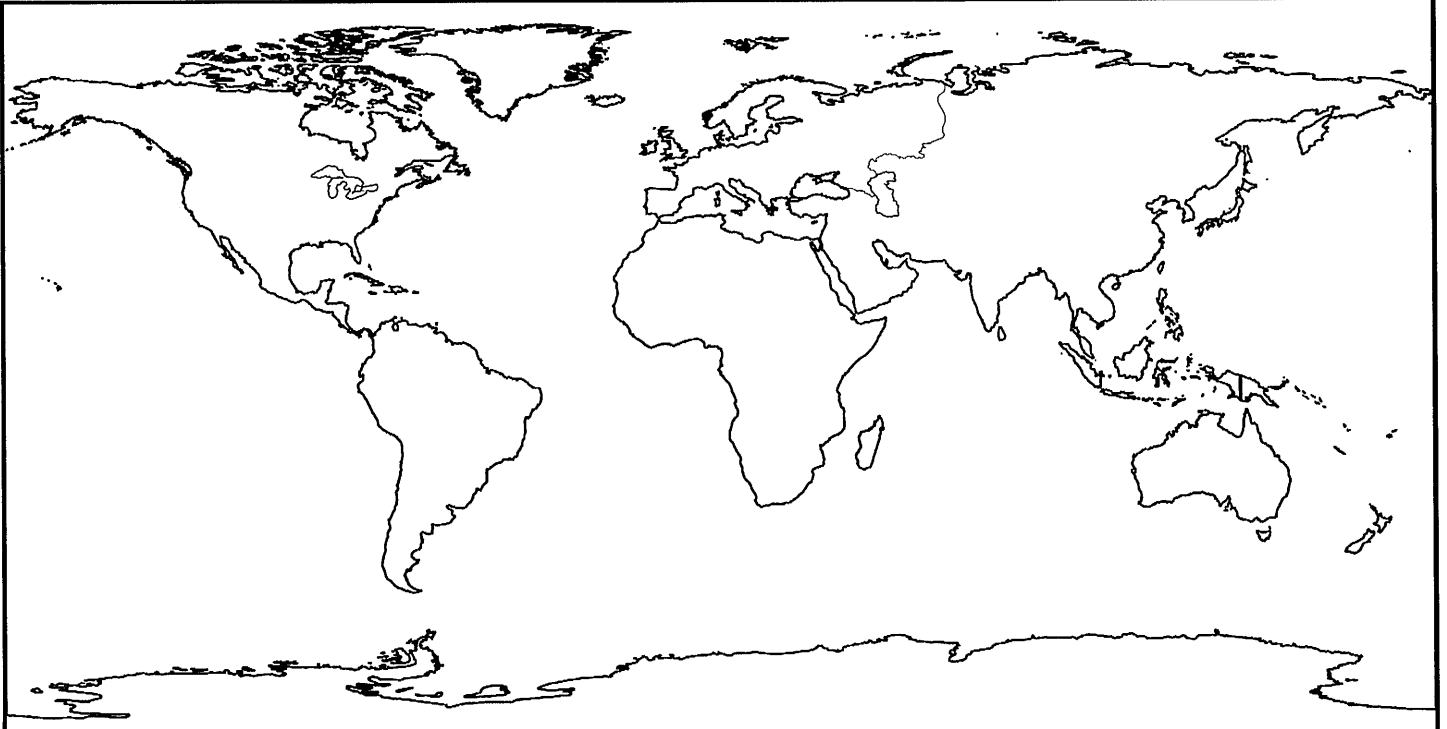




Learning About the **7 CONTINENTS**

Name: _____

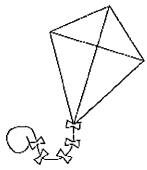
© www.123homeschool4me.com



Label the continents and color them each a different color:
Africa, Antarctica, Asia, Australia, Europe, North America, and South America

© www.123homeschool4me.com

Answer the questions below. Underline your evidence.



Kites

If you go to a park on a windy day, you may see someone flying a kite. Kites can be a fun toy for kids to play with, but did you know that they were invented thousands of years ago in China?

The first kites were made from bamboo stems and silk. Kites have been used for measuring distances, sending messages, fishing and even doing science experiments. In 1752 Benjamin Franklin flew a kite in a storm and proved that lightning was electricity.

Kites today are all different shapes and sizes. The smallest kite that flies is only 5 millimeters tall. That is smaller than the width of your finger! The longest kite is over 3,000 feet, which is more than half a mile long!

--	--	--



Where were kites invented?



What were the first kites made of?



How long is the longest kite?

Design your own kite and draw it below.

Make an inference.


Bamboo is a type of what?

plant fish candy

Circle words or phrases in the passage that gave you a clue.



Answer the questions below. Underline your evidence.



Polar Bears

Polar bears are large mammals that live in the Arctic. It is very cold there, so polar bears have thick fur and a layer of fat under their skin called blubber to keep them warm. A male polar bear can grow to be 10 feet tall and weigh up to 1,500 pounds!

Polar bears are very good swimmers. They climb up on sea ice to watch and hunt for seals, their main food source.

Polar bears do not live and travel in groups. They live most of their lives alone. Polar bear cubs will stay with their mother for about 2 years. After that, they will live on their own.

There are not any animals that hunt polar bears except people. There are many laws now to protect polar bears from being hunted because there are only about 20,000 left in the world.

--	--	--



How do polar bears stay warm?



How long do polar bear cubs stay with their mom? _____



Why are there laws to protect polar bears? _____

If you had to swim in very cold water, how would you keep yourself warm? _____

Make an inference. Why do you think no other animals hunt polar bears?

Circle words or phrases in the passage that gave you a clue.






Name: _____


CCSS 2.MD.7 Tell and write time from analog and digital clocks to the nearest...

Telling Time to the Hour


Directions: Write in the digital time.




:




:




:




:




:




:



:



:


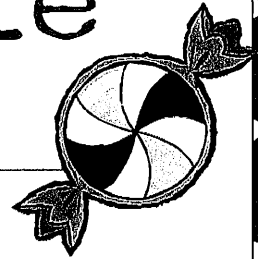


:




HALLOWEEN


Word Scramble



knumpip _____
eaolewhnl _____
dirpse _____
ktcir _____
mearpvi _____
opykos _____
retta _____
chwti _____
uhdanet _____
oteucms _____
sothg _____
ayncd _____
oknltese _____
emntros _____
acysr _____











 +  +  = 16¢





 +  +  =



 +  +  =

 +  +  +  =

 +  +  +  =

 +  +  +  =

 +  +  +  =

 +  +  +  =

Name _____

Date _____



2 DIGIT SUBTRACTION WITH REGROUPING SHEET 2

Remember to subtract the ones first and then the tens.

$$\begin{array}{r} 1) \quad 34 \\ - 27 \\ \hline \end{array}$$

$$\begin{array}{r} 2) \quad 52 \\ - 14 \\ \hline \end{array}$$

$$\begin{array}{r} 3) \quad 34 \\ - 16 \\ \hline \end{array}$$

$$\begin{array}{r} 4) \quad 43 \\ - 39 \\ \hline \end{array}$$

$$\begin{array}{r} 5) \quad 32 \\ - 8 \\ \hline \end{array}$$

$$\begin{array}{r} 6) \quad 33 \\ - 16 \\ \hline \end{array}$$

$$\begin{array}{r} 7) \quad 44 \\ - 16 \\ \hline \end{array}$$

$$\begin{array}{r} 8) \quad 51 \\ - 13 \\ \hline \end{array}$$

$$\begin{array}{r} 9) \quad 50 \\ - 34 \\ \hline \end{array}$$

$$\begin{array}{r} 10) \quad 63 \\ - 9 \\ \hline \end{array}$$

$$\begin{array}{r} 11) \quad 41 \\ - 18 \\ \hline \end{array}$$

$$\begin{array}{r} 12) \quad 75 \\ - 58 \\ \hline \end{array}$$

$$\begin{array}{r} 13) \quad 41 \\ - 33 \\ \hline \end{array}$$

$$\begin{array}{r} 14) \quad 52 \\ - 26 \\ \hline \end{array}$$

$$\begin{array}{r} 15) \quad 50 \\ - 34 \\ \hline \end{array}$$

$$\begin{array}{r} 16) \quad 64 \\ - 19 \\ \hline \end{array}$$

$$\begin{array}{r} 17) \quad 82 \\ - 5 \\ \hline \end{array}$$

$$\begin{array}{r} 18) \quad 45 \\ - 28 \\ \hline \end{array}$$

$$\begin{array}{r} 19) \quad 61 \\ - 43 \\ \hline \end{array}$$


$$\begin{array}{r} 20) \quad 80 \\ - 64 \\ \hline \end{array}$$

Which one has the biggest difference?



Free Math Sheets, Math Games and Math Help

MATH-SALAMANDERS.COM



Name : _____

Score : _____

Teacher : _____

Date : _____

$$\begin{array}{r} 8 \\ \times 5 \\ \hline \end{array}$$

$$\begin{array}{r} 3 \\ \times 1 \\ \hline \end{array}$$

$$\begin{array}{r} 5 \\ \times 7 \\ \hline \end{array}$$

$$\begin{array}{r} 6 \\ \times 2 \\ \hline \end{array}$$

$$\begin{array}{r} 9 \\ \times 10 \\ \hline \end{array}$$

$$\begin{array}{r} 10 \\ \times 6 \\ \hline \end{array}$$

$$\begin{array}{r} 2 \\ \times 1 \\ \hline \end{array}$$

$$\begin{array}{r} 9 \\ \times 4 \\ \hline \end{array}$$

$$\begin{array}{r} 8 \\ \times 15 \\ \hline \end{array}$$

$$\begin{array}{r} 1 \\ \times 1 \\ \hline \end{array}$$

$$\begin{array}{r} 1 \\ \times 0 \\ \hline \end{array}$$

$$\begin{array}{r} 9 \\ \times 7 \\ \hline \end{array}$$

$$\begin{array}{r} 4 \\ \times 14 \\ \hline \end{array}$$

$$\begin{array}{r} 1 \\ \times 9 \\ \hline \end{array}$$

$$\begin{array}{r} 0 \\ \times 7 \\ \hline \end{array}$$

$$\begin{array}{r} 3 \\ \times 2 \\ \hline \end{array}$$

$$\begin{array}{r} 3 \\ \times 7 \\ \hline \end{array}$$

$$\begin{array}{r} 6 \\ \times 6 \\ \hline \end{array}$$

$$\begin{array}{r} 10 \\ \times 5 \\ \hline \end{array}$$

$$\begin{array}{r} 10 \\ \times 3 \\ \hline \end{array}$$

$$\begin{array}{r} 5 \\ \times 6 \\ \hline \end{array}$$

$$\begin{array}{r} 3 \\ \times 13 \\ \hline \end{array}$$

$$\begin{array}{r} 2 \\ \times 13 \\ \hline \end{array}$$

$$\begin{array}{r} 9 \\ \times 5 \\ \hline \end{array}$$

$$\begin{array}{r} 8 \\ \times 6 \\ \hline \end{array}$$



Name : _____

Score : _____

Teacher : _____

Date : _____

$$\begin{array}{r} 2 \\ \times 15 \\ \hline \end{array}$$

$$\begin{array}{r} 4 \\ \times 4 \\ \hline \end{array}$$

$$\begin{array}{r} 2 \\ \times 0 \\ \hline \end{array}$$

$$\begin{array}{r} 7 \\ \times 9 \\ \hline \end{array}$$

$$\begin{array}{r} 9 \\ \times 0 \\ \hline \end{array}$$

$$\begin{array}{r} 0 \\ \times 13 \\ \hline \end{array}$$

$$\begin{array}{r} 9 \\ \times 11 \\ \hline \end{array}$$

$$\begin{array}{r} 5 \\ \times 8 \\ \hline \end{array}$$

$$\begin{array}{r} 0 \\ \times 6 \\ \hline \end{array}$$

$$\begin{array}{r} 0 \\ \times 8 \\ \hline \end{array}$$

$$\begin{array}{r} 2 \\ \times 7 \\ \hline \end{array}$$

$$\begin{array}{r} 6 \\ \times 0 \\ \hline \end{array}$$

$$\begin{array}{r} 2 \\ \times 5 \\ \hline \end{array}$$

$$\begin{array}{r} 9 \\ \times 14 \\ \hline \end{array}$$

$$\begin{array}{r} 10 \\ \times 6 \\ \hline \end{array}$$

$$\begin{array}{r} 7 \\ \times 12 \\ \hline \end{array}$$

$$\begin{array}{r} 4 \\ \times 3 \\ \hline \end{array}$$

$$\begin{array}{r} 6 \\ \times 6 \\ \hline \end{array}$$

$$\begin{array}{r} 1 \\ \times 10 \\ \hline \end{array}$$

$$\begin{array}{r} 9 \\ \times 1 \\ \hline \end{array}$$

$$\begin{array}{r} 5 \\ \times 10 \\ \hline \end{array}$$

$$\begin{array}{r} 1 \\ \times 0 \\ \hline \end{array}$$

$$\begin{array}{r} 9 \\ \times 10 \\ \hline \end{array}$$

$$\begin{array}{r} 3 \\ \times 14 \\ \hline \end{array}$$

$$\begin{array}{r} 6 \\ \times 13 \\ \hline \end{array}$$



Measuring Objects

.....
cm

.....
cm

.....
cm


.....
cm


.....
cm

.....
cm

.....
cm

.....
cm





Name: _____

Princess Color by Number


Color each square according to the following code to reveal the hidden picture:

1 - cream

3 - yellow

2 - white

4 - red



© www.123homeschool4me.com

The candle has a yellow flame.

Name: _____

Princess Color by Number


Color each space according to the following code to reveal the hidden picture:

1 - brown

3 - yellow

2 - cream / white

4 - blue



© www.123homeschool4me.com

Belle is wearing a yellow dress.

Name: _____

Princess Color by Number

Color each space according to the following code to reveal the hidden picture:

5 - black


7 - yellow

9 - brown

6 - white / cream

8 - blue

10 - green



© www.123homeschool4me.com

Beast is wearing a blue jacket.