

Name: _____

Date: _____



Telling Time


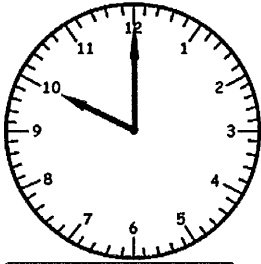
Hour

Worksheet 1

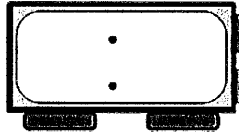
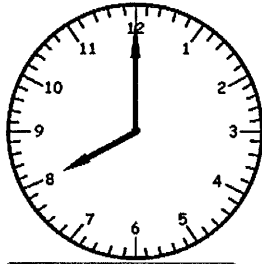


Write the time inside each clock below.


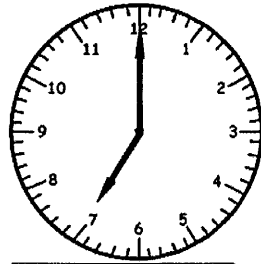
1)



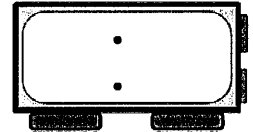
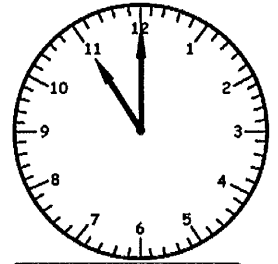
2)



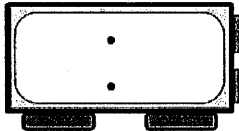
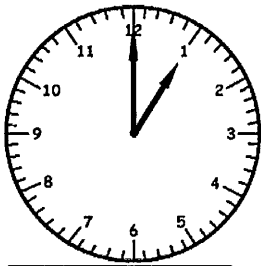
3)



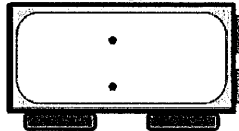
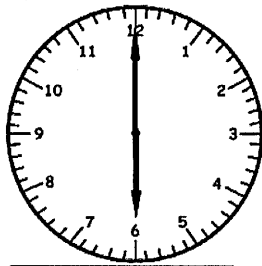
4)



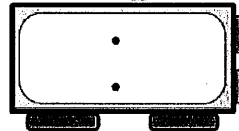
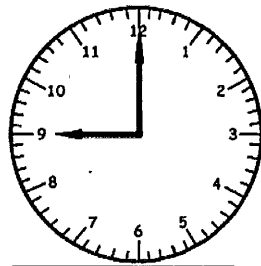
5)



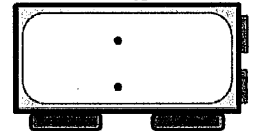
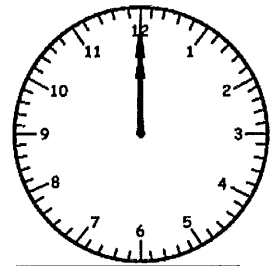
6)




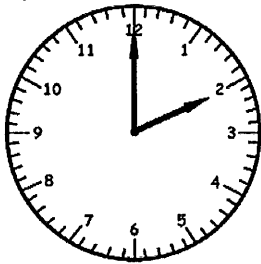
7)



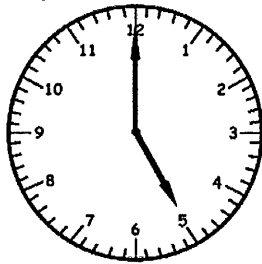
8)



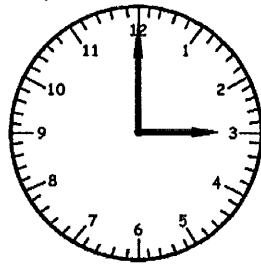
9)



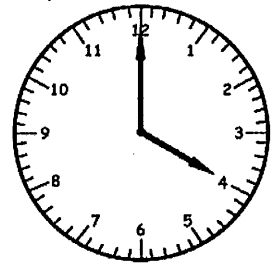
10)




11)



12)



Key



Decode the color words.



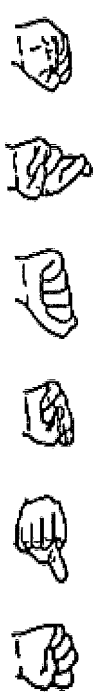
L



L



L



L



L

Decode the secret message.



L

SuperKids Word Scrambler


Sports

	Scramble	Answer
1	aabebls	
2	eklasbaltb	
3	tlofobla	
4	scrceo	
5	koyhec	
6	etnism	
7	ylbevllao	
8	lagodbde	
9	misnmiwg	
10	uignrnn	

I Spy With My Little Eye



I-Spy Image Courtesy of *Cathe Holden* JustSomethingIMade.com



Summer Search

D R P S U N T A N I C E C R E A M
 Z F C H U S U N B U R N F N J E N
 Y I A H G H B O A T C O U S U G B
 W R U E F F I S H I N G O I N L E
 M K G U T I B I K I N I C W E O A
 N Q U B E E W A T E R M E L O N C
 A N S W I M M I N G J L W G B B H
 Y Q T A C I P Q T O U Q N J D O H
 V R N N G X S G T W L X X G R L Y
 A L T F C M F Q D P Y S D A P C D
 C O L O A O A X G C M A I T P C E
 A T W S M S N S U N G L A S S E S
 T I O H P Q F X D F T E N T P X L
 I O V O I U I W Q K R H O T B M C
 O N J R N I M U F F H L K G L R W
 N Z R T G T X J Z K L H A T X Z T
 B K N S V O Q W J V X X R D W E B

August

beach

bikini

boat

camping

fan

fishing



hat

hot

ice cream

July

June

lotion

mosquito

shorts

sunburn

sunglasses

suntan

swimming

tent

vacation



Summer Ice Cream Word Search!

CRWNNKXBCBBBOVNTXNXVCUVKE
JOPXLEDEARUMENDNRIDA EWBEK
GQFOKLAVOTAF OULIVMRBYTKED
CHFFZEGUTZEQUPSMIAEGLCTEP
RXNSEEIE XWDMQJQRMWRUGAVSE
SVUWMERCLWHEFT EYZNVLPKMR
XVWACSEUAVTAPJLPPMCCORECNQ
MYPHCYRREB WARTSPJICJMAPZB
XLAOWHSMELFHDVREPOSEPCBCR
EBTFOAVKAXA OAGPHDYTPHDZE
UCWWNK TIOJYVJNFCUKPDAMD CP
HNBAGNWZBZDONIZACIPJXCSEU
MONZHPYCMTOJOLXTVIOQGFHQK
ZAOGNAMBHDZTJLNEIMCBBDPIN
BCHERRYGGOV RNAVJEXXEXITLO
TVIQQMBVANRFPASKGCVOJFKEV
ESXYBUBBLEGUMDTCHLAMEATBL
NIKPMUPJJKZFUSVISLGGQFQFEK
TXOSMFBZRC LYRQNALXYXBIJIT
PUUUHOHKGSYKXZOIVONIHQINT
TANXVIHLPYQYSGGTNGPFKDCWY
OBMOQHQS GPIQM QHCRTGAQGZOW
ZXFZCSUKUGLVZPTZFZW O EAPRT
QCSQOOWABLDZFXVLEFOQUNDBX
MVNMBQCVVL ODWQEDNVHSJCNIV

Banana	Chocolate	Peach
Brownie	Coconut	Peppermint
Bubblegum	Coffee	Pistachio
Butterscotch	Mango	Pumpkin
Caramel	Maple	Strawberry
Cherry	Neapolitan	Vanilla

Name

Date



ADDITION - UP TO 12+12 SHEET 4

0	1	2	3	4	5	6	7	8	9	10	11	12	13	14	15	16	17	18	19	20
---	---	---	---	---	---	---	---	---	---	----	----	----	----	----	----	----	----	----	----	----

1) $10 + 7 = \underline{\quad}$

11) $\underline{\quad} + 10 = 13$

2) $9 + \underline{\quad} = 13$

12) $11 + \underline{\quad} = 16$

3) $3 + \underline{\quad} = 10$

13) $9 + \underline{\quad} = 14$

4) $7 + \underline{\quad} = 12$

14) $\underline{\quad} + 10 = 16$

5) $\underline{\quad} + 7 = 9$

15) $5 + \underline{\quad} = 15$

6) $\underline{\quad} + 3 = 9$

16) $8 + \underline{\quad} = 16$

7) $4 + \underline{\quad} = 12$

17) $\underline{\quad} + 11 = 17$

8) $11 + \underline{\quad} = 14$

18) $\underline{\quad} + 12 = 14$

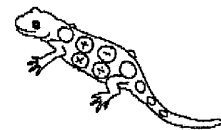
9) $8 + \underline{\quad} = 13$

19) $12 + \underline{\quad} = 20$

10) $\underline{\quad} + 8 = 15$

20) $\underline{\quad} + 6 = 17$


Count on from the addend you have got to get to the total to find the missing addend.



Free Math Sheets, Math Games and Math Help

MATH-SALAMANDERS.COM

Name: _____ Date: _____



Picture #1

The Case of the Mysterious Water Bottle

Picture #2

Jordan, her family, and a few friends decided to visit a waterpark not too far from their home. When the group arrived, there was a lot to do before the kids could go play. They set up their chairs, umbrellas, and applied, or put on their sunscreen. At that time, Jordan's mom noticed that she had forgotten the water bottles. She was worried that the kids would not have enough to drink on such a hot day and hoped the concession stand would have some she could buy. Once everything was set up, Jordan and her friends were ready to go play. All the kids ran to their favorite activity. Jordan and her friend Katy went to the waterslide. After going down the slide a few times, Jordan walked back over to her chair.

When she got there, she could not believe her eyes... **a bottle of water had mysteriously appeared!** Where did the water bottle come from?

Directions: Read back over the clues and answer the questions below to discover where the water bottle came from. Use the picture for help too!



1. Look at the pictures. Drag a circle to picture #1 or #2 where something is missing or not the same. (hint there are five differences in each picture.)

2. What was the first thing the kids did when they arrived at the waterpark? A) put on sunscreen B) set up their chairs and umbrellas C) changed into their swimsuits

Drag the circle around the letter that you pick as your answer.

3. What was Jordan's favorite activity?

4. Where do you think the water bottle came from?

Name: _____

Date: _____

Learning Fact or Opinion Worksheet

A fact is a true statement and something that has really happened and is the case.

An opinion is a view or judgment formed on something, not necessarily based on fact or knowledge.


Directions: Read each sentence and tell whether it is a fact or opinion.

Example: I think hot dogs are better than hamburgers.

Answer: Opinion

1. _____ Disneyland is better than Magic Mountain.
2. _____ Red is a brighter color than yellow.
3. _____ There are fifty states in the U.S.A..
4. _____ Sacramento is the capitol of California.
5. _____ I think hamburgers are very healthy for you.
6. _____ There are seven days in a week.
7. _____ I think that the mall is a boring place to be.
8. _____ Two plus two equals four.
9. _____ The number seven is luckier than three.
10. _____ There are twelve months in a year.
11. _____ Pens are easier to write with than pencils.
12. _____ UCLA is a better football team than USC.

Name _____



Colorful Hats

Color Code

Nouns=

green























Verbs=

yellow

Adjectives=

orange

Directions: Read the words on the hats and use the color code to color the hats.



MULTIPLICATION

$$\begin{array}{r} 9 \\ \times 2 \\ \hline \end{array}$$

$$\begin{array}{r} 5 \\ \times 8 \\ \hline \end{array}$$

$$\begin{array}{r} 8 \\ \times 6 \\ \hline \end{array}$$

$$\begin{array}{r} 6 \\ \times 4 \\ \hline \end{array}$$

$$\begin{array}{r} 2 \\ \times 6 \\ \hline \end{array}$$

$$\begin{array}{r} 6 \\ \times 5 \\ \hline \end{array}$$

$$\begin{array}{r} 7 \\ \times 7 \\ \hline \end{array}$$

$$\begin{array}{r} 3 \\ \times 3 \\ \hline \end{array}$$

$$\begin{array}{r} 8 \\ \times 2 \\ \hline \end{array}$$

$$\begin{array}{r} 8 \\ \times 9 \\ \hline \end{array}$$

$$\begin{array}{r} 4 \\ \times 4 \\ \hline \end{array}$$

$$\begin{array}{r} 3 \\ \times 7 \\ \hline \end{array}$$

$$\begin{array}{r} 7 \\ \times 8 \\ \hline \end{array}$$


$$\begin{array}{r} 9 \\ \times 5 \\ \hline \end{array}$$

$$\begin{array}{r} 9 \\ \times 9 \\ \hline \end{array}$$

$$\begin{array}{r} 5 \\ \times 4 \\ \hline \end{array}$$



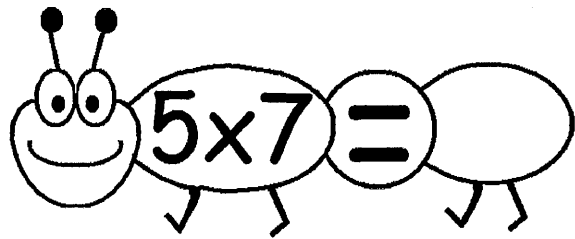


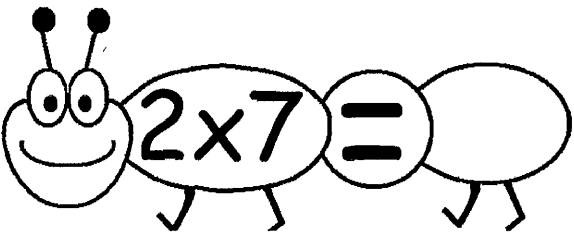
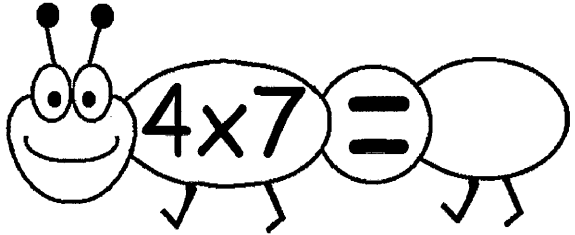




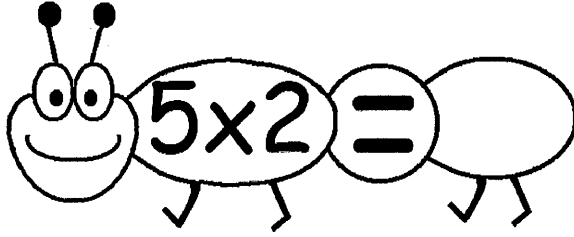


$$\begin{array}{r} 5 \\ \times 3 \\ \hline \end{array}$$

$$\begin{array}{r} 9 \\ \times 6 \\ \hline \end{array}$$



Name


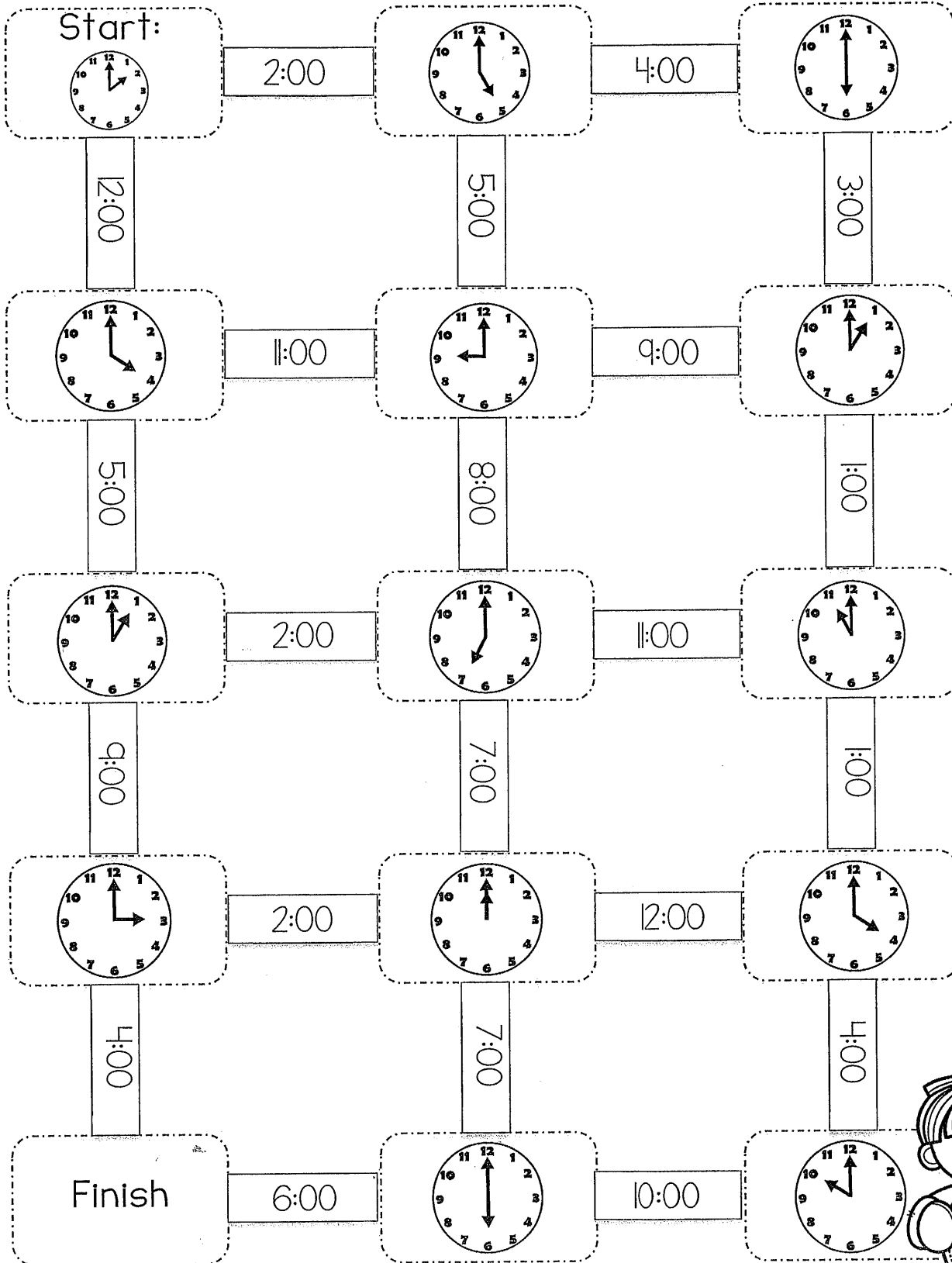
Date





Telling Time Maze Challenge:

Directions: Solve the problem at start and color the correct time. Follow the path with the correct times and continue through the maze until you reach the finish.




RICHARD'S *Great* TRICK

Richard was an old elephant. He lived and traveled with the famous Greyson Circus.

One night, Richard was performing one of his favorite tricks. The trick was to stand on one leg on a little box. It was difficult to do and required all his concentration. Richard took a deep breath and put all of his weight onto one foot.

Yes! Richard breathed out in delight. He'd done it!

The audience clapped and cheered.



Answer the questions in complete sentences.

1) Who did Richard live and travel with?

2) Describe Richard's favorite trick.

3) Why do you think the audience clapped when Richard performed his trick?


4) Have you seen animals perform tricks before? Describe what happened.

MRS. WINKLE'S *Passionfruit* VINE

Mrs. Winkle grew passionfruit vines in her back garden. They clung to the fence and spread all the way from her porch to the neighbor's gate.

The only problem was... there were no bees! Without bees to pollenate the flowers, Mrs. Winkle knew that the plant would not form any passionfruit. To solve this problem, she used a paintbrush to transfer the pollen from one flower to the next!

And sure enough, Mrs. Winkle's vines grew many passionfruit!



Answer the questions in complete sentences.

1) Where did Mrs. Winkle's passionfruit vines grow?

2) How did Mrs. Winkle pollenate the passionfruit flowers?

3) What do you think Mrs. Winkle did with all the passionfruit?

4) Do you like gardening? Why/Why not?

THE *Terrible* DROUGHT

Monday marked the third month in a row since it had rained. Farmer John was worried. His crops were drying out in the sun. His animals were getting thin and sickly.

Farmer John's wife, Ally, tried to reassure him that the rain would come soon. She had checked the weather report and a big raincloud was coming toward them.

The following day, the raincloud arrived. Not a lot of water fell from the sky, but it was better than nothing.



Answer the questions in complete sentences.

1) What was special about Monday?

2) How did Ally try to reassure her husband?

3) Why do you think Farmer John was worried about the lack of rain?

4) Would you like it to never rain? Why/Why not?





