

Name _____

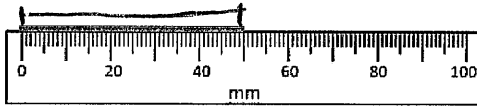
Date _____




READING SCALES 3C

Use your knowledge of the number system to read these scales which are going up ones, fives and tens. Remember to include the units of measurement.

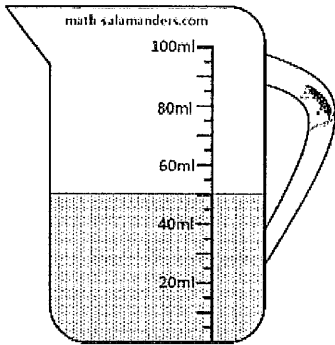
1) How long? _____



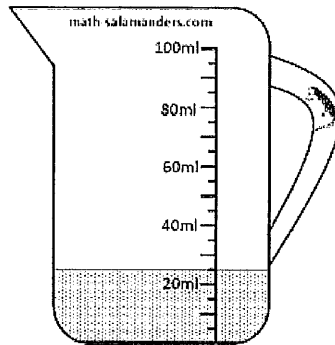
2) How long? _____



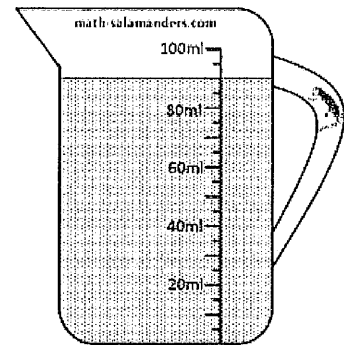
3) How much? _____



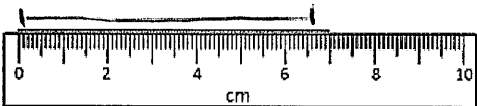
4) How much? _____



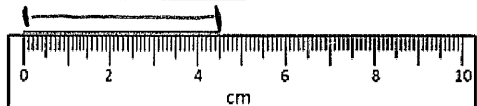
5) How much? _____



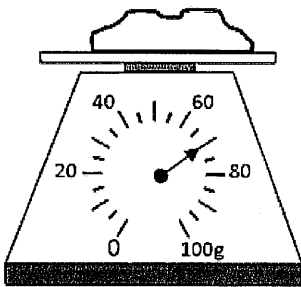
6) How long? _____ cm



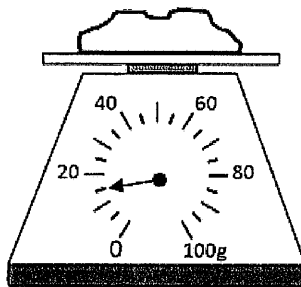
7) How long? _____ cm



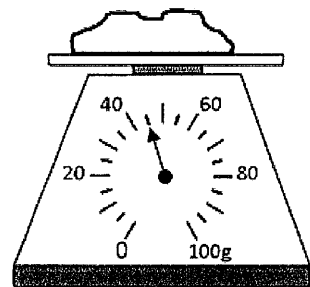
8) How heavy? _____



9) How heavy? _____



10) How heavy? _____



Name _____ Date _____

Read the paragraph. Then answer the questions.

Snow!

Molly loves the snow.

As soon as the first **flakes** fall,
she gets out her sled.

She can't wait to slide down the hill.

Molly also loves to go skiing with her dad.

She likes making snow people and snow animals, too.

She even loves the way snow looks.



1. The main idea of this story is
 - A. Molly loves to go skiing.
 - B. Molly loves the snow.
 - C. Molly likes to slide down the hill.
2. You can guess that Molly likes
 - A. staying indoors.
 - B. playing outdoors.
 - C. summer days.
3. The word **flakes** in this story means
 - A. cold cereal.
 - B. little bits of snow.
 - C. pretends.

Name: _____


Date: _____

Grade 3 Reading Comprehension Worksheet

THE RED-HEADED WOODPECKER

Read the story below.

Phyllis sat in her own room. The window was open and into the room darted a bird. In a moment he flew to the ledge above her door. With his strong little bill he began to rap, rap at the wood. "You act like a woodpecker, but you do not look like one," said Phyllis. "You do not know all about woodpeckers," said the bird. "I belong to the family of red-headed woodpeckers." "You?" cried Phyllis. "But where is your red cap?" "I am a woodpecker, surely. But I am quite young yet. My mother said, 'Wait a little longer, when you are quite grown your cap will be as red as my own.'" "Well," said Phyllis, "I am very glad you came to see me." "Do you stay here in the winter, then?" Phyllis asked. "Oh, yes, we often stay all winter." "Must you go?" asked Phyllis. "Here is a strawberry for you." "Thanks," said the bird, pecking away at the fruit.



Answer each question.

1. What did the bird do into the Phyllis's room?

2. What did Phyllis say to the bird?

3. What did woodpecker reply?

4. Why did Phyllis happy?

5. What did Phyllis give to the woodpecker?

6. Do you like birds? Tell the name of your favourite bird?

Mystery Cryptogram

Name _____

Kindness

23 6 14 15 9 18 25 6

4 8 6 6 9 11 5 2 15 12 15 21


8 11 9 15 11 5 2 8 6 12 15 21

2 8 17 9 15 11 14 15 23 22

12 15 21 19 23 17 9 12 15 21 11

17 9 11 12 3 9 18 6 2 9 3 9 18 6

11 9 6 21 11 25 18 6 15 12 15 21



A	B	C	D	E	F	G	H	I	J	K	L	M	N	O	P	Q	R	S	T	U	V	W	X	Y	Z
8	3	10	14	9	22	19	2	23	13	24	20	4	25	15	1	26	11	18	6	21	17	5	16	12	7

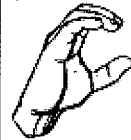
American Sign Language Chart



A



B



C



D



E



F



G



H



I



J



K



L



M



N



O



P



Q



R



S



T



U



V



W



X



Y



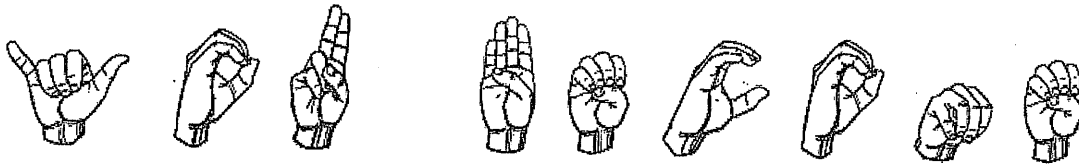
Z

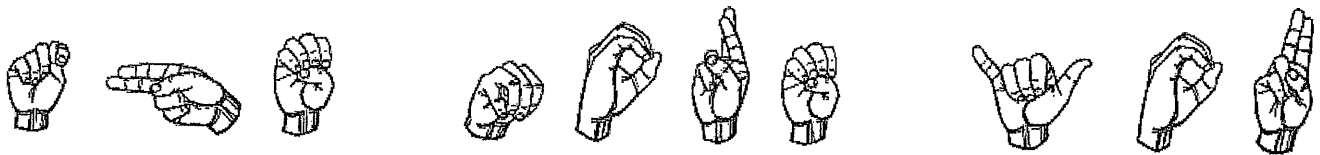
USE The Sign Language Alphabet Page
To Decode the message.

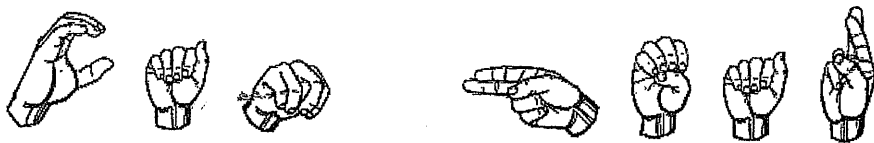
ASL Finger Spelling Quotes

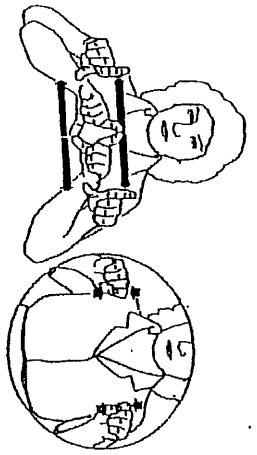
Can you figure out the famous quote?



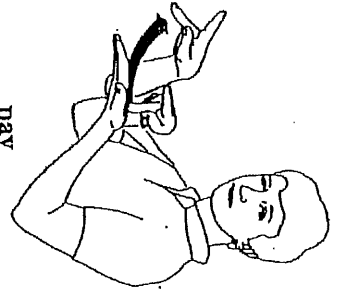








card



pay



owe



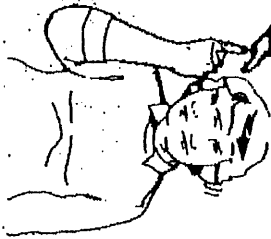
late



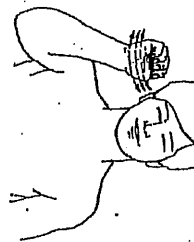
library



understand



don't understand



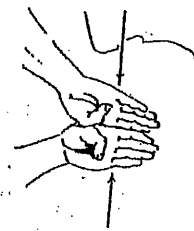
emergency



deaf



close



Days of the Week



Monday



Tuesday



Wednesday



Thursday



Friday



Saturday



Sunday

Name

Date



MONEY MATCH TO \$1 SHEET 1

Draw a line to match the coins to the correct total of money.

	51¢
	26¢
	35¢
	21¢
	31¢
	42¢
	55¢
	37¢
	40¢



2ND GRADE

MATH-SALAMANDERS.COM
































Name _____

Date _____



WHO HAS MOST? TO \$2 SHEET 1

Use the correct symbol: $>$, $<$ or $=$ to show whether Newton or Quadra has the most money.

 Newton	Symbol	 Quadra
 	$>$	 
  		
 		 
  		 
   		
   		  

Subtracting 2-Digit Numbers (A)

Name: _____

Date: _____

Calculate each difference.

$$\begin{array}{r} 54 \\ - 36 \\ \hline \end{array}$$

$$\begin{array}{r} 93 \\ - 11 \\ \hline \end{array}$$

$$\begin{array}{r} 80 \\ - 25 \\ \hline \end{array}$$

$$\begin{array}{r} 33 \\ - 26 \\ \hline \end{array}$$

$$\begin{array}{r} 37 \\ - 19 \\ \hline \end{array}$$

$$\begin{array}{r} 81 \\ - 39 \\ \hline \end{array}$$

$$\begin{array}{r} 50 \\ - 34 \\ \hline \end{array}$$

$$\begin{array}{r} 85 \\ - 14 \\ \hline \end{array}$$

$$\begin{array}{r} 73 \\ - 37 \\ \hline \end{array}$$

$$\begin{array}{r} 88 \\ - 66 \\ \hline \end{array}$$

$$\begin{array}{r} 88 \\ - 59 \\ \hline \end{array}$$

$$\begin{array}{r} 72 \\ - 12 \\ \hline \end{array}$$

$$\begin{array}{r} 56 \\ - 56 \\ \hline \end{array}$$

$$\begin{array}{r} 96 \\ - 81 \\ \hline \end{array}$$

$$\begin{array}{r} 60 \\ - 12 \\ \hline \end{array}$$

$$\begin{array}{r} 98 \\ - 53 \\ \hline \end{array}$$

$$\begin{array}{r} 64 \\ - 29 \\ \hline \end{array}$$

$$\begin{array}{r} 31 \\ - 22 \\ \hline \end{array}$$

$$\begin{array}{r} 63 \\ - 19 \\ \hline \end{array}$$

$$\begin{array}{r} 95 \\ - 84 \\ \hline \end{array}$$

$$\begin{array}{r} 63 \\ - 23 \\ \hline \end{array}$$

$$\begin{array}{r} 75 \\ - 23 \\ \hline \end{array}$$

$$\begin{array}{r} 77 \\ - 32 \\ \hline \end{array}$$

$$\begin{array}{r} 65 \\ - 25 \\ \hline \end{array}$$

$$\begin{array}{r} 85 \\ - 48 \\ \hline \end{array}$$



Blank oval shapes for names in the top-left section of the family tree.

Great-Grandmother

Great-Grandmother

Great-Grandfather

Great-Grandfather

Great-Grandmother

Great-Grandmother

Great-Grandfather

Great-Grandfather

Grandmother

Grandmother

Mother

Mother

Me

Me

Grandmother

Grandmother

Father

Father

Grandfather

Grandfather

Great-Grandmother

Great-Grandmother

Great-Grandfather

Great-Grandfather

Great-Grandmother

Great-Grandmother

Great-Grandfather

Great-Grandfather


Blank oval shapes for names in the bottom-right section of the family tree.

FAMILY TREE

Fact and Opinion

Read each sentence and decide if it is a fact or an opinion. If it is a **FACT**, circle F. If it is an **OPINION**, circle O.

- | | | | |
|---|---|-----|--------------------------------|
| F | O | 1. | The sky is blue. |
| F | O | 2. | My neighbor is friendly. |
| F | O | 3. | Pizza is the best food. |
| F | O | 4. | That bird is beautiful. |
| F | O | 5. | My mom makes the best pie. |
| F | O | 6. | I drank milk with my sandwich. |
| F | O | 7. | The balloon is red and blue. |
| F | O | 8. | Swimming is the best exercise. |
| F | O | 9. | The car has a flat tire. |
| F | O | 10. | It is raining outside today. |



Shark Word Find

P D H L Z C I C K M A K O T Q
R M A F Q I N V R N E A K V N
E P B R E G I T A D X M U U H
D O I M R X K E H V J M D X R
A G T D Q I S S S W Y N I B S
T L A A G S W B G L E D I W Y
O Y T N P O W E R F U L Y F S
R N G G N K Y L O T V S R N Y
I A V E E S R U N R E U S X G
Z E P R D A E H R E M M A H D
A C V P E Y N D F W T Q H R C
W O L X O C K N K E G E P A X
M C A R T I L A G E E G W B J
H S I F X X E L A H W R Y B W
L F T E E T H B A S K I N G T

FIN

HAMMERHEAD

POWERFUL

SKIN

NURSE

BASKING

OCEAN

REEF

CARTILAGE

PREDATOR

SHARK

SWIM

WHALE

MAKO


DANGER

HABITAT

FISH

TEETH

TIGER



NEVER

Forget

who you

ARE

