











coloring[®]

Learning to Tell Time


Write the time under the first set of clocks. The first one has been done for you.




9:15




Now draw the hands on these analog clock faces to match the digital time already given. The first one has been done for you.




9:45




12:15




3:30




7:00




10:15



6:00



5:15



11:00

Name _____

Christmas Tree Add an Adjective

Write an adjective from the list in each blank. You may only use an adjective once.

There is a _____ star at the top.

The lights on the tree are

We hung _____

ornaments on the tree.

The candy canes on the tree look

The tree is

There are _____ presents under the tree.

Adjective List

sweet

shiny

four

tall

pretty

blue

wonderful

silver

round

yummy

six

short

green

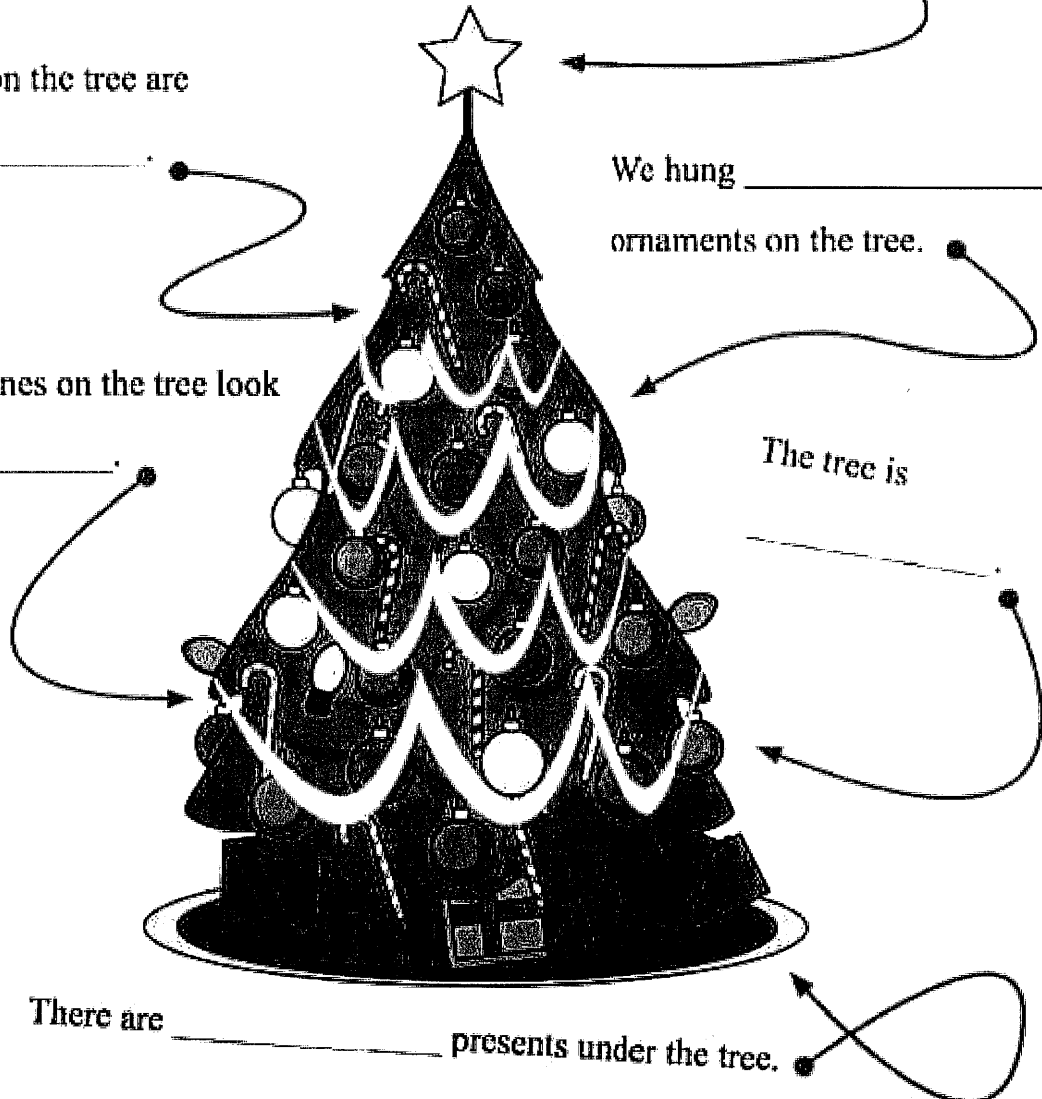
big

bright

red

beautiful


gold



Name: _____

Candy Cane Maze

Find your way through the candy maze.



Name _____ Date _____

Double-Digit Addition and Subtraction

Solve the addition and subtraction problems below, regrouping when needed.

$$\begin{array}{r} 10 \\ +15 \\ \hline \end{array}$$

$$\begin{array}{r} 44 \\ +36 \\ \hline \end{array}$$

$$\begin{array}{r} 81 \\ +27 \\ \hline \end{array}$$

$$\begin{array}{r} 12 \\ +88 \\ \hline \end{array}$$

$$\begin{array}{r} 24 \\ -16 \\ \hline \end{array}$$

$$\begin{array}{r} 59 \\ -40 \\ \hline \end{array}$$

$$\begin{array}{r} 99 \\ -32 \\ \hline \end{array}$$

$$\begin{array}{r} 63 \\ -29 \\ \hline \end{array}$$

$$\begin{array}{r} 35 \\ +35 \\ \hline \end{array}$$

$$\begin{array}{r} 76 \\ +25 \\ \hline \end{array}$$

$$\begin{array}{r} 13 \\ +52 \\ \hline \end{array}$$

$$\begin{array}{r} 48 \\ +16 \\ \hline \end{array}$$

$$\begin{array}{r} 92 \\ -18 \\ \hline \end{array}$$

$$\begin{array}{r} 30 \\ -21 \\ \hline \end{array}$$

$$\begin{array}{r} 76 \\ -57 \\ \hline \end{array}$$

$$\begin{array}{r} 84 \\ -61 \\ \hline \end{array}$$

Missing Numbers

Fill in the missing numbers in the chart.

1		3	4	5	6		8	9	10
11		13	14		16	17	18		20
21	22		24	25	26		28	29	30
31	32	33	34	35	36	37	38	39	
	42		44		46	47	48	49	50
51	52	53	54	55	56	57		59	60
61		63		65		67	68	69	
71	72		74	75	76		78	79	80
	82	83	84		86	87	88	89	90
91	92		94	95		97	98		100

Multiply It!

Solve each multiplication word problem. Show your work!

An octopus has 8 legs.
Kyle counted 5 octopi in the tank.
How many legs are there in the tank?

.....



Vera owns 17 pairs of socks.
How many socks does she have
in all?

.....



Eric owns 12 pairs of sunglasses.
Alan owns 3 times more than Eric
owns. How many pairs of
sunglasses does Alan own?

.....



Peter Planter has 7 rows of
pineapple plants with 8 plants in
each row. How many pineapple
plants does he have?

.....



Uri and his family eat 2 loaves of
bread a day. Each loaf has 6
slices. How many slices of bread
do Uri and his family
eat in 4 days?

.....



Yolanda makes 3 sweaters a day.
She sews 6 buttons onto each
sweater she makes. How many
buttons will she sew in 3 days?

.....




Money Practice Test

Add up the coins and write down the total



= _____



= _____



= _____



= _____

Name _____

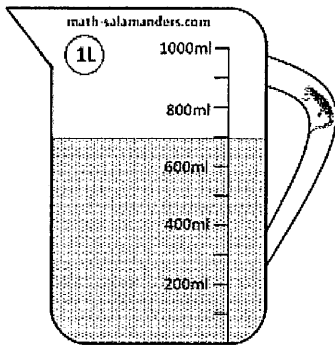
Date _____



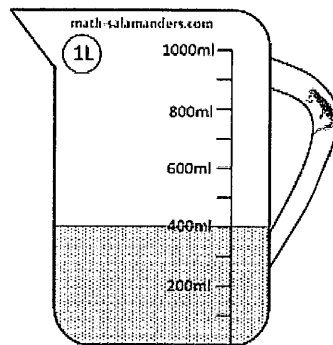
READING SCALES 2C

Use your knowledge of the number system to read these scales which are going up in ones, tens or hundreds.

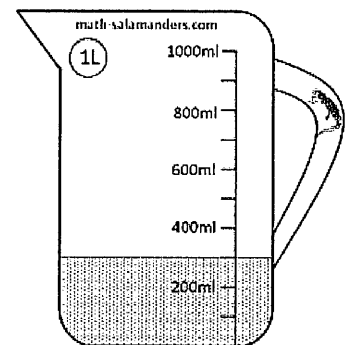
1) How many ml? _____



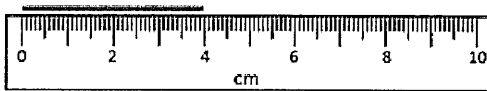
2) How many ml? _____



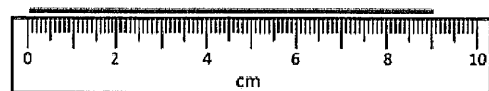
3) How many ml? _____



4) How long is the line? _____ cm



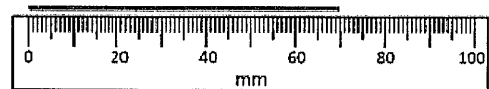
5) How long is the line? _____ cm



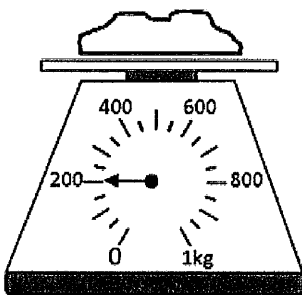
6) How long is the line? _____ mm



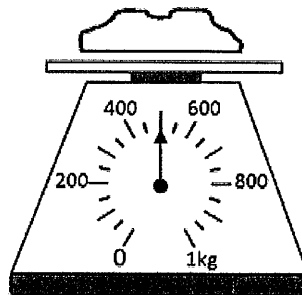
7) How long is the line? _____ mm



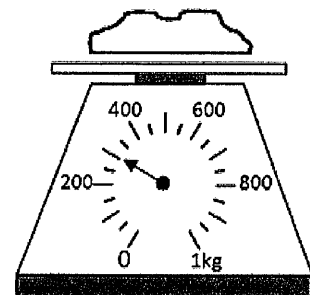
8) How many g? _____



9) How many g? _____



10) How many g? _____



Christmas in England

In England, children do not get their presents on Christmas Eve, 24th of December. Father Christmas comes at night when everyone is asleep. His reindeer can fly and takes him from house to house to deliver all the gifts. They land on the roofs of the houses and then Father Christmas climbs down the chimney to leave the presents under the Christmas tree. In the morning of Christmas Day the 25th of December, children usually get up very early to unwrap their presents. Then they have plenty of time to play with their new toys. Christmas dinner is served in the early afternoon. Most people eat turkey, sprouts and loads of other vegetables, not forgetting Christmas pudding. The 26th of December is called Boxing Day. It has not always been a holiday. People used to go back to work on that day where their bosses gave them little Christmas presents in small boxes. That is why the day is called Boxing Day.



Read the text again and then answer the questions below:


1. When do children get their presents?

2. Where does Father Christmas's Sleigh land?

3. Where does he leave the presents?

4. What do people eat on that day?

5. Why is the 26th of December called Boxing Day?



Using nouns

Grade 2 Grammar Worksheet

Circle the nouns (11 of them!).

holiday jump queen wrench popcorn
towel lunch use hobby haircut
take bricks cracker ride mitten
















Complete the sentences using nouns from above.

1. The kids eat _____ outside in the summer.
2. My dad used a _____ to fix the leak.
3. I had a _____ before having my picture taken.
4. If Amy marries a king she will be a _____.
5. We go to brunch on every _____.
6. Joe's favorite _____ is coin collecting.
7. They always get _____ at the movies.
8. I love the crunch of a _____.
9. Bill needs a _____ to dry off after his swim.
10. The house is built with red _____.

Name: _____

Which is More?

Directions: Compare the numbers on the Christmas Lights using $<$, $>$ and $=$.



Name _____

Directions: Read the passage. Write the correct answer for each question.

Decorate the Christmas Tree

Macy and Max help decorate the Christmas tree. First, they put the string of colorful lights on the tree. Next, they hang the glittery ornaments. Last, Max puts the shiny star on top of the tree. Macy and Max think the tree is very pretty now!



What do Macy and Max do first?

What do they do next?

Who puts the star on top of the tree?

Christmas Word Search



A N

F R

Y J W Z

K Z I Y

T W K P E Y

K F U D C V

X J O L L Y G J

G M Y S J V S L

G B U B L M J Z S C

D H V S L P X V I G

T R Q O P E R H L H B A

T F I N T B C W P J N L

R S Y Z O K I B M O S O I Z

E T Y L P W O A E U R U U T

C E J C Y I T T J L U H C L P P

N D C V D U G K A I V P F Q B T

O S N Y L E D M S Q W G Y V B P S A

P K I G F A I I W U S S Q E H V V R

T R E E X S Y E S W Z T P O B J G S L P

L W V R E L U C T E L V E S N D Y U F C

I Q P N L F E K E L E G G N O G O F T M I X

A Y G S R Z D J L E Q V N T O J G X S B B N

P P T B O C X R Z E T N B I M U I E P J D M D Y

Y Y P S O H J B S B O M M P O B V C J N N H L H

U N R U A L I V M F R E Q V M Q I X T W D H W X G P

R F R M N B M S C H A X Q S G N I K C O T S C T F E

M L P E P T Q N I I H T N G T G C O E X A R M A Z A K W

C V X M Q A Y E O R E E R P R V N W X B D L C K O Y X R

U G K F J Z J H Y N H T A E R W X B H M T U O H O Q P F W O

F W I V O G B I N X K C O V X A Y N O A I W Z N P Y O V L M

BELLS
STOCKINGS
WREATH
ELVES
SLED

CELEBRATE
EGGNOG
TREE
JOLLY
SANTA

MERRY
MISTLETOE
CHIMNEY
REINDEER

Christmas Word Search


G Q C E L V E S Z L I G H T S
D C Z L F J S R V N U L B Z B
C E L E B R A T E W M J E Y F
Q F D C W G N R E I N D E E R
P F Z E H J T G C O O K I E S
G R A N C R A I R I W B I H C
O M E M N O I U K S F V A Z A
R I I S I N R S N D O H J D N
N M M S E L E A T E C Q B W D
A G Z D T N Y C T M J C P R Y
M I I I U L T T W I A B T E C
E V H N Z W E S S Q O S B A A
N I E N A Q Q T F T P N J T N
T N G E P Q I C O P Y Z S H E
D G A R J W D E Q E Y P E B S

Decorations
Celebrate
Lights
Giving

Candy Canes
Ornament
Presents
Dinner

Christmas
Reindeer
Family
Wreath

Mistletoe
Cookies
Elves
Santa





Name: _____

Date: _____

Color by Number Butterfly

Directions: Use the color key below to reveal the beautiful butterfly.

1 = Green

2 = Orange

3 = Brown

4 = Blue

5 = Purple

6 = Yellow

