

Name _____

Read the following story and answer the questions below.

Jack is a seven year old boy who loves adventure. He likes to climb trees and find interesting bugs and leaves in his backyard. He also likes to play with his dog, Daisy. Daisy is a two year old yellow lab mix. Jack and Daisy are best friends.

1. How old is Jack?

He is _____ .

2. What does Jack like to do in his backyard?

He likes to _____ .

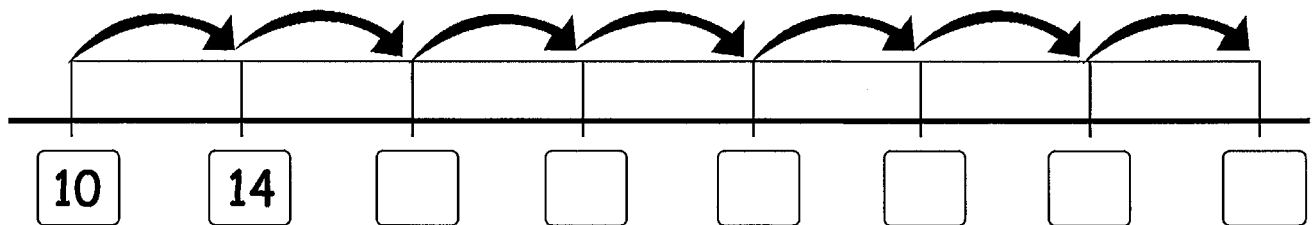
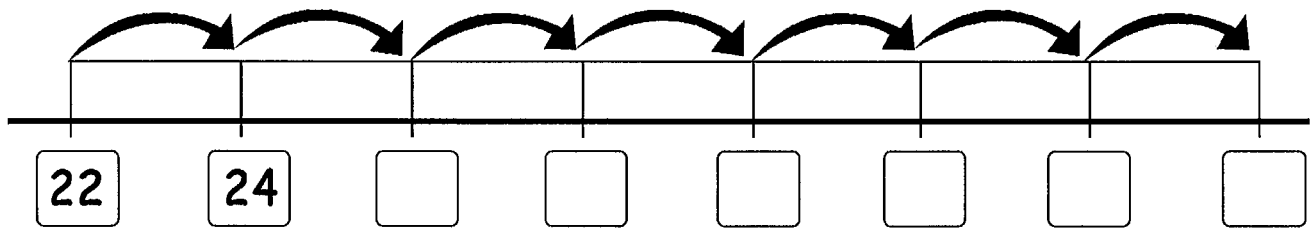
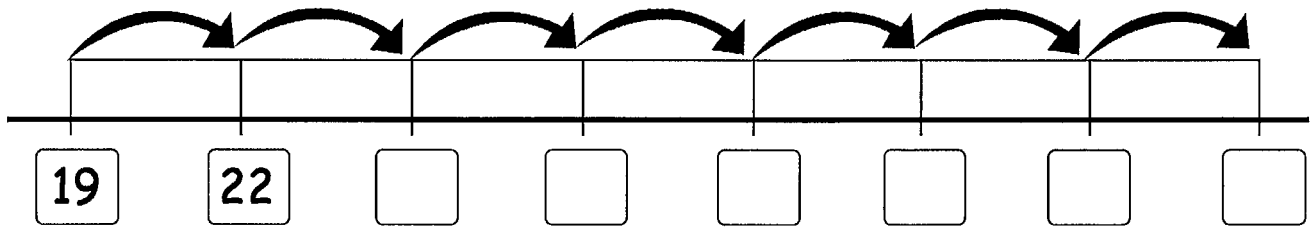
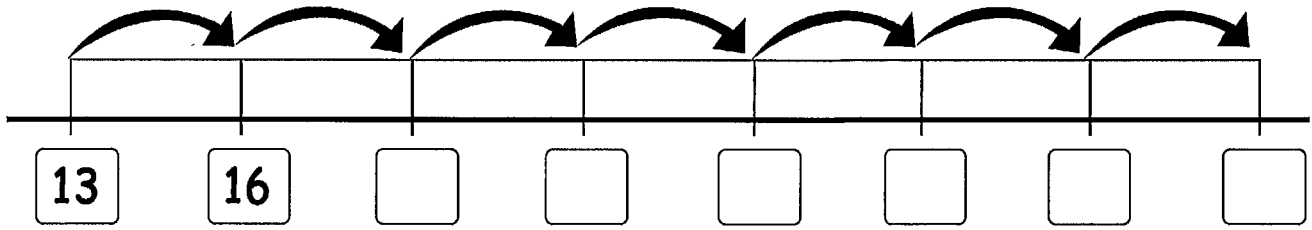
3. What kind of a dog is Daisy?

She is a _____ .



Skip Counting

Skip Count and fill in the boxes.

















Name _____

Date _____



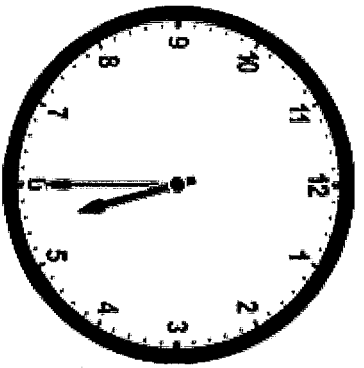
SUBTRACTION WORD PROBLEMS TO 50 SHEET 1

These problems do not involve regrouping.		WORKING OUT
1)	<p>There are 34 .</p> <p>13  swim away.</p> <p>How many are left? _____</p>	
2)	<p>I have 36 .</p> <p>I eat 12 .</p> <p>How many do I have left? _____</p>	
3)	<p>Sally has 35 . Frazer has 15 .</p> <p>How many more  does Sally have? _____</p>	
4)	<p>There are 28 .</p> <p>14  fly away.</p> <p>How many are left? _____</p>	
5)	<p>Captain has 27 .</p> <p>He gives 23  away.</p> <p>What is 27 minus 23? _____</p>	
6)	<p>I make 39 .</p> <p>12  get knocked down.</p> <p>How many  are left? _____</p>	

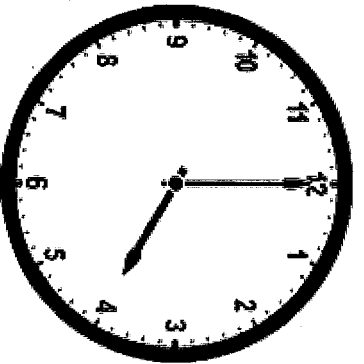
Name _____

Date _____

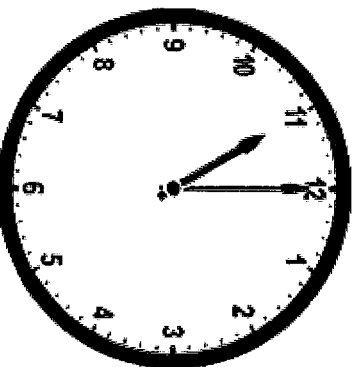
Circle the time below each clock that correctly tells the time.



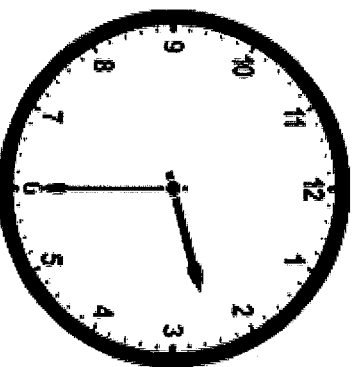
- a. 6:05
- b. 5:30
- c. 5:06



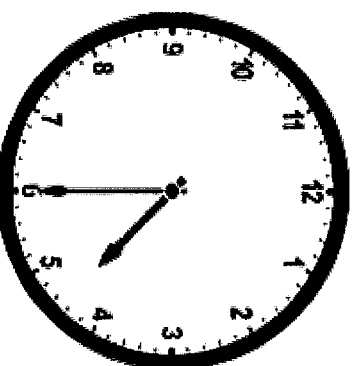
- a. 4:60
- b. 12:04
- c. 4:00



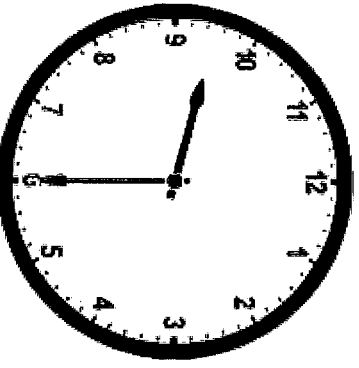
- a. 11:00
- b. 11:60
- c. 12:11



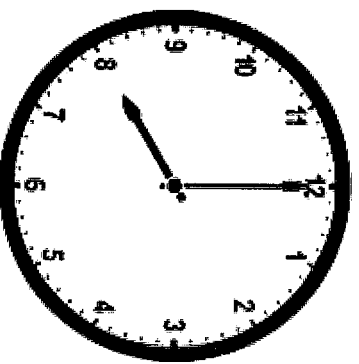
- a. 2:06
- b. 2:30
- c. 6:02



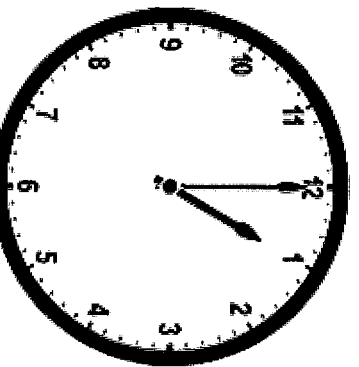
- a. 4:30
- b. 4:06
- c. 6:04



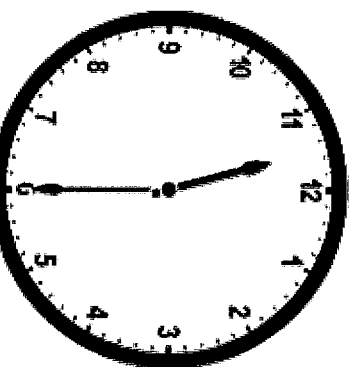
- a. 6:09
- b. 9:06
- c. 6:30



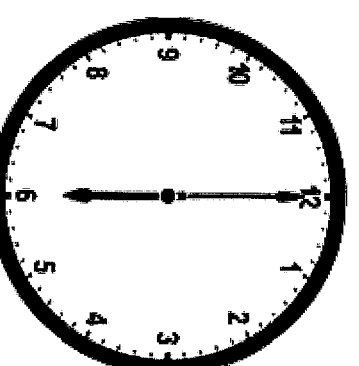
- a. 8:00
- b. 8:60
- c. 12:08



- a. 1:00
- b. 1:60
- c. 12:01



- a. 11:30
- b. 11:06
- c. 6:11



- a. 12:30
- b. 6:00
- c. 6:60

MD 1.3 Tell and write time in hours and half-hours using analog and digital clocks.

Name _____

Word Problems

1. How many sides are on 4 triangles?


2. Can you finish the patterns?

1 1 3 3 5 5 _____ 9 _____

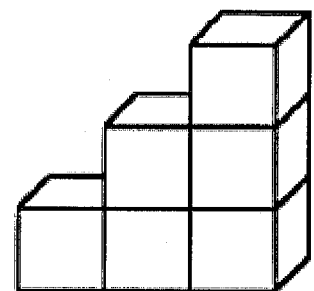
red blue yellow yellow red blue yellow _____

12 14 16 _____ 20 22 _____

3. How can you share this cake evenly with 6 friends? Draw a line to show the cut. Can you think of one more way to share the cake evenly? (Draw it on the back)



4. You have a dime, 2 nickels, 1 quarter and 3 pennies. How much money do you have?



5. If you had 3 staircases like the one in the picture, how many cubes would you need?

6. A man was carrying balloons but the wind blew 12 away. He has 17 balloons left. How many did he start with?

Name

Date



2 DIGIT SUBTRACTION WITH REGROUPING SHEET 3

$$\begin{array}{r} 1) \quad 43 \\ - 19 \\ \hline \end{array}$$

$$\begin{array}{r} 2) \quad 52 \\ - 35 \\ \hline \end{array}$$

$$\begin{array}{r} 3) \quad 65 \\ - 38 \\ \hline \end{array}$$

$$\begin{array}{r} 4) \quad 81 \\ - 23 \\ \hline \end{array}$$

$$\begin{array}{r} 5) \quad 90 \\ - 47 \\ \hline \end{array}$$

$$\begin{array}{r} 6) \quad 63 \\ - 7 \\ \hline \end{array}$$

$$\begin{array}{r} 7) \quad 44 \\ - 37 \\ \hline \end{array}$$

$$\begin{array}{r} 8) \quad 82 \\ - 66 \\ \hline \end{array}$$

$$\begin{array}{r} 9) \quad 53 \\ - 39 \\ \hline \end{array}$$

$$\begin{array}{r} 10) \quad 71 \\ - 67 \\ \hline \end{array}$$

$$\begin{array}{r} 11) \quad 83 \\ - 58 \\ \hline \end{array}$$

$$\begin{array}{r} 12) \quad 94 \\ - 18 \\ \hline \end{array}$$

$$\begin{array}{r} 13) \quad 61 \\ - 29 \\ \hline \end{array}$$

$$\begin{array}{r} 14) \quad 43 \\ - 28 \\ \hline \end{array}$$

$$\begin{array}{r} 15) \quad 80 \\ - 54 \\ \hline \end{array}$$

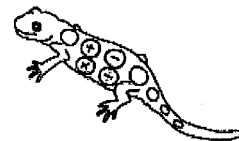
$$\begin{array}{r} 16) \quad 92 \\ - 35 \\ \hline \end{array}$$

$$\begin{array}{r} 17) \quad 73 \\ - 57 \\ \hline \end{array}$$

$$\begin{array}{r} 18) \quad 84 \\ - 45 \\ \hline \end{array}$$

$$\begin{array}{r} 19) \quad 96 \\ - 49 \\ \hline \end{array}$$

$$\begin{array}{r} 20) \quad 81 \\ - 37 \\ \hline \end{array}$$



Name

Date



COLUMN SUBTRACTION 2 DIGITS SHEET 1

Remember to subtract the ones first and then the tens.

$$\begin{array}{r} 1) \quad 27 \\ - 15 \\ \hline \end{array}$$

$$\begin{array}{r} 2) \quad 33 \\ - 15 \\ \hline \end{array}$$

$$\begin{array}{r} 3) \quad 62 \\ - 16 \\ \hline \end{array}$$

$$\begin{array}{r} 4) \quad 51 \\ - 26 \\ \hline \end{array}$$

$$\begin{array}{r} 5) \quad 43 \\ - 17 \\ \hline \end{array}$$

$$\begin{array}{r} 6) \quad 68 \\ - 24 \\ \hline \end{array}$$

$$\begin{array}{r} 7) \quad 37 \\ - 16 \\ \hline \end{array}$$

$$\begin{array}{r} 8) \quad 40 \\ - 31 \\ \hline \end{array}$$

$$\begin{array}{r} 9) \quad 57 \\ - 45 \\ \hline \end{array}$$

$$\begin{array}{r} 10) \quad 62 \\ - 26 \\ \hline \end{array}$$

$$\begin{array}{r} 11) \quad 47 \\ - 35 \\ \hline \end{array}$$

$$\begin{array}{r} 12) \quad 68 \\ - 18 \\ \hline \end{array}$$

$$\begin{array}{r} 13) \quad 60 \\ - 13 \\ \hline \end{array}$$

$$\begin{array}{r} 14) \quad 49 \\ - 25 \\ \hline \end{array}$$

$$\begin{array}{r} 15) \quad 61 \\ - 39 \\ \hline \end{array}$$

Unscramble the words.

CKED _ _ _ () _

APLDED _ () _ _ _ _

ORTP () _ _ _ _

EATWR _ _ _ () _ _

CAINB _ _ () _ _ _

RVIRE _ _ () _ _ _


NNEGIE _ () _ _ _ _


EAMTS () _ _ _ _ _

LHEWE _ _ _ _ _ () _

ATOB _ _ () _ _ _

GFAL _ _ _ _ () _







Disney
FROZEN

Connect the dots in order. Start at 1 draw to 2, then 3, then 4, and keep going. You can color it when you're done.

Start ↓

