


i'm ready for



SUMMER

FUN

# Word Search

*Find these "beachy" words! Look up, down, backward, forward and diagonally.*

S	B	E	A	C	H	B	A	L	L
U	P	O	L	F	P	I	L	F	S
N	N	M	C	S	K	R	N	F	H
A	B	E	A	C	H	A	B	U	E
C	M	C	A	R	C	O	C	N	L
H	H	I	S	E	A	G	U	L	L
Y	P	B	W	T	B	B	B	S	S
A	A	A	A	S	P	H	A	T	C
W	G	X	S	U	L	N	G	K	L
A	L	W	C	O	D	H	A	Q	I

BEACH  
SEAGULL  
SAND  
BEACHBALL  
FLIP FLOP  
SHELLS  
SUN

SWIM  
BOAT  
FUN



Name: \_\_\_\_\_




## Math Buzz

There are 572 students enrolled in Bonner Elementary School, and 394 students enrolled in Bonner Middle School. How many students are enrolled in both schools combined?

Show your work

Elementary School  
572 students



Middle School  
394 students



answer: \_\_\_\_\_ students

Round to the **nearest ten**.

92 \_\_\_\_\_ 46 \_\_\_\_\_

Round to the **nearest hundred**.

532 \_\_\_\_\_ 689 \_\_\_\_\_


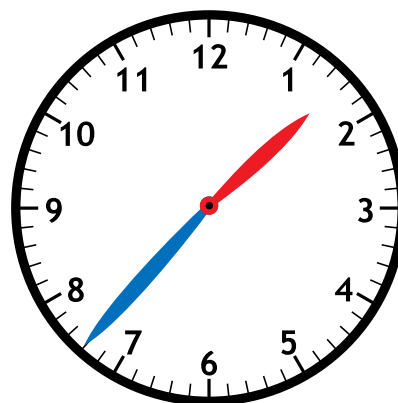
Circle the digits in the ones place.

3 5 4

7 8

5 9 3

Fill in the time on the digital clock to show the same time on the analog clock.



Add. Show your work

$$\begin{array}{r} 550 \\ + 271 \\ \hline \end{array}$$


Find the sum of 233 and 757. \_\_\_\_\_

$$707 + 147 = \underline{\hspace{2cm}}$$

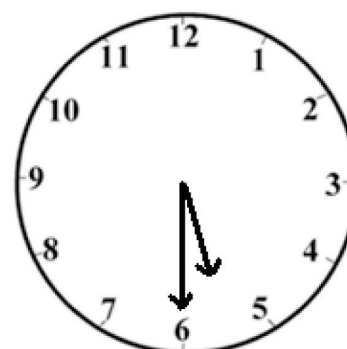
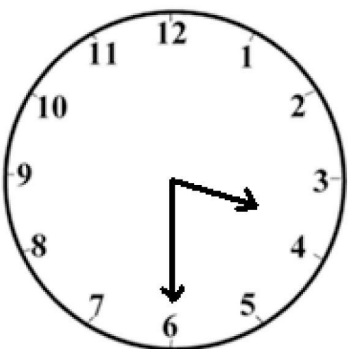
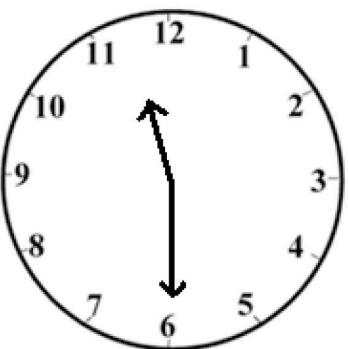



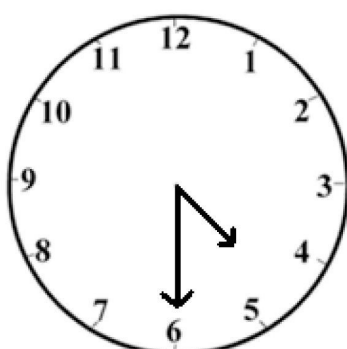

Student Name: \_\_\_\_\_

Score: \_\_\_\_\_

Write Time



1:30



# Summer Word Scramble

BICNA



HTRSOS



ALPI



INIIBK



NMIWGISM



CIE MERAC



TEIK




EUJN



NUYSN




AETH



MAWR





CIVOANTA




LEXAR



NDGVII



What did the ocean say to the beach?



Name: \_\_\_\_\_



# Math Buzz

The Brentwood Auditorium seats 943 people. Last night, 636 people came to see a concert. How many more people could have been seated?

Show your work

answer: \_\_\_\_\_ people

Fill in the missing numbers.

103	559

288	
846	

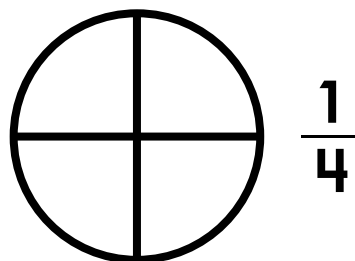
Write the number in expanded and word form.

**863**

expanded: \_\_\_\_\_

word: \_\_\_\_\_


















Color one-fourth of the circle.




Color one-third of the rectangle.



## Room 14's Favorite Subjects

Math	     
Science	   
Reading	    
Writing	 

Each  = 2 votes

How many students chose math as their favorite subject?


answer: \_\_\_\_\_

How many students chose writing as their favorite subject?

answer: \_\_\_\_\_



# Summer



## ACROSS

2. a container often used to play in the sand
3. a small, simple house made of wood
5. a toy that is flown in the air at the end of a long string
6. to move through water by moving your arms and legs
8. T - \_\_\_\_\_
9. the activity of moving through water by moving your arms and legs

## DOWN

1. an activity of plunging head first into the water
3. ice \_\_\_\_\_
4. a girls item of clothing with 2 parts; often worn in the water
6. a common item of clothing in the summer
7. somewhat hot; inbetween hot and cold
8. having plenty of bright sunlight

Name \_\_\_\_\_

Sort the words.

**Noun**

**Verb**

**Adjective**

truck

yellow

home

quick

yell

run

huge

sleep

cat

plate

talk

snow

eat

little

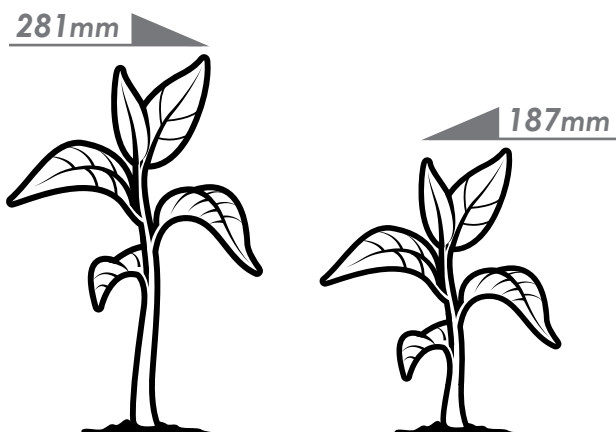
slow

Name: \_\_\_\_\_



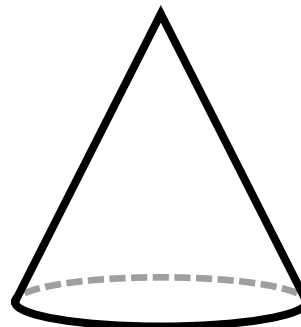
# Math Buzz

Mikayla and Jorge grew bean plants for a science experiment. Mikayla's plant was 281 millimeters tall. Jorge's plant was 187 millimeters tall. How much taller was Mikayla's plant than Jorge's?



answer: \_\_\_\_\_ millimeters

Choose the name of the shape.



sphere


cylinder

cone


Which holds **less** liquid? Circle your answer.



tea cup



bathtub



$$3 + 3 + 3 + 3 + 3 = \underline{\hspace{2cm}}$$

$$5 \text{ groups of } 3 = \underline{\hspace{2cm}}$$

$$5 \times 3 = \underline{\hspace{2cm}}$$

Circle the digits in the hundreds place.

4 3 1

5 4 6

7 4 8



Name: \_\_\_\_\_

CCSS 4.L.5.C Demonstrate understanding of words by relating them to opposites....

## Antonyms

Antonyms are words that are opposites.  
example: **hot** and **cold** are antonyms



Directions: Write the correct antonym next to each word.

dry	pretty	bad	icy
messy	hard	fast	easy
right	small	noisy	friend
asleep	night	angry	rich

big		happy	
good		soft	
wet		poor	
clean		ugly	
enemy		quiet	
slow		wrong	
difficult		hot	
day		awake	

Name

Date



## ADDING 1 AND 10 SHEET 2

A) Fill in the missing numbers on these number tracks.

1)	Count by ones	37	38			41			44	
2)	Count by tens	14	24	34	44			74		
3)	Count by ones	58	59			62				66
4)	Count by tens	19	29	39			69			
5)	Count by ones	94	95		97				101	
6)	Count by tens	3	13	23			53			

B) Work out the answers to these addition problems.

1)  $23 + 1 =$

8)  $62 + 10 =$

2)  $14 + 10 =$

9)  $39 + 1 =$

3)  $67 + 1 =$

10)  $18 + 10 =$

4)  $26 + 1 =$

11)  $49 + 10 =$

5)  $33 + 10 =$

12)  $38 + 1 =$

6)  $19 + 1 =$


13)  $99 + 1 =$

7)  $77 + 10 =$

14)  $53 + 10 =$



Name: \_\_\_\_\_



## Math Buzz

Circle the digits in the tens place.

54

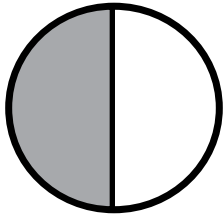
673

834

There were 618 tickets sold at the Glen Park Movie Theater on Saturday. On Sunday, 384 tickets were sold. How many more tickets were sold on Saturday than Sunday?

Show your work

What fraction of the circle is shaded?



$\frac{1}{2}$

$\frac{1}{3}$

$\frac{1}{4}$

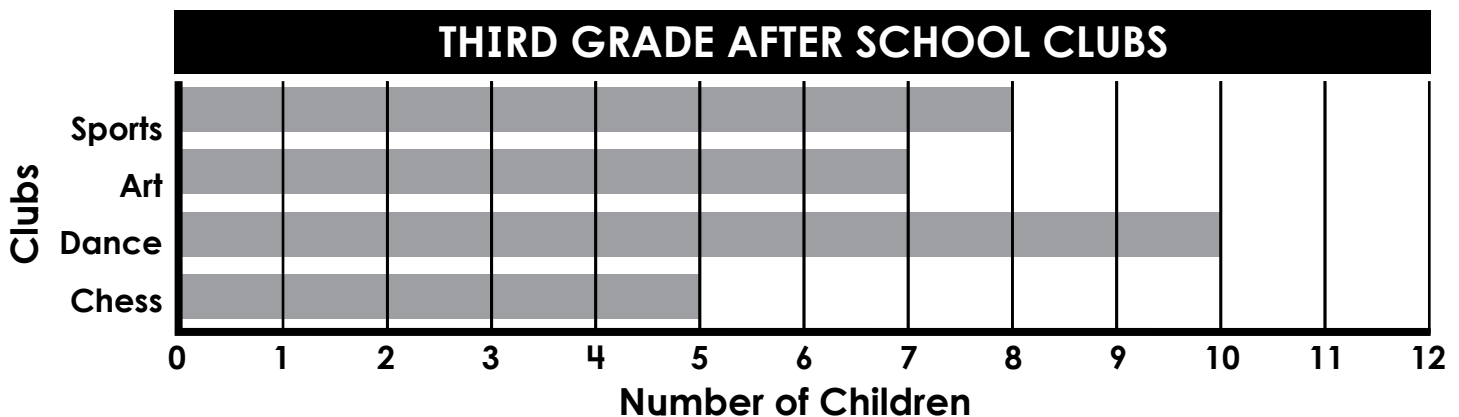
answer: \_\_\_\_\_ tickets

Subtract. Show your work

Find the difference between 865 and 307.

$$578 - 286 = \underline{\hspace{2cm}}$$

$$\begin{array}{r} 752 \\ - 294 \\ \hline \end{array}$$



How many children are in Dance Club?

answer: \_\_\_\_\_

Which club has the least amount of children?

answer: \_\_\_\_\_

