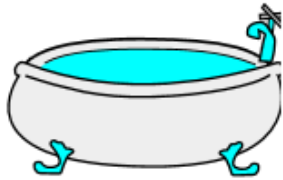


Name : _____

A.M or P.M?

Q. Does this happen in the A.M or P.M? Please circle it.

Morning bath



A.M / P.M

Breakfast



A.M / P.M

Going to school



A.M / P.M

Dinner



A.M / P.M

Sunset



A.M / P.M

Morning walk



A.M / P.M

Name: _____



Math Buzz

The Brentwood Auditorium seats 943 people. Last night, 636 people came to see a concert. How many more people could have been seated?

Show your work

answer: _____ people

Fill in the missing numbers.

103	559

288	
846	

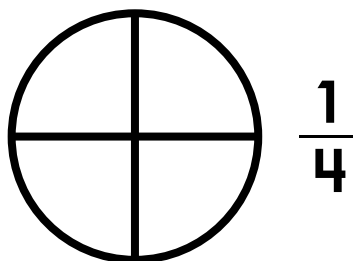
Write the number in expanded and word form.

863

expanded: _____

word: _____


















Color one-fourth of the circle.




Color one-third of the rectangle.



Room 14's Favorite Subjects

Math	     
Science	   
Reading	    
Writing	 

Each  = 2 votes


How many students chose math as their favorite subject?

answer: _____

How many students chose writing as their favorite subject?

answer: _____

Name: _____



Math Buzz

Circle the digits in the tens place.

54

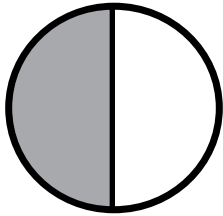
673

834

There were 618 tickets sold at the Glen Park Movie Theater on Saturday. On Sunday, 384 tickets were sold. How many more tickets were sold on Saturday than Sunday?

Show your work

What fraction of the circle is shaded?



$\frac{1}{2}$

$\frac{1}{3}$

$\frac{1}{4}$

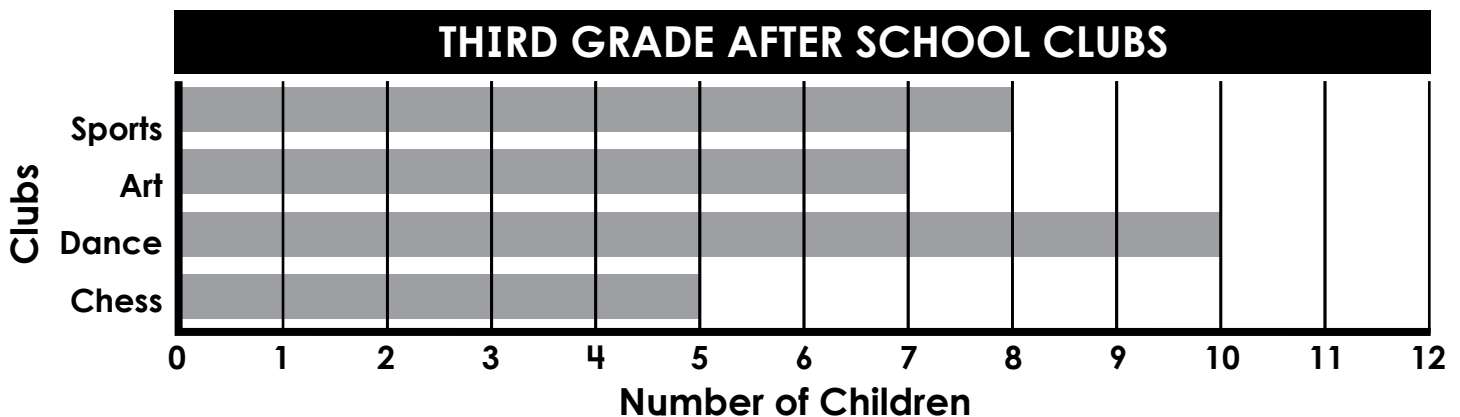
answer: _____ tickets

Subtract. Show your work

Find the difference between 865 and 307.

$$578 - 286 = \underline{\hspace{2cm}}$$

$$\begin{array}{r} 752 \\ - 294 \\ \hline \end{array}$$



How many children are in Dance Club?

answer: _____

Which club has the least amount of children?

answer: _____

Name _____

Date _____



COUNT THE MONEY TO \$10 SHEET 1

Write the total amount of money at the end of each row.

	\$6.10




















Name _____

Date _____




COUNT THE COINS TO \$2 SHEET 1

Write the total amount of money at the end of each row.

 	\$1.20
  	_____
 	_____
 	_____
	_____
 	_____
 	_____
  	_____



Name: _____



Math Buzz

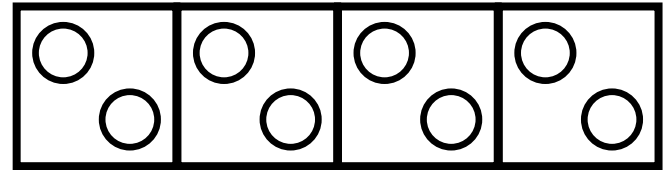


Marco wants to buy a book that costs \$4.29 from the school store. How much money does Marco have?

Does he have enough to buy it?

yes

no



$$2 + 2 + 2 + 2 = \underline{\hspace{2cm}}$$

$$4 \text{ groups of } 2 = \underline{\hspace{2cm}}$$

$$4 \times 2 = \underline{\hspace{2cm}}$$

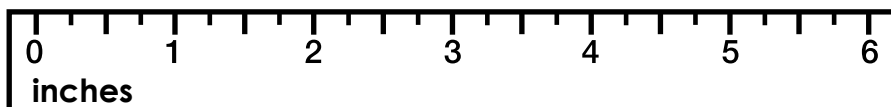
Write the number in expanded and word form.

358

expanded: _____

word: _____

How long is the feather?



The feather is _____ inches long.

Draw a shape that has 4 equal sides.

Music Word Search



S	B	F	H	Y	T	P	A	K	F	E	L	T	S	D	A	N	I	Z	B	E	I
K	U	C	L	O	R	A	S	C	T	T	E	N	T	K	U	H	F	B	R	A	A
V	Y	E	E	A	S	K	P	R	O	E	D	C	A	A	I	L	S	L	A	S	F
J	D	T	H	G	A	R	O	J	V	M	G	V	C	C	Z	V	O	U	A	S	D
W	L	L	T	N	A	F	B	E	H	P	E	G	C	J	B	E	A	R	M	T	S
E	L	N	S	H	H	V	R	I	R	O	R	P	A	R	W	B	T	K	F	R	G
H	X	Z	S	L	P	E	I	X	T	I	L	E	T	H	B	Z	C	A	F	V	Y
M	F	F	E	Z	T	M	L	S	S	Y	I	Y	O	D	M	I	F	L	M	R	E
L	J	T	Q	R	L	N	E	C	I	M	N	J	S	B	Q	H	A	E	C	P	E
C	T	N	A	B	I	R	P	L	Y	W	E	N	J	L	T	H	T	T	X	I	I
M	T	U	A	R	G	M	E	A	S	U	R	E	C	H	D	R	Y	O	W	T	L
L	Q	R	J	S	E	I	B	Y	F	X	C	T	G	E	O	D	T	P	C	C	T
J	G	D	E	A	T	P	W	H	O	L	E	I	T	N	X	S	Z	R	H	H	K
E	B	P	K	B	T	A	E	S	Q	K	E	T	O	R	E	Q	A	B	X	P	J
J	U	H	S	B	L	X	F	A	S	J	O	M	N	R	T	B	M	F	I	I	M
X	A	X	E	F	J	E	L	F	T	D	E	Y	P	I	U	F	D	A	J	M	O
D	N	Q	P	U	L	F	A	C	E	O	Q	I	E	B	J	U	N	N	W	U	D
C	P	K	E	P	L	D	M	L	Y	Y	N	G	Y	S	V	O	M	Z	P	K	F

METRONOME
SHARP
REST
TIE
MEASURE
TEMPO

EIGHTH
STACCATO
QUARTER
WHOLE
TREBLE
LEDGER LINE

FORTE
PITCH
STAFF
PIANO
BAR
DOTTED HALF

HARP
FACE
FLAT
BASS
PRESTO
REPEAT

Name: _____

Luma's Telling Time Quest: Fill Out The Clocks

Help Luma put the correct time on each clock below! Each question will tell you what time it is. **Make the clocks for each question match the time!**

1. It's four o'clock!



2. It's seven-thirty!



3. It's eleven-thirty!



4. It's nine o'clock!



5. It's six-thirty!



6. It's twelve o'clock!



7. It's eight o'clock



8. It's one-thirty!



9. It's ten o'clock!



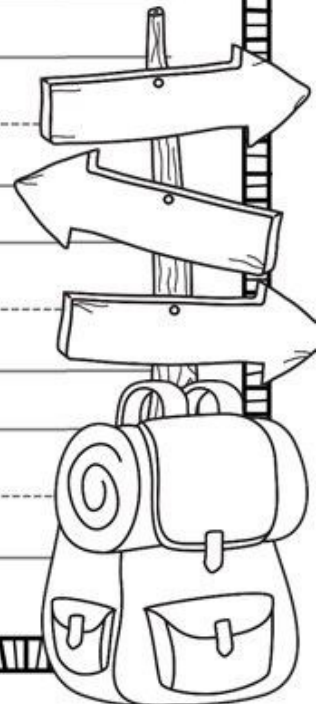
10. It's five o'clock!



11. It's two-thirty!



Where I would go on vacation



Name: _____




Math Buzz


There are 572 students enrolled in Bonner Elementary School, and 394 students enrolled in Bonner Middle School. How many students are enrolled in both schools combined?

Show your work

Elementary School
572 students



Middle School
394 students



answer: _____ students

Round to the **nearest ten**.

92 _____ 46 _____

Round to the **nearest hundred**.

532 _____ 689 _____


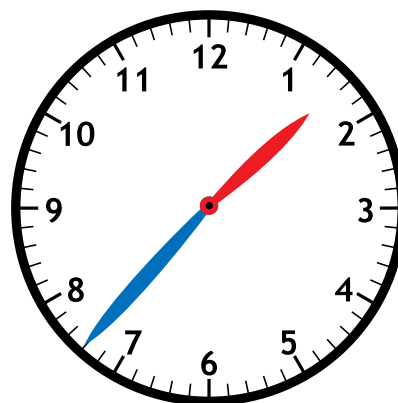
Circle the digits in the ones place.

3 5 4

7 8

5 9 3

Fill in the time on the digital clock to show the same time on the analog clock.




Add. Show your work


$$\begin{array}{r} 550 \\ + 271 \\ \hline \end{array}$$

Find the sum of 233 and 757. _____

$$707 + 147 = \underline{\hspace{2cm}}$$

HELP TOMMY TORTOISE FIND HIS SHELL.








Disney · PIXAR
**FINDING
DORY**

SQUIRT

Disney · PIXAR
**FINDING
DORY**



DORY