

EASTER

WORD SEARCH



			Y	T	L														
		Y	P	H	S	H	Y												
		H	S	S	A	R	G	E											
		Y	R	Y	I	H	I	R	H	Y									
	H	H	D	R	E	T	S	A	E	H	Q								
	U	N	S	P	R	I	N	G	I	R	H								
B	N	I	A	A	L	D	L	A	S	I	R	B							
C	T	S	L	C	H	I	C	K	A	S	I	C							
J	E	L	L	Y	B	E	A	N	L	A	S	F							
R	E	W	O	L	F	B	F	N	R	L	U	A							
R	S	T	F	E	A	M	T	E	R	R	N	J							
U	A	E	P	P	B	A	S	K	E	T	D	U							
T	R	N	B	B	L	L	S	B	P	F	A	O							
B	U	N	N	Y	U	S	A	L	E	P	Y	Z							
P	U	O	G	S	A	A	R	S	E	B	O	P							
	T	B	N	A	R	P	K	A	P	L	B								
	B	S	E	E	K	E	G	G	S	S	L								
		A	T	Y	U	E	T	K	R										
			Y	D	N	A	C	U											
				T	B	S	M												



BUNNY
EGGS
CHICK
JELLYBEAN

BASKET
SPRING
FLOWER
EASTER

GRASS
CANDY
HUNT
DYE







BONNET
SUNDAY
PEEPS
LAMB




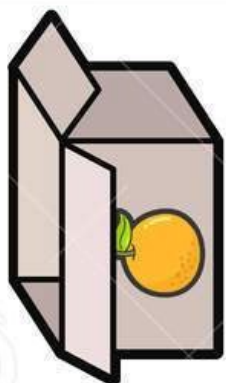


Counting by 10's

Name: _____

Fill in the missing numbers.





Name _____

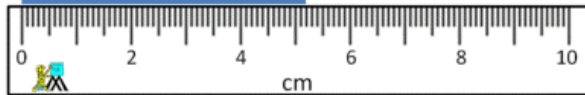
Date _____



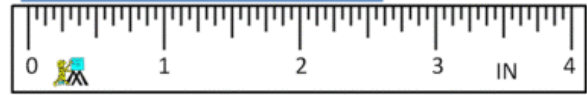
READING SCALES 5F

Use your knowledge of fraction and the number system to work out these measurements. The measurements are in both standard and metric form.


1) How long? _____



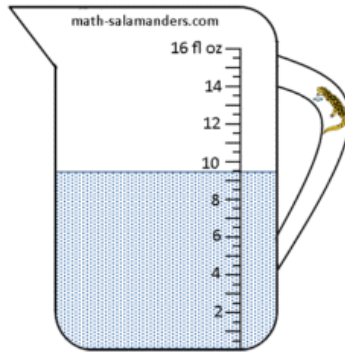
2) How long? _____



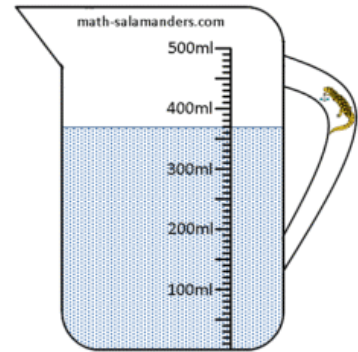
3) How much? _____



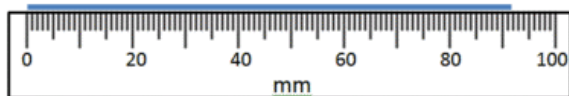
4) How much? _____



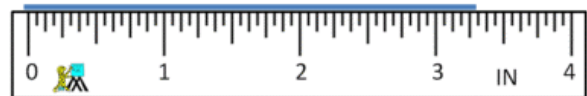
5) How much? _____



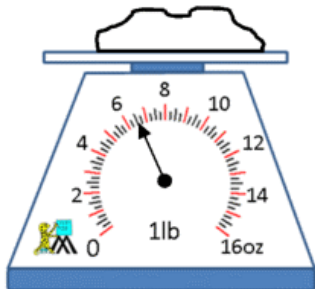
6) How long? _____



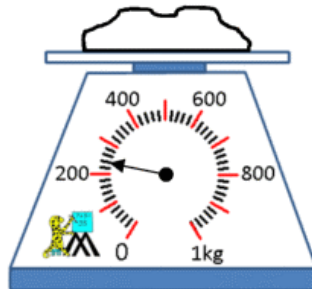
7) How long? _____



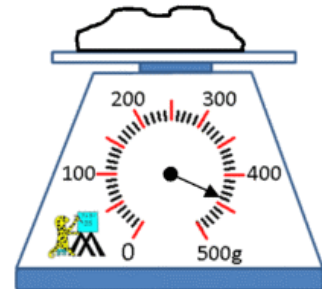
8) How heavy? _____



9) How heavy? _____




10) How heavy? _____



READING COMPREHENSION -3-

Becky was visiting Aunt Agatha at her house at the beach. It was a beautiful summer day. Becky had built a giant sand castle that morning. Aunt Agatha took pictures of the castle to send to Becky's parents. It was a great big sand castle. Later that morning, Becky and Aunt Agatha went swimming in the ocean. It was fun to jump with the waves. Then, they went in the house and ate sandwiches and strawberries for lunch.

Becky wanted to play on the beach that afternoon. Aunt Agatha told her it was too hot to go outside without a hat on. Becky didn't have a hat. Aunt Agatha told her not to worry, she could wear one of hers. Becky tried on four hats. The pink one was really pretty, but it had a big bow in the back that was too long for Becky. The green hat was too fancy for Becky. She did not like that hat at all. The blue hat was nice, but it had an ugly bird on it. Then, Becky saw a big brown hat with a yellow ribbon on it. That hat was made of straw. It was a perfect hat for the beach. It was too big for Becky's head but she didn't care. It was a great hat.



Answer the following questions

1. Where was Becky?

- a. at the store
- b. at the beach
- c. at school
- d. at home

2. Who was Becky visiting?

- a. her Grandparents
- b. her friends
- c. her sister
- d. her Aunt Agatha

3. Why didn't Becky like the blue hat?

- a. it was too fancy
- b. it was new
- c. it had an ugly bird on it
- d. it was old

4. Why didn't Becky want to wear the pink hat?

- a. the bow was too long
- b. it had a flower
- c. it had a bird on it
- d. it was dirty

5. Why did Aunt Agatha want Becky to wear a hat?

- a. it was raining
- b. it was too hot
- c. it was cold
- d. it was snowing

6. Why did Becky like the brown hat?

- a. it was ugly
- b. it was perfect
- c. it was too big
- d. it was cold

Name _____

Date _____



3-DIGIT SUBTRACTION SHEET 2

Try these subtraction problems with regrouping from hundreds to tens only.

$$\begin{array}{r} 1) \quad 327 \\ - 153 \\ \hline \end{array}$$

$$\begin{array}{r} 2) \quad 416 \\ - 264 \\ \hline \end{array}$$

$$\begin{array}{r} 3) \quad 217 \\ - 33 \\ \hline \end{array}$$

$$\begin{array}{r} 4) \quad 635 \\ - 212 \\ \hline \end{array}$$

$$\begin{array}{r} 5) \quad 758 \\ - 194 \\ \hline \end{array}$$

$$\begin{array}{r} 6) \quad 535 \\ - 261 \\ \hline \end{array}$$

$$\begin{array}{r} 7) \quad 653 \\ - 282 \\ \hline \end{array}$$

$$\begin{array}{r} 8) \quad 477 \\ - 357 \\ \hline \end{array}$$

$$\begin{array}{r} 9) \quad 408 \\ - 151 \\ \hline \end{array}$$

$$\begin{array}{r} 10) \quad 936 \\ - 275 \\ \hline \end{array}$$

$$\begin{array}{r} 11) \quad 759 \\ - 186 \\ \hline \end{array}$$

$$\begin{array}{r} 12) \quad 618 \\ - 573 \\ \hline \end{array}$$

$$\begin{array}{r} 13) \quad 854 \\ - 671 \\ \hline \end{array}$$

$$\begin{array}{r} 14) \quad 516 \\ - 72 \\ \hline \end{array}$$

$$\begin{array}{r} 15) \quad 776 \\ - 355 \\ \hline \end{array}$$

$$\begin{array}{r} 16) \quad 908 \\ - 163 \\ \hline \end{array}$$

$$\begin{array}{r} 17) \quad 447 \\ - 86 \\ \hline \end{array}$$

$$\begin{array}{r} 18) \quad 649 \\ - 297 \\ \hline \end{array}$$

$$\begin{array}{r} 19) \quad 504 \\ - 271 \\ \hline \end{array}$$

$$\begin{array}{r} 20) \quad 868 \\ - 592 \\ \hline \end{array}$$

Remember to subtract the ones first, then the tens and finally the hundreds.



Name _____

Date _____



TELLING THE TIME O'CLOCK, HALF AND QUARTER

SHEET 5A

For each time, you need to either draw in the hands or write the time.

Half past 1		Quarter past 7	
	Half past 12		Quarter to 3
Half past 9		Quarter to 2	
	Half past 3		Quarter to 10



2ND GRADE

MATH-SALAMANDERS.COM



Unscramble The US States

Q. Rearrange the letters to form a meaningful US state name.

1. amablaaa _____
2. aakasl _____
3. izanroa _____
4. ksaasnar _____
5. caroinifla _____
6. rdcoaloo _____
7. nutoticecnc _____
8. wredlaae _____
9. aoldfir _____
10. igrgaeo _____
11. wihiaa _____
12. aidoh _____
13. llisinio _____
14. dnnaiai _____
15. awoi _____
16. kasnas _____
17. uktnecky _____
18. inoasailu _____
19. ieman _____
20. larmydan _____

Name: _____

B-4

Basic Addition
& Subtraction

**Single-
Step**


Daily Word Problem

There are 15 birds in an apple tree.

A squirrel chases 8 away.

How many birds are left in the tree?

Show your work.



answer: _____

Name: _____

B-5


Repeated Addition;
Basic Multiplication

**Multi-
Step**

Daily Word Problem

There are 4 vases with flowers.
Each vase has 3 red flowers and 2 yellow flowers.
How many flowers are there in all?

Show your work.



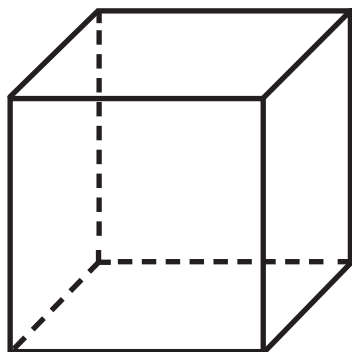
answer: _____

Name: _____



Math Buzz

Write how many for each.



faces	edges	vertices

Complete the table.

In	Out
92	
70	79
46	

Rule: Add 9

Grant has 1 one dollar bill, 1 dime, and 5 nickels.
How much money does Grant have in all?

answer: _____



Write each number in standard form.

one hundred fifty-two _____

seventy _____

four hundred thirteen _____

Subtract.

$$\begin{array}{r} 86 \\ - 43 \\ \hline \end{array}$$

$$\begin{array}{r} 99 \\ - 8 \\ \hline \end{array}$$

$$\begin{array}{r} 60 \\ - 24 \\ \hline \end{array}$$

Name: _____



Math Buzz

The temperature was 31°F at night, but during the day it was 19° warmer. What temperature was it during the day?

answer: _____ $^{\circ}\text{F}$

Solve.

Find the difference between 89 and 50. _____

Subtract 32 from 65. _____

Take 4 away from 47. _____



Solve each problem.
Circle the sum that is **even**.

$$6 + 13 = \underline{\hspace{2cm}}$$

$$11 + 9 = \underline{\hspace{2cm}}$$

Write how many.

Circle the object that weighs **more**.



Number of rows: _____

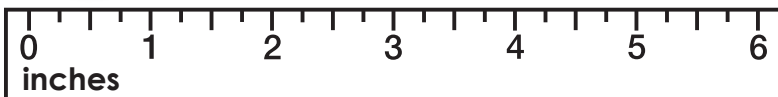
Number of columns: _____

Total: _____ **squares**

Name: _____



Math Buzz



How long is the one dollar bill?

How long is the one dollar coin?

How much shorter is the one dollar coin than the one dollar bill?

Fill in the missing numbers.

$$15 + \boxed{} = 19$$

$$16 = \boxed{} + 8$$

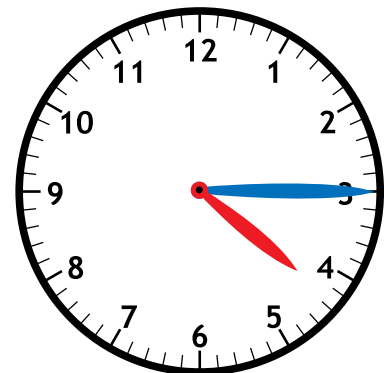
Order the numbers from least to greatest.

36 33 38

Add.

	Hundreds	Tens	Ones
	1	8	2
+		2	5

Qumir started his homework at quarter after 4. What time did he start his homework?



_____ minutes after _____



Happy Easter



