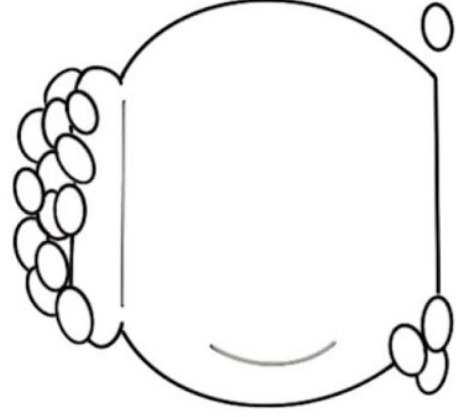
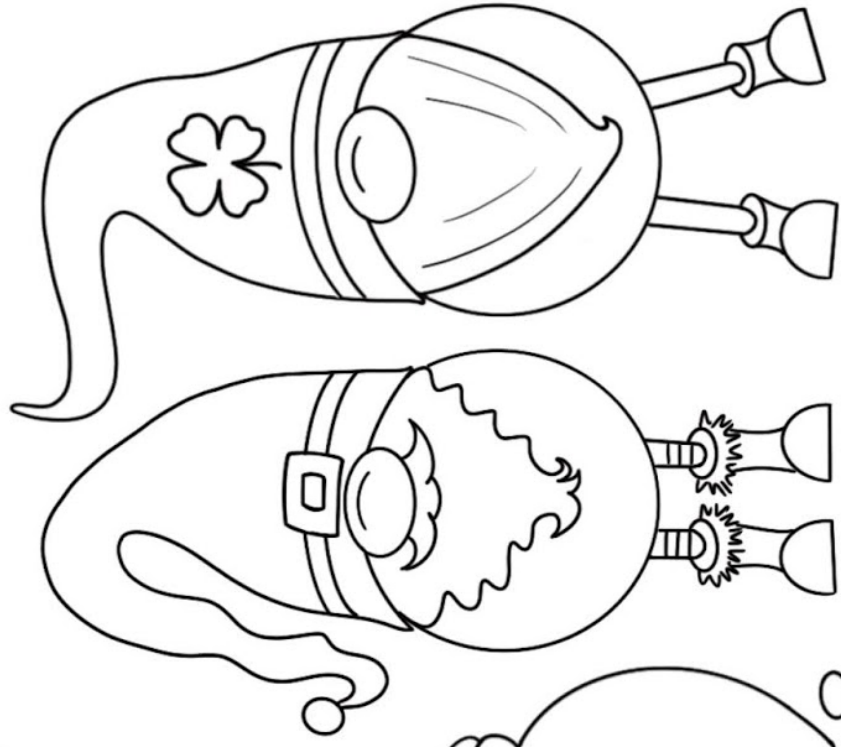
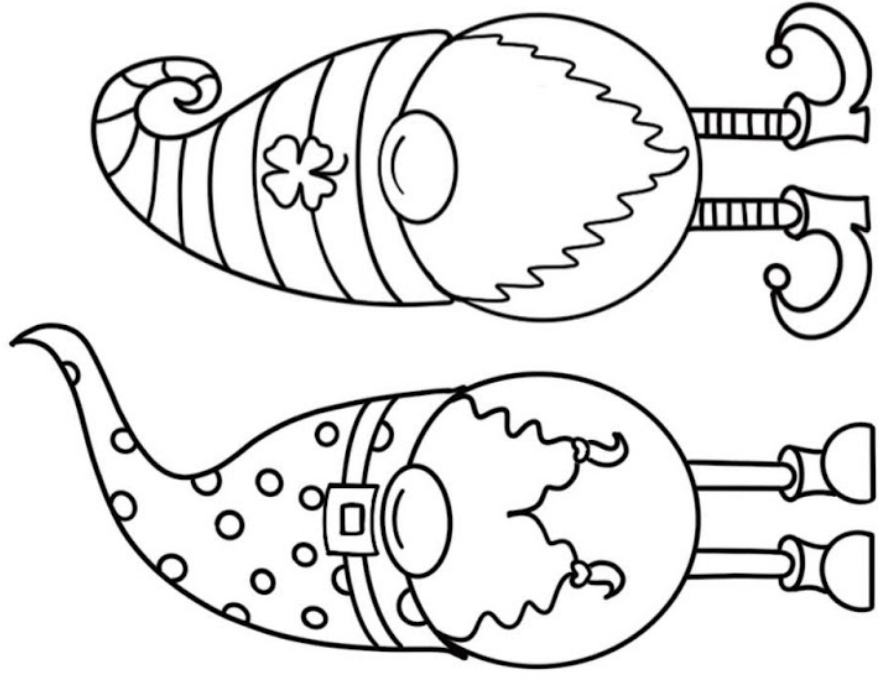


Happy St. PATRICK'S Day


































Name _____

Date _____



WHO HAS MOST? TO \$2 SHEET 1

Use the correct symbol: $>$, $<$ or $=$ to show whether Newton or Quadra has the most money.

Newton 	Symbol	Quadra 
 	$>$	 
  		
 		 
  		 
   		
   		  



2ND GRADE

MATH-SALAMANDERS.COM

Name _____


Date _____

What time is it?




Draw the Time to the Half Hour #1 - 9 Round Clocks


Draw the times on the clock faces.




5:30




2:30




12:30




8:30




3:30




7:30



11:30



9:30



6:30

Fact and Opinion

Read each sentence and decide if it is a fact or an opinion. If it is a **FACT**, circle F. If it is an **OPINION**, circle O.

- | | | | |
|---|---|-----|--------------------------------|
| F | O | 1. | The sky is blue. |
| F | O | 2. | My neighbor is friendly. |
| F | O | 3. | Pizza is the best food. |
| F | O | 4. | That bird is beautiful. |
| F | O | 5. | My mom makes the best pie. |
| F | O | 6. | I drank milk with my sandwich. |
| F | O | 7. | The balloon is red and blue. |
| F | O | 8. | Swimming is the best exercise. |
| F | O | 9. | The car has a flat tire. |
| F | O | 10. | It is raining outside today. |



Name _____

Date _____



MONEY MATCH TO \$1 SHEET 1

Draw a line to match the coins to the correct total of money.

	51¢
	26¢
	35¢
	21¢
	31¢
	42¢
	55¢
	37¢
	40¢



2ND GRADE

MATH-SALAMANDERS.COM

Name: _____

Date: _____

Grade 3 Reading Comprehension Worksheet

THE RED-HEADED WOODPECKER

Read the story below.

Phyllis sat in her own room. The window was open and into the room darted a bird. In a moment he flew to the ledge above her door. With his strong little bill he began to rap, rap at the wood. "You act like a woodpecker, but you do not look like one," said Phyllis. "You do not know all about woodpeckers," said the bird. "I belong to the family of red-headed woodpeckers." "You?" cried Phyllis. "But where is your red cap?" "I am a woodpecker, surely. But I am quite young yet. My mother said, 'Wait a little longer, when you are quite grown your cap will be as red as my own.'" "Well," said Phyllis, "I am very glad you came to see me." "Do you stay here in the winter, then?" Phyllis asked. "Oh, yes, we often stay all winter." "Must you go?" asked Phyllis. "Here is a strawberry for you." "Thanks," said the bird, pecking away at the fruit.



Answer each question.

1. What did the bird do into the Phyllis's room?

2. What did Phyllis say to the bird?

3. What did woodpecker reply?

4. Why did Phyllis happy?

5. What did Phyllis give to the woodpecker?

6. Do you like birds? Tell the name of your favourite bird?

Name _____

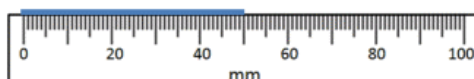
Date _____



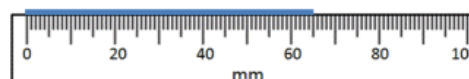
READING SCALES 3C

Use your knowledge of the number system to read these scales which are going up ones, fives and tens. Remember to include the units of measurement.

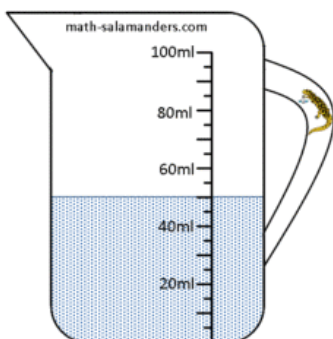
1) How long? _____



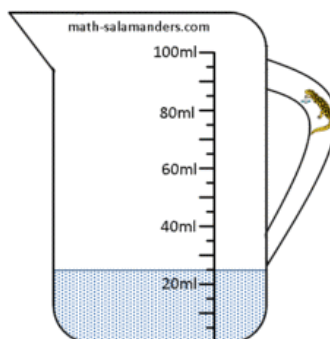
2) How long? _____



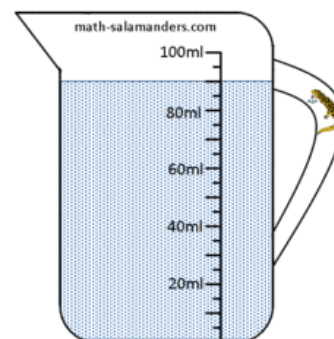
3) How much? _____



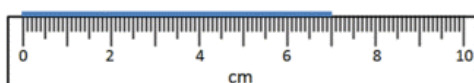
4) How much? _____



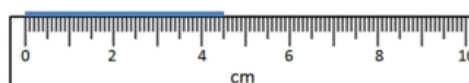
5) How much? _____



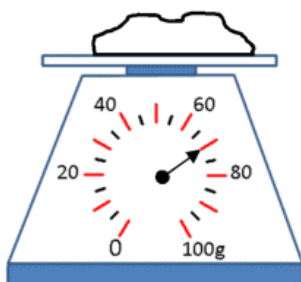
6) How long? _____ cm



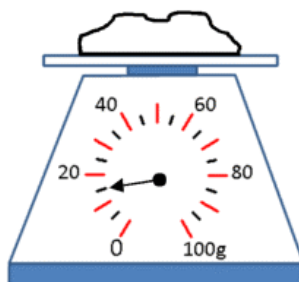
7) How long? _____ cm



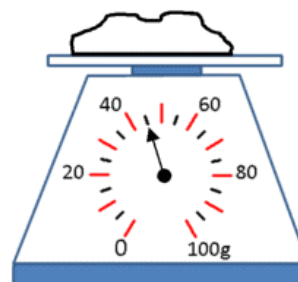
8) How heavy? _____



9) How heavy? _____




10) How heavy? _____



Free Math Sheets, Math Games and Math Help

MATH-SALAMANDERS.COM

Spring Flowers Word Search



Y F C O H O K A G H Y L E C H
 E E L J I C J W Y X Q P S A B
 R H O I I S Z D L J W V O R D
 S S V G L O R J N F U L R N R
 C H R Y S A N T H E M U M A E
 P C G L N N C Y N N D U N T D
 O W J G I L A O L A S I R I N
 P F E A M D M P I I S V A O E
 P A Y E G E O S D S L I Y N V
 Y Q V M N E Y F O R C H I D A
 Z Q R A Y W V X F B A H R M L
 R E W O L F N U S A L G X I U
 T Q R M W C A Q F T D G O O U
 C I M W Y X N O K C I A P N V
 J Q A A U N W I T H U A L D X

Anemone

Carnation

Chrysanthemum

Daffodil

Daisy

Hydrangea

Iris

Lavender

Lilac

Lily

Orchid

Poppy

Rose

Snapdragon

Sunflower

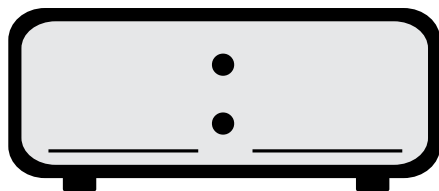
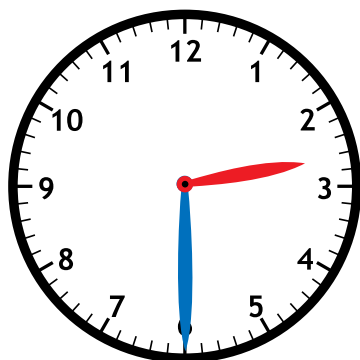


Name: _____



Math Buzz

Fill in the time on the digital clock to show the same time on the analog clock.



Maya and Jaxon were playing a trivia game together. Jaxon scored 73 points and Maya scored 64 points. What was their combined score?

Show your work

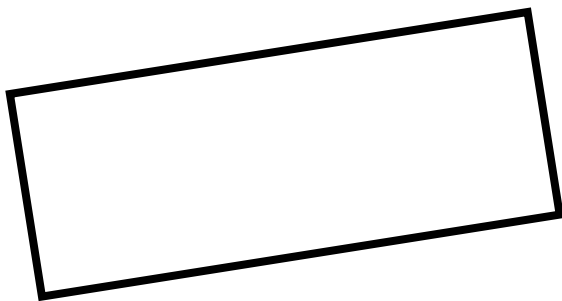
Jaxon: **73 points**

Maya: **64 points**



answer:

_____ points



How many sides does the rectangle have?

answer: _____

How many angles does the rectangle have?

answer: _____

Write the numbers in expanded form.

78 _____

157 _____

293 _____


Subtract.

933 - 678 = _____
























849
- 750

321
- 125

Name: _____



Math Buzz

Class Pets									
Dogs									
Cats									
Fish									
Hamsters									

Each  = 1 pet

How many more students have dogs than hamsters? _____


How many fewer students have fish than cats? _____

Write the numbers in standard form.

seven hundred sixteen

nine hundred forty-one

About how long is a pencil?



8 inches

8 feet

80 inches

Add.

$$\begin{array}{r} 246 \\ + 381 \\ \hline \end{array}$$

$$248 + 409 = \underline{\hspace{2cm}}$$

$$701 + 882 = \underline{\hspace{2cm}}$$

There are 95 pages in the chapter book Alina is reading. She read 26 pages so far. How many pages does she have left to read?

Show your work

answer: _____ pages

Name: _____





Math Buzz

Write the numbers in standard form.

$$80 + 9 \underline{\hspace{2cm}}$$

$$400 + 20 + 9 \underline{\hspace{2cm}}$$

Draw straight lines to divide each shape into 4 equal parts




Malik has 1 quarter, 3 dimes, 1 nickel and 2 pennies. How much money does Malik have?

Show your work

answer: _____ ¢

How many cookies are there in all?




answer: _____ cookies



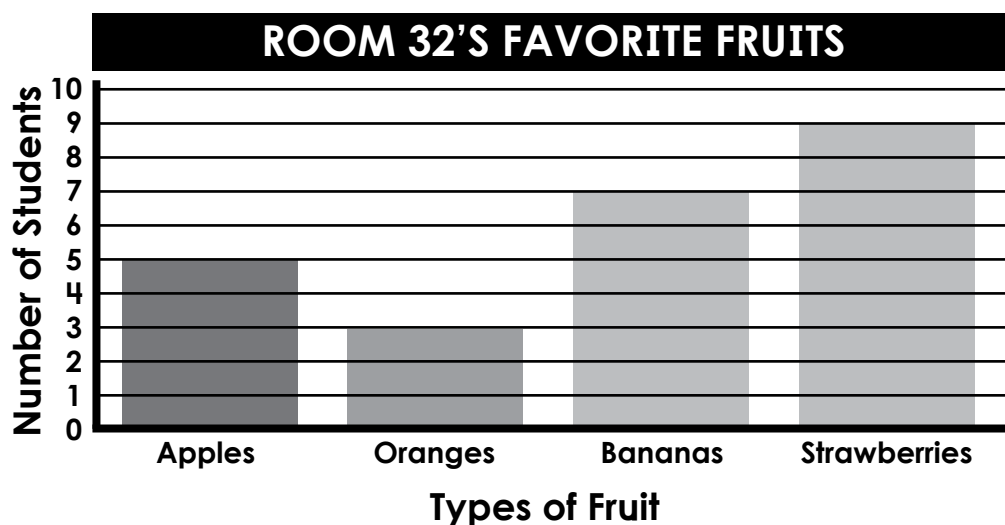
How much money is shown?

answer: _____

Name: _____




Math Buzz



How many more students chose strawberries over oranges?

How many fewer students chose apples over bananas?

Color the even numbers red.
Color the odd numbers blue.




745

Add 10

Add 100

About how long is an eraser?



6 millimeters

6 centimeters


60 centimeters

Leila had 75¢. She gave her brother one dime and one nickel. How much money does she have left?

Show your work

answer: _____ ¢

Name: _____



Math Buzz

Compare each set of numbers
using $>$, $<$, $=$.

34 _____ 28

456 _____ 645

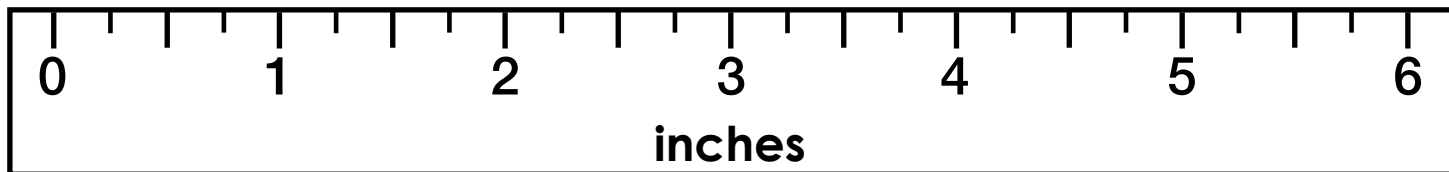
793 _____ 643

678

Subtract 10

Subtract 100

How long is the crayon?

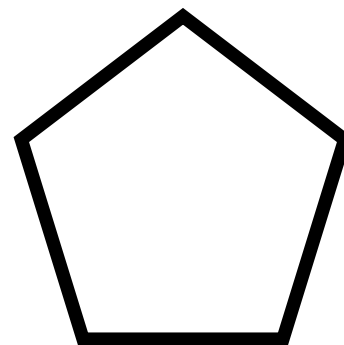


The crayon is _____ inches long.

Donovan is making costumes for the school play. He sewed together two pieces of fabric that were each 16 inches long to make a belt. What is the total length of the belt?

Show your work

answer: _____ inches




How many sides? _____

How many angles? _____

ST. PATRICK'S DAY MAZE

Find your way through the maze to reach the shamrock in the center.

Happy St. Patrick's Day!



START
HERE

NEVER

Forget

Who You

ARE

