








The BBQ

Look at the pictures from Katy's barbecue. Count and record the numbers of each kind of food in the tally chart on the next page.


Then answer the questions below.



The BBQ Tally Sheet




Type of Food	Tally	Total
Lemonade	//	2
Hot dogs		
Apples		
Watermelon		
Popsicles		
Grand Total:		



What food is the most common?

What food is the least common?



How many more popsicles than apples are there?



Time Flies!



Answer the questions about time.

Patricia and Barton ate brunch from 11:00 a.m. to 12:30 p.m. How long were they eating brunch?




Jack went to the lake to go fishing at 9:45 a.m. and left the lake at 11:30 a.m. How long was he fishing?

Rich went for a 1 hour hike with his brother. They started at 1:15 p.m. What time did they finish their hike?



Seiler started his homework at 4:30 p.m. and finished at 5:15 p.m. How long did he work on his homework?

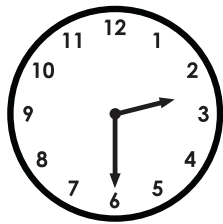

May put her pie in the oven at 6:30 p.m. The pie baked for 2 hours and 30 minutes. What time did she take the pie out?



A Matter of Time



Answer the questions about time.

Janey went to the library at 3:45 p.m. and left at 7:45 p.m. How long was she at the library?




Nikki went to a concert that started at 2:30 p.m. It ended at 4:00 p.m. How long was the concert?

Joji went to the park at 10:45 a.m. and left at 12:00 p.m. How long was he at the park?



Mike went to see a movie at the theater that was 1 hour and 45 minutes long. It started 6:00 p.m. What time did it end?

It started snowing outside at 5:30 p.m. It stopped snowing at 6:45 p.m. How long did it snow?



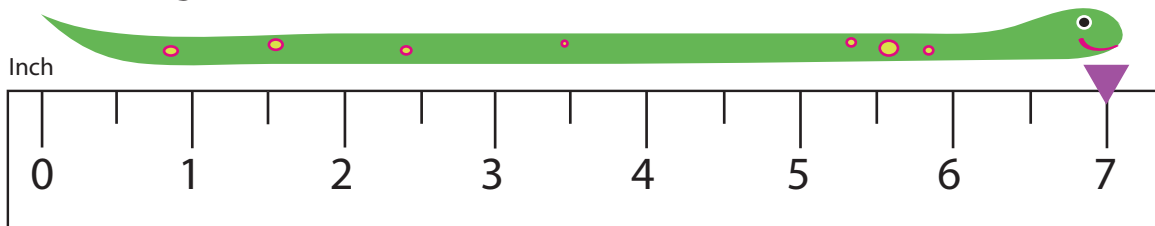
3rd
Grade

Length

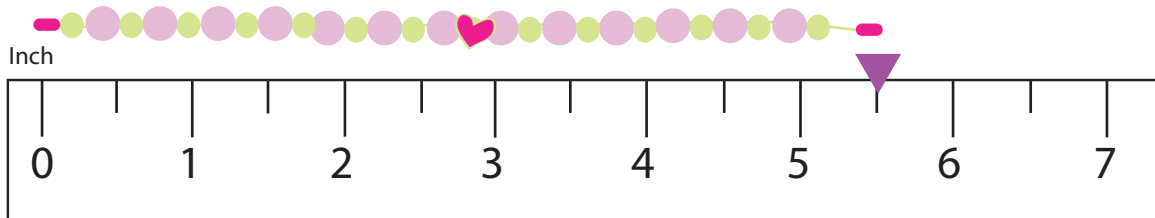
Practice Reading Measurement

Write the correct length in the box.

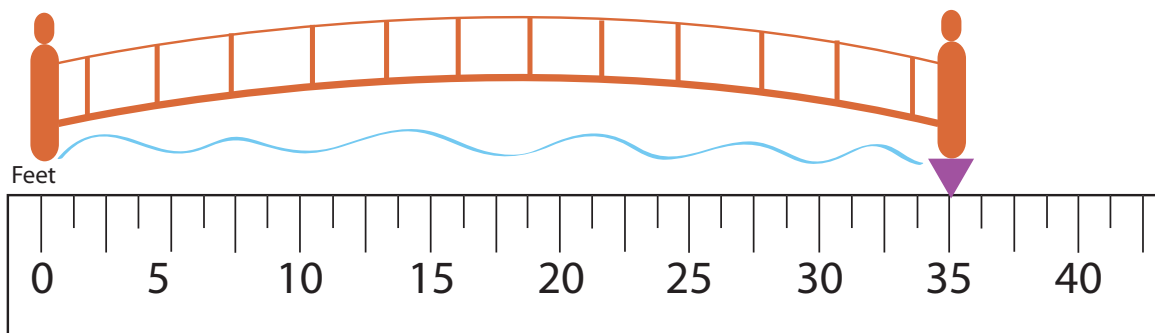
How long is the snake?



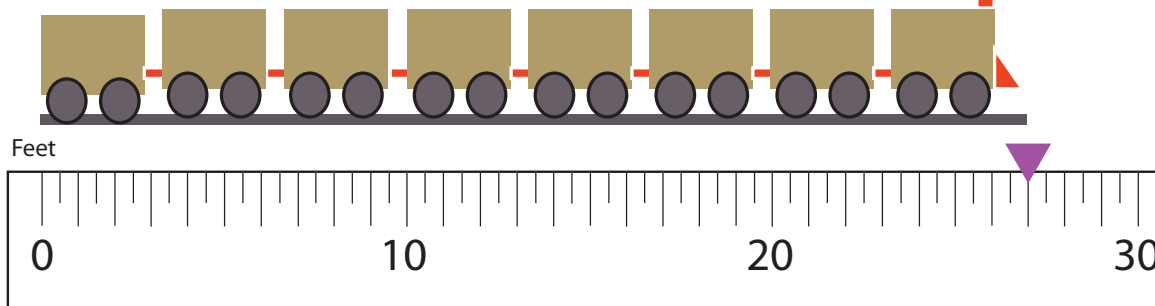
How long is the necklace?

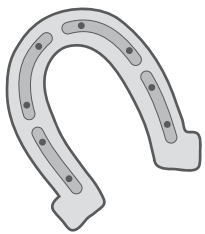


How long is the bridge?




How long is the train?

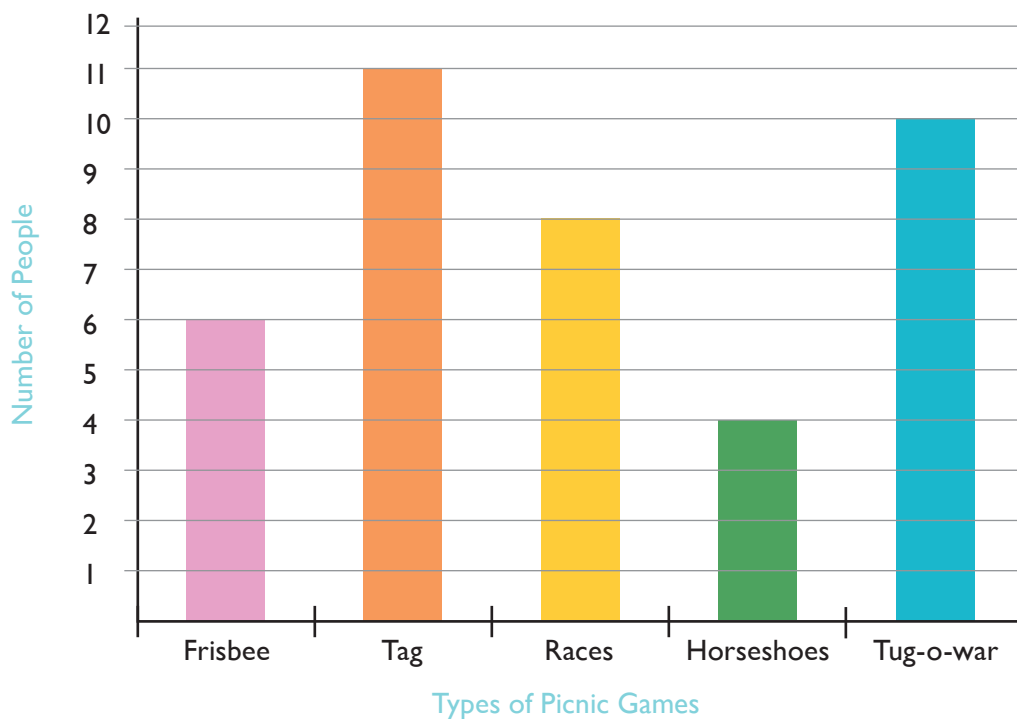





Picnic Bar Graph



Read the bar graph to learn which picnic games were the most popular. Then answer the questions below. Show your work when possible.



1. How many people love races?
2. How many more people chose tug-o-war than frisbee?
3. Add the number of people who love horseshoes and the number of people who love races. What's the difference between that total and the number of people who love tag?
4. How many more people would it take to make frisbee the most loved picnic activity?
5. List the activities in order from most favorite to least favorite.



Counting Coins

Add the coin values and write the total in the space provided.



\$.		
----	--	---	--	--




\$.		
----	--	---	--	--




\$.		
----	--	---	--	--



\$.		
----	--	---	--	--




A bus ticket fare is \$0.75 for one ride.
What coins could you use?



A parking space costs \$0.50 per hour.
you need to park for 3 hours.
What coins could you use?



A baker sold you two cupcakes for \$4.88.
You gave him a \$5 bill.
What coins could the baker use to give you change?



A pair of sunglasses and a hat cost \$19.35.
You give the cashier a \$20 bill.
What coins could the cashier give you change?

Coffee Shop Math

Look at the menu prices. Then answer the questions below.



Chocolate sundae

50 ¢




Hot chocolate

20 ¢



Carrot cake

15 ¢



Strawberry cake

30 ¢



Milkshake

25 ¢

1. Mary ordered



and



give her?

. She gave you \$1. How much change would you

2. Nancy ordered



give her?

. She gave you \$1. How much change would you

3. Toby ordered



give him?

. He gave you \$1.50 . How much change would you

3. Matt ordered



give him?

. He gave you \$2 . How much change would you

Word Problems: Addition

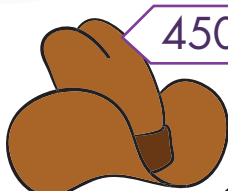
Let's read these problems. Write a number sentence and solve.



509




859



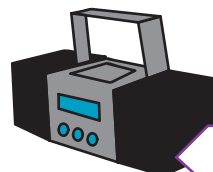
450



276



322



950



632

Lea bought a cap
and a teddy bear.
How many tokens
did Lea spend?

Matt bought 2
cowboy hats.
How many tokens
did Matt spend?

Jill bought a neck-
lace and a doll.
How many tokens
did she spend?

Sean bought a radio
and a teddy bear.
How many tokens
did he spend?

Drew bought 2
radios. How
many tokens did
he spend?

May bought head-
phones and a cap.
How many tokens
did she spend?

Who spent the
most tokens of all
the kids?

Who spent the least
amount of tokens of
all the kids?

Name _____

Date _____

Telling Time to 5-Minute Intervals



Write the time shown on each clock in the space below it.



























Measure and Compare: Inches and Centimeters


Cut out the ruler at the bottom of the page. Then find the following objects in the room and answer the questions below.



1. The width of the pair of scissors is:

_____ centimeters


_____ inches



2. The width of the crayon is:

_____ centimeters

_____ inches



3. The width of the notebook is:

_____ centimeters

_____ inches

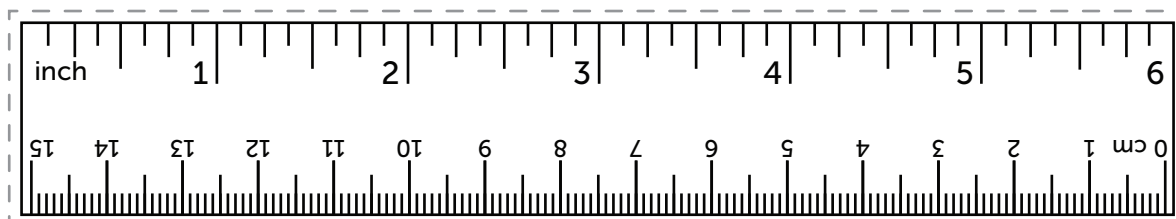


4. The width of the shoe is:

_____ centimeters

_____ inches

Print at 100% to ensure the ruler is accurate:







TOM and JERRY



Circle the nouns below.

The fish swam in the river.




The girl kicked the ball.



The boy cooked noodles.

The cat drank the milk.



The dog barked at the car.

My shirt is red.



Your hat is green



Name: _____ Date: _____

Winter Word Search

D	E	K	M	K	A	A	J	Y	R	A	G
S	N	E	T	T	I	M	S	E	R	I	R
X	G	L	O	V	E	S	I	O	E	Z	O
T	P	Y	O	N	K	O	D	W	T	D	Y
K	H	T	T	W	S	N	H	S	N	L	R
D	D	S	A	Q	Z	P	O	T	I	O	V
D	D	O	O	T	G	E	T	A	W	C	Y
N	M	R	C	L	F	L	C	H	S	Q	S
O	E	F	A	G	H	C	H	O	N	B	N
S	G	Z	H	Z	H	I	O	P	D	J	O
N	L	T	O	S	Z	C	C	P	O	A	W
R	G	E	C	R	N	I	O	O	P	N	L
W	C	J	D	J	F	E	L	L	C	U	I
Z	N	X	Y	C	U	H	A	B	H	A	H
H	I	B	E	R	N	A	T	E	Y	R	P
F	K	B	O	X	I	C	E	G	U	Y	W

WINTER
SNOW
SLED
ICICLE
BLIZZARD
HOT CHOCOLATE

COLD
FROSTY
FROZEN
SLED
JANUARY

ICE
HIBERNATE
COAT
HAT
GLOVES

