


Name _____

Date _____

I AM GRATEFUL



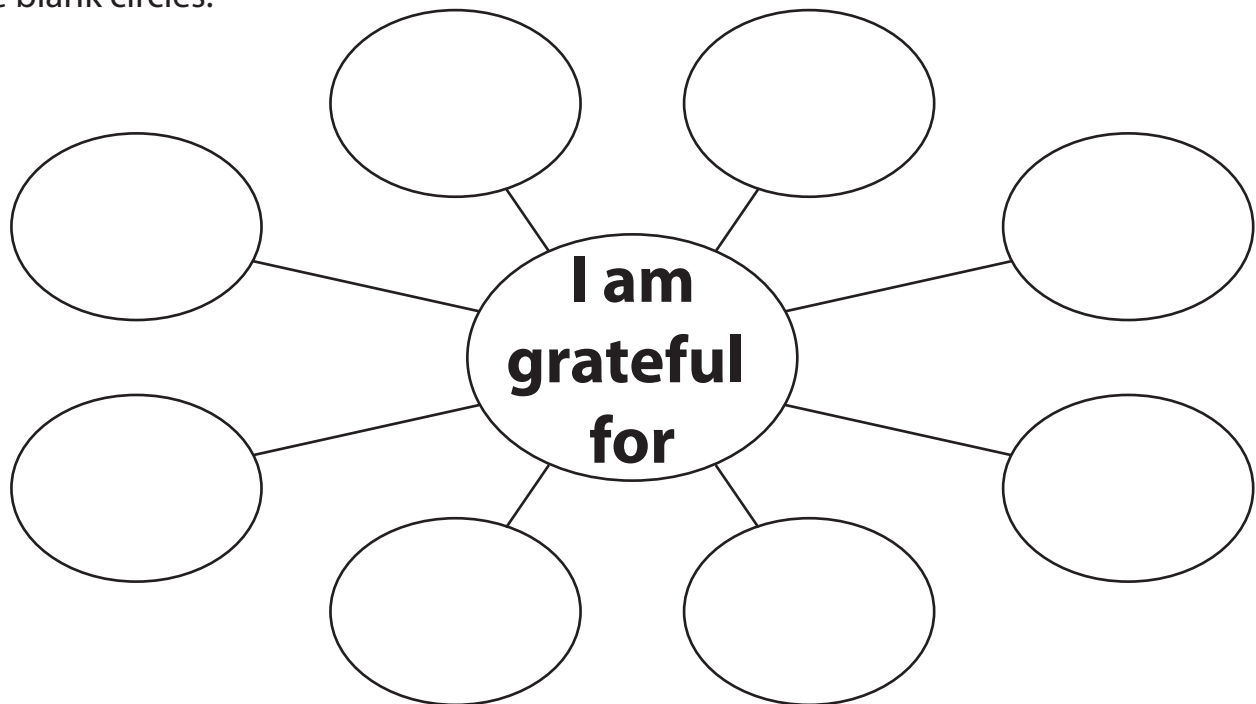
Gratitude helps us reflect on everything we have to be thankful for. Fill in the following prompts about what you are grateful for.

Nouns I'm Grateful for:

Verbs I'm Grateful for:

Gratitude Web

Make a web to connect all that you are grateful for. Fill in things you are grateful for in the blank circles.



Gratitude Buddy

It can be fun to be grateful together. Who can you practice gratitude with?

My gratitude buddy is _____.

Name: _____ Date: _____

Math Worksheet

1 a. $5 \times 6 =$ _____

1 b. $7 \times 7 =$ _____

2 a. $7 \times 9 =$ _____

2 b. $3 \times 9 =$ _____

3 a. $3 \times 3 =$ _____

3 b. $2 \times 9 =$ _____

4 a. $9 \times 4 =$ _____

4 b. $9 \times 9 =$ _____

5 a. $3 \times 5 =$ _____

5 b. $4 \times 7 =$ _____

6 a. $4 \times 9 =$ _____

6 b. $6 \times 8 =$ _____

7 a. $6 \times 5 =$ _____

7 b. $8 \times 2 =$ _____

8 a. $10 \times 3 =$ _____

8 b. $8 \times 7 =$ _____

9 a. $6 \times 10 =$ _____

9 b. $7 \times 8 =$ _____

10 a. $9 \times 3 =$ _____

10 b. $5 \times 8 =$ _____


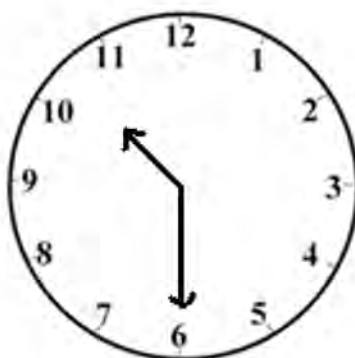
Student Name: _____

Score: _____

Write Time




1:30



Name _____

Comparing Numbers

Compare each set of numbers. Use $<$, $>$, or $=$.



425 ○ 421	889 ○ 989	346 ○ 364
868 ○ 887	453 ○ 543	624 ○ 624
501 ○ 512	765 ○ 675	969 ○ 965
987 ○ 979	282 ○ 282	848 ○ 668

Fill in the blanks that would make the statement true.

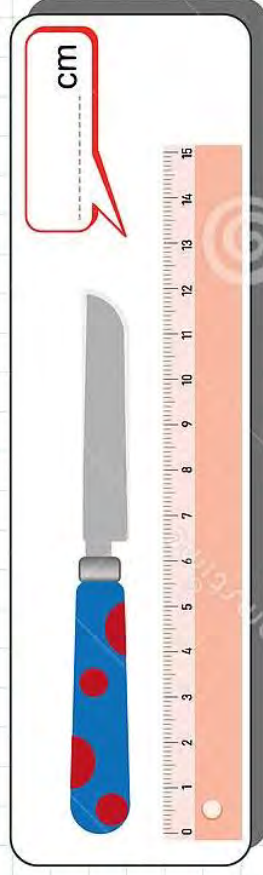
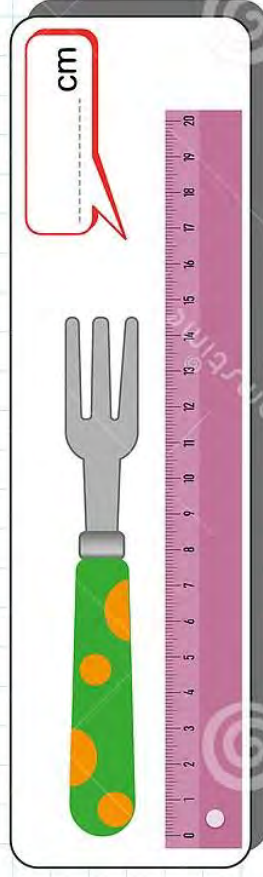
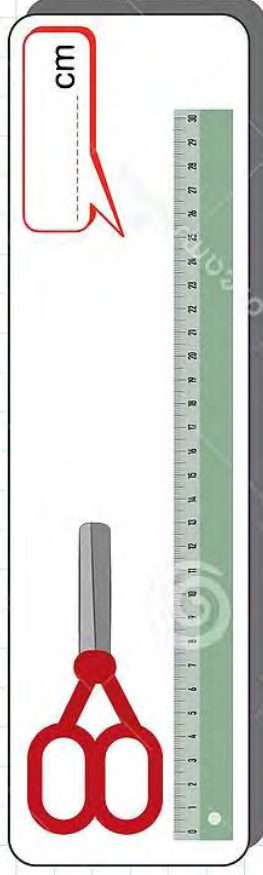


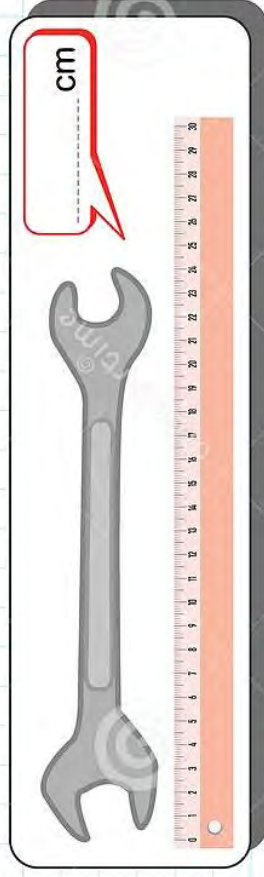
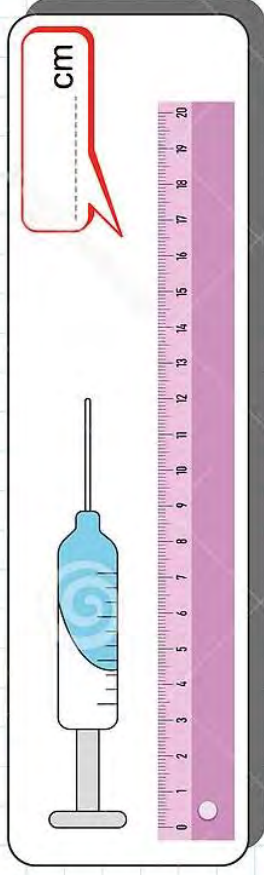

_____ $<$ 387	299 $<$ _____
845 $<$ _____	_____ $<$ 733
_____ $>$ 432	549 $<$ _____
312 $<$ _____	_____ $<$ 602



Compare each set of numbers. Use $<$, $>$, or $=$.

$600 + 50 + 9$ ○ $600 + 40 + 5$
$700 + 40 + 4$ ○ $700 + 20 + 4$
$300 + 90 + 7$ ○ $300 + 90 + 2$
$800 + 90 + 8$ ○ $800 + 20 + 9$

Measuring Objects



Name: _____

Date: _____

Learning Fact or Opinion Worksheet

A fact is a true statement and something that has really happened and is the case.


An opinion is a view or judgment formed on something, not necessarily based on fact or knowledge.

Directions: Read each sentence and tell whether it is a fact or opinion.

Example: I think hot dogs are better than hamburgers.

Answer: Opinion

1. _____ Disneyland is better than Magic Mountain.
2. _____ Red is a brighter color than yellow.
3. _____ There are fifty states in the U.S.A..
4. _____ Sacramento is the capitol of California.
5. _____ I think hamburgers are very healthy for you.
6. _____ There are seven days in a week.
7. _____ I think that the mall is a boring place to be.
8. _____ Two plus two equals four.
9. _____ The number seven is luckier than three.
10. _____ There are twelve months in a year.
11. _____ Pens are easier to write with than pencils.
12. _____ UCLA is a better football team than USC.



1



2



3



4



5




6

How Many Coins Do You Need?

How many of each coin do you need to make up the correct price?

Hint: there is more than one answer for each problem!




\$1.34












\$0.92











\$0.46











\$0.27









How Much Money Do You Need?

How many of each coin or bill do you need to make up the correct price?

Hint: there is more than one answer for each problem!



\$3.68













\$8.21













\$5.92














\$9.31







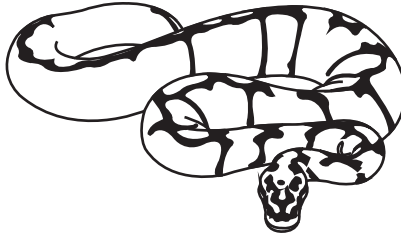




Snakes

Wordsearch

- ANACONDA
- COTTONMOUTH
- BUSHMASTER
- COPPERHEAD
- PYTHON



- SIDEWINDER
- KEELBACK
- ADDER
- CASCABEL
- BOOMSLANG




H	E	C	J	R	O	X	N	P	A	B	W
S	I	Y	A	M	T	Z	Q	G	D	U	C
I	C	L	K	S	A	V	W	E	F	S	O
D	O	B	N	I	C	D	J	E	Y	H	T
E	P	H	Q	U	M	A	D	K	P	M	T
W	P	Y	T	H	O	N	V	E	X	A	O
I	E	D	G	F	B	U	K	E	R	S	N
N	R	Z	S	V	J	C	O	L	L	T	M
D	H	P	L	E	X	Q	R	B	D	E	O
E	A	N	A	C	O	N	D	A	P	R	U
R	E	T	B	M	Y	F	V	C	J	L	T
E	D	K	U	G	Z	T	I	K	M	E	H
B	O	O	M	S	L	A	N	G	U	P	V



Scavenger Hunt

Find a Noun

Pick a room inside or go outside. Write the nouns you find under the correct column.

 Person	 Place	 Thing

Name: _____

Date: _____



How Much Time?

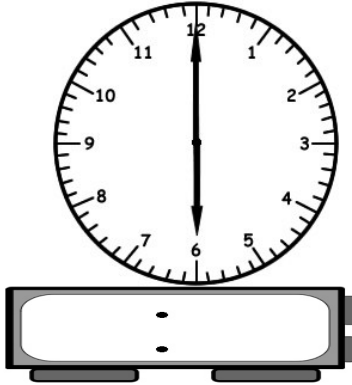
Hours Worksheet 2




Write the time inside each clock below. Tell how much time has passed.

1)

Bill started work at...



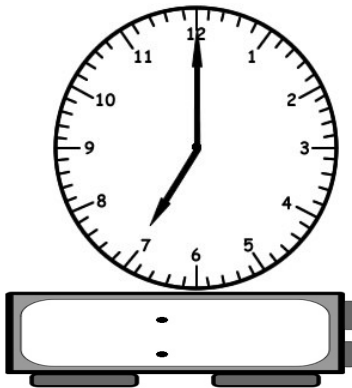
Bill got out of work at...



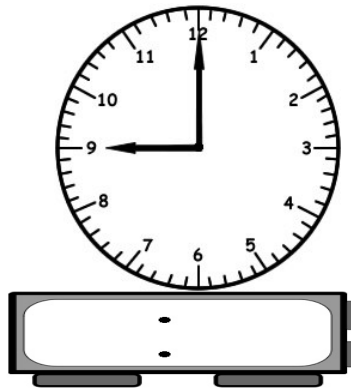
How much time has passed?

2)

Thad went to dinner at...



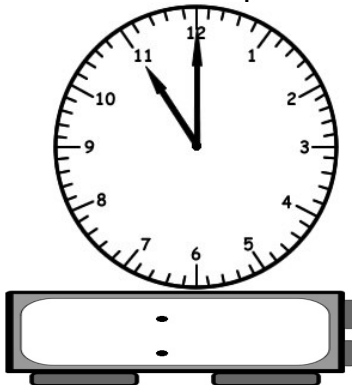
Thad went home at...



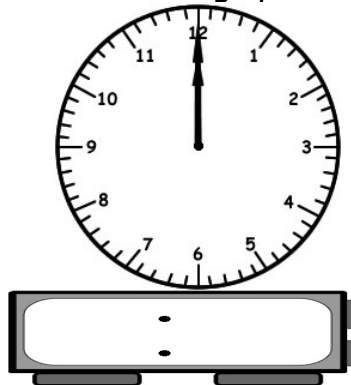
How much time has passed?

3)

Justin used the phone at...





















Justin hung up at...



How much time has passed?

5. Cross out the coins you need to buy the item. Write how many cents you have left.

<p>a. </p> <p>39¢</p>  <p>Left _____ ¢</p>	<p>b. </p> <p>88¢</p>  <p>Left _____ ¢</p>	<p>c. </p> <p>54¢</p>  <p>Left _____ ¢</p>
<p>d. </p> <p>61¢</p>  <p>Left _____ ¢</p>	<p>e. </p> <p>97¢</p>  <p>Left _____ ¢</p>	<p>f. </p> <p>81¢</p>  <p>Left _____ ¢</p>
<p>g. </p> <p>73¢</p>  <p>Left _____ ¢</p>	<p>h. </p> <p>45¢</p>  <p>Left _____ ¢</p>	<p>i. </p> <p>26¢</p>  <p>Left _____ ¢</p>

