

Creative Writing

What if one day you found a secret door in your house? Write a paragraph telling us where it leads to. Describe things you saw. Would you tell anyone?





Numbers in Spanish

A quick guide to the numbers (and how to pronounce them).

1

uno
OOH-no

2

dos
DOH-S

3

tres
TRE-s

4

cuatro
CU-AH-tro

5

cinco
SEEN-ko

6

seis
SAY-s

7

siete
SEE-EH-teh

8

ocho
OH-cho

9

nueve
NOO-eh-veh

10

diez
dee-ES

11

once
OHN-se

12

doce
DOH-se

13

trece
TRE-se

14

catorce
ka-TOR-se

15

quince
KEEN-se

16

dieciseis
dee-es-EEE-say-s

17

diecisiete
dee-es-EEE-SEE-EH-teh

18

dieciocho
dee-es-EEE-OH-cho

19

diecinueve
dee-es-EEE-NOO-eh-veh

20

veinte
BAIN-teh

30

treinta
TRE-EEN-tah

40

cuarenta
cu-ah-REN-tah

50

cincuenta
seen-CU-EN-tah

60

sesenta
se-SEN-tah

70

setenta
se-TEN-tah

80

ochenta
oh-CHEN-tah

90

noventa
no-VEN-tah

100

cien
SEE-en

Nouns

Grade 1 Nouns Worksheet

Circle the noun(s) in each sentence.

Nouns are a person,
a place or a thing.

The cat is purring.


The boy kicked the ball.

Sam plays with his friend Ben.

The bus stops at the red light.

We saw tigers at the zoo.


These flowers are beautiful.




Dad drives us carefully in the car.

Farm Animals

Wordsearch



- CHICKEN
- HORSE
- SHEEP
- DOG
- GOAT
- TURKEY
- LLAMA
- DUCK
- PIG
- BUFFALO



P T A H J W E B C M Q F
I Y P V N X T U R K E Y
G C S I M Z E Y G L J A
E L H T B U F F A L O E
F S O I U P S T X B L H
Y Z R N C A M O P Q L D
O K S L I K V E U T A M
T W E F R J E X N Q M S
C A M U P H B N E D A J
W E H Q S N R G K I N G
G O A T Y E P S T H O M
U Z J M F E B W A D V T
P R O G N J D U C K E L

Name _____



Carnival Food



50¢




45¢




83¢



25¢



98¢



70¢

How many quarters do you need to buy this?



_____ quarters



How many pennies do you need to buy this?



_____ pennies




How many dimes do you need to buy this?



_____ dimes



How many nickels do you need to buy this?



_____ nickels



How many nickels do you need to buy this?



_____ nickels



How many pennies do you need to buy this?



_____ pennies




Name _____

© Annie Moffatt © The Moffatt Girls 2013

Winter Shopping

Directions: Read the questions at the bottom of the page. Circle more or less for each question. Color the pictures.



1.  cost **more** or **less** than 

2.  cost **more** or **less** than 

3.  cost **more** or **less** than 

4.  cost **more** or **less** than 

5.  cost **more** or **less** than 

6.  cost **more** or **less** than 

7.  cost **more** or **less** than 




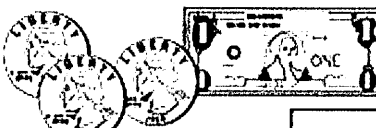



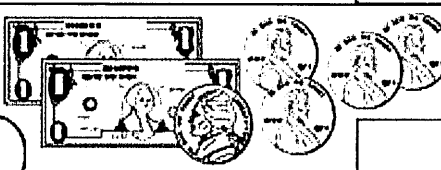












8.  cost **more** or **less** than 



Can You Buy It?

Is there enough money to buy each item?

Draw ☺ for yes. Draw ☹ for no in the box.

<p>①   Cost 45¢ <input type="checkbox"/></p>	<p>⑥   Cost \$1.79 <input type="checkbox"/></p>
<p>②   Cost 60¢ <input type="checkbox"/></p>	<p>⑦   Cost \$2.05 <input type="checkbox"/></p>
<p>③   Cost 85¢ <input type="checkbox"/></p>	<p>⑧   Cost \$3.30 <input type="checkbox"/></p>
<p>④   Cost \$1.29 <input type="checkbox"/></p>	<p>⑨   Cost \$5.75 <input type="checkbox"/></p>
<p>⑤   Cost \$1.45 <input type="checkbox"/></p>	<p>⑩   Cost \$6.50 <input type="checkbox"/></p>



Give your child a certain amount of money, for example, 2 quarters. Then take a walk around your house together. Tell your child that you are going to pick something out and put a price on it (notepad—45¢). Then ask her if she has enough money to “buy” the objects from you. If your child has enough money to make the purchase, ask her if any change is coming back to her. If so, how much? Allow your child to use pencil and paper if necessary. Repeat with other combinations of money.


Name: _____



= 5¢



= 1¢



Winter Shopping

Directions: Count the coins and answer the questions.

boots 9¢ sled 8¢ mittens 3¢ scarf 4¢ hat 5¢ jacket 7¢

© Annie Nofzatt - The Nofzatt Girls 2013

_____ ¢

Can you buy the scarf?

yes
no

_____ ¢

Can you buy the mittens?

yes
no

_____ ¢

Can you buy the sled?

yes
no

_____ ¢

Can you buy the boots?

yes
no

_____ ¢

Can you buy the hat and jacket?

yes
no

Addition

Grade 2 Word Problems Worksheet

Read and answer each question.









The local food bank was receiving donations from the community.

1. During the first week, they received 12 boxes of canned soup and 36 boxes of crackers. During the second week, they received 25 boxes of canned soup and 24 boxes of crackers. How many boxes of crackers did they receive in total?
2. They had 40 boxes of pasta sauce in storage and received 47 more boxes last month. How many boxes of pasta sauce are there?
3. In the storage room, there are 16 boxes of corn flakes. There were 19 more boxes of cheerios than corn flakes. How many boxes of cereal are there?
4. The food bank expected to recruit 60 volunteers. 34 men and 45 women signed up. How many volunteers were recruited?
5. The local food bank opened 18 days in January and 21 days in February. If it will be opened for 15 days in March, how many days is it open in these three months?
6. Write the addition sentence that fits this: "The food bank opens for 4 hours on Friday and 5 hours each on Saturday and Sunday. It opens for 14 hours over those 3 days."



Counting Money

Circle the correct answer.

<p>1.</p>  <p>1¢ 5¢ 10¢</p>	<p>2.</p>  <p>1¢ 5¢ 10¢</p>
<p>3.</p>  <p>1¢ 5¢ 10¢</p>	<p>4.</p>  <p>5¢ 6¢ 7¢</p>
<p>5.</p>  <p>10¢ 15¢ 20¢</p>	<p>6.</p>  <p>60¢ 50¢ 40¢</p>
<p>7.</p>  <p>6¢ 27¢ 28¢</p>	<p>8.</p>  <p>12¢ 17¢ 20¢</p>
<p>9. Jenny has 45¢. The chocolate bar she wants to buy is 85¢. How much more money does Jenny need?</p> <p>30¢ 35¢ 40¢</p>	
<p>10. Christopher has 50¢. Wendy has 45¢. How much money do they have altogether?</p> <p>85¢ 95¢ 99¢</p>	











Name: _____

Date: _____



Match It: Quarter Hour

Circle the correct time shown on each clock.


	2:15 2:45 3:45		12:15 3:15 3:00
	6:30 7:30 7:15		8:45 9:15 8:15
	1:30 6:30 2:30		12:45 11:45 12:00
	3:00 2:15 3:15		6:45 6:15 5:45
	8:15 8:00 9:15		10:45 9:45 9:15




15 Minute Match Up




View the time on the clocks. Draw a line from the digital time to the correct time on the clock.




7:15




2:30




11:45




9:00




1:15




5:30




12:45




4:00



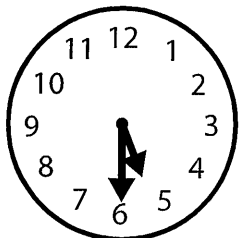
6:15



10:30



3:45



8:00

Bear Sudoku

Help Bart complete the four Sudoku puzzles. Every row, column, and 2x2 block must contain the numbers 1 through 4 once.

Difficulty:

	2		
1		2	
2		3	
	3		

		1	
2			4
4			1
		4	

	2		
3			2
2			1
	3		

	1	3	
			1
			3
	3	4	



Cut and Paste Penguin

Choose a set of eyes to cut and paste on the Penguin. Color afterwards.

