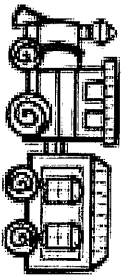

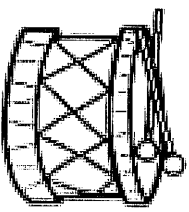





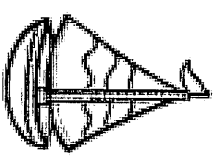

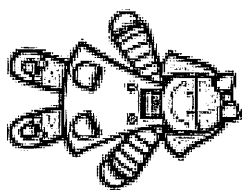



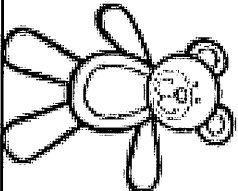
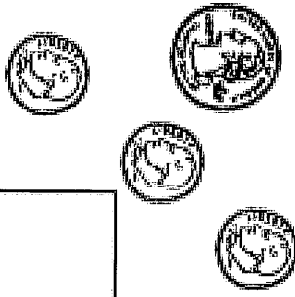
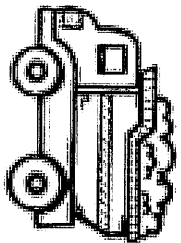



Name: _____

Can You Buy It?


Is there enough money to buy each item? Draw a ☺ for yes. Draw ☹ for no.

 52¢  <input type="checkbox"/>	 90¢  <input type="checkbox"/>	 12¢  <input type="checkbox"/>
 18¢  <input type="checkbox"/>	 73¢  <input type="checkbox"/>	 89¢  <input type="checkbox"/>
 61¢  <input type="checkbox"/>	 47¢  <input type="checkbox"/>	 34¢  <input type="checkbox"/>

Name: _____

Toy Shop

Making Change



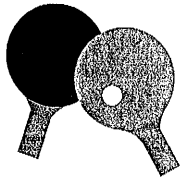
1. You purchase a toy drum. You hand the cashier six dollars. What will your change be? answer: _____
2. You purchase a ball. You hand the cashier a five dollar bill. What will your change be? answer: _____
3. You purchase a robot. You hand the cashier a ten dollar bill. What will your change be? answer: _____
4. You purchase a toy car. You hand the cashier three dollars. What will your change be? answer: _____
5. You purchase a piggy bank. You hand the cashier a five dollar bill. What will your change be? answer: _____

Toy Store

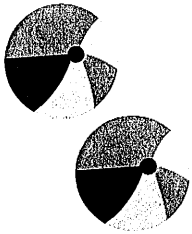
Sally and her friends are at the toy store. Answer each problem about **making change**. Show your work!




Sally has 65 cents. If she buys a teddy bear for 32 cents, how much change will she get back?



Alex has 82 cents. If he buys a ping-pong ball set for 64 cents, how much change will he get back?



Devon has 76 cents. Each beach ball costs 35 cents. If he buys two beach balls, how much change will he get back?



Maria has 98 cents. She wants to buy three rubber ducks. Each rubber duck costs 32 cents. Does she have enough money?

Name: _____


Date: _____

Grade 3 Reading Comprehension Worksheet

THE RED-HEADED WOODPECKER

Read the story below.

Phyllis sat in her own room. The window was open and into the room darted a bird. In a moment he flew to the ledge above her door. With his strong little bill he began to rap, rap at the wood. "You act like a woodpecker, but you do not look like one," said Phyllis. "You do not know all about woodpeckers," said the bird. "I belong to the family of red-headed woodpeckers." "You?" cried Phyllis. "But where is your red cap?" "I am a woodpecker, surely. But I am quite young yet. My mother said, 'Wait a little longer, when you are quite grown your cap will be as red as my own.'" "Well," said Phyllis, "I am very glad you came to see me." "Do you stay here in the winter, then?" Phyllis asked. "Oh, yes, we often stay all winter." "Must you go?" asked Phyllis. "Here is a strawberry for you." "Thanks," said the bird, pecking away at the fruit.



Answer each question.

1. What did the bird do into the Phyllis's room?

2. What did Phyllis say to the bird?

3. What did woodpecker reply?

4. Why did Phyllis happy?

5. What did Phyllis give to the woodpecker?

6. Do you like birds? Tell the name of your favourite bird?

Months of the Year

Unscramble the words

uyjnara	<input type="text"/> <input type="text"/> <input type="text"/> <input type="text"/> <input type="text"/> <input type="text"/> <input type="text"/>
ryfbeura	<input type="text"/> <input type="text"/> <input type="text"/> <input type="text"/> <input type="text"/> <input type="text"/> <input type="text"/> <input type="text"/>
hcmra	<input type="text"/> <input type="text"/> <input type="text"/> <input type="text"/> <input type="text"/>
lapir	<input type="text"/> <input type="text"/> <input type="text"/> <input type="text"/> <input type="text"/>
yam	<input type="text"/> <input type="text"/> <input type="text"/>
enju	<input type="text"/> <input type="text"/> <input type="text"/> <input type="text"/>
yjlu	<input type="text"/> <input type="text"/> <input type="text"/> <input type="text"/>
gtsuua	<input type="text"/> <input type="text"/> <input type="text"/> <input type="text"/> <input type="text"/> <input type="text"/>
tmesperbe	<input type="text"/> <input type="text"/> <input type="text"/> <input type="text"/> <input type="text"/> <input type="text"/> <input type="text"/> <input type="text"/> <input type="text"/>
tcobore	<input type="text"/> <input type="text"/> <input type="text"/> <input type="text"/> <input type="text"/> <input type="text"/> <input type="text"/>
vonmereb	<input type="text"/> <input type="text"/> <input type="text"/> <input type="text"/> <input type="text"/> <input type="text"/> <input type="text"/> <input type="text"/>
cedmeerb	<input type="text"/> <input type="text"/> <input type="text"/> <input type="text"/> <input type="text"/> <input type="text"/> <input type="text"/> <input type="text"/>

Months of the Year

L A Q W F K Y P P C P Z Z L Y E J Q M N
I B R W S R A U W B F T K H E L E O S H
U Y E J A J C N E R I R J G A U U W G O
Q E F U J O S D J O X Z E R C E W J G C
D F N R S A Q E X L T D O B F G K U T J
I A I H M V J V C P P X V T M K X X R L
J L S D I B X M V I H I S W U E G I G S
A Q I J M H O D V M K E K W F C V I P S
S U G Q N T Q B Q O P K M U R A J O W T
Z B G H H H S W D T Y R A U R B E F N L
P M X U M J M V E B C N R K E P A I P E
X C K B S Q R M F A Z Q C X B K J W Z Z
N B V P R T B Z K H M E H G M Q Z C L K
X C E D E E B F N R Y Y O E E V K E T C
S A F Y R S A P W Z X O O E C M I Y G V
V Z W D R P Q P E K C O Q E E E N U J T
Z I L A R J A D V I D A V O D Z E P Y D
W B C I E Y Q L Z J Q E A Y D C B M M D
B Q L B W A Q O C T O B E R S R U C E B
H O W W M M O Q O Q O H W M C Q G I V Z

JANUARY

MAY

SEPTEMBER

FEBRUARY

JUNE

OCTOBER

MARCH

JULY

NOVEMBER

APRIL


AUGUST

DECEMBER

Name: _____

It's snack time

Use the menu to add up the price for each order.



	hot chocolate 6¢		soup 7¢		banana 6¢
	milk 9¢		cheese burger 10¢		candy cane 5¢
	apple juice 7¢		sandwich 9¢		apple pie 8¢

Order	Add up the price
	_____ + _____ = _____
	_____ + _____ = _____
	_____ + _____ + _____ = _____
	_____ + _____ + _____ = _____
	_____ + _____ + _____ = _____






























Name _____

Date _____



COUNT THE COINS TO \$2 SHEET 2

Write the total amount of money at the end of each row.


	 	_____
	  	_____
    		_____
		_____
	  	_____
	 	_____
   		_____
   		_____

Name _____

Grandma's Antonyms and Synonyms Quilt

Directions: Grandma loves to sew. She is making a harvest quilt. Help her finish the quilt by coloring according to the color code.

antonyms = orange synonyms = brown



go stop	above over	bad good	asleep awake	below under
cry weep	close open	fix repair	home house	false true
happy sad	clean tidy	yes no	road street	left right
hard difficult	sour sweet	over under	day night	small little
more less	late tardy	hot cold	soft hard	fast quick
hop jump	little big	glad happy	pretty beautiful	up down
wet dry	wet damp	pull push	gift present	



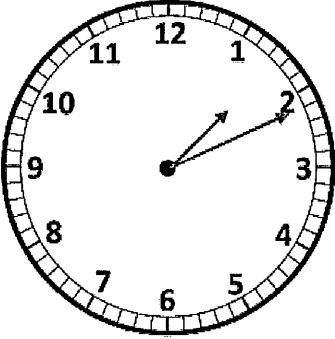
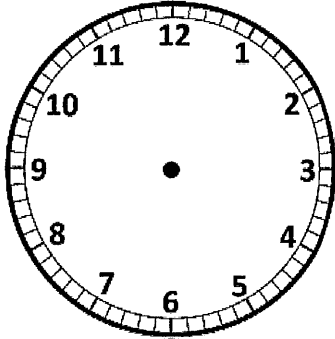
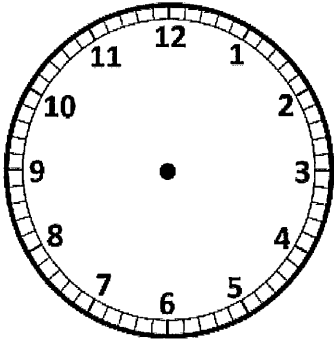
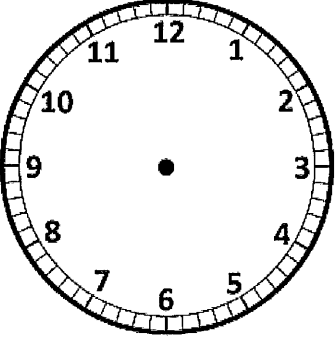
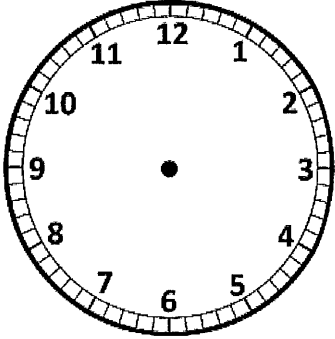
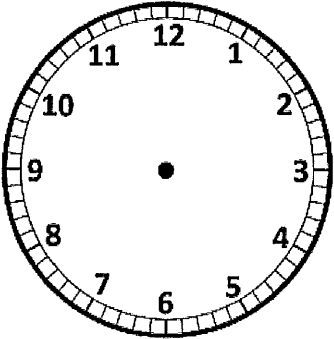
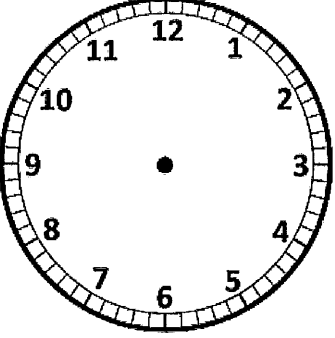
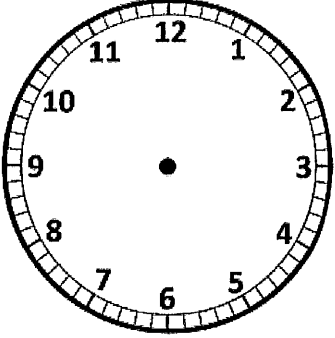
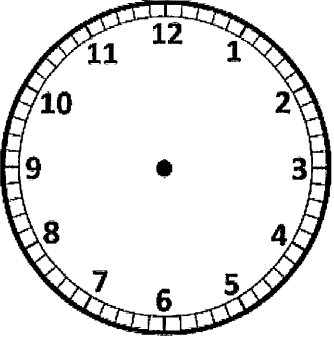
Name _____

Date _____



TELLING THE TIME TO 1 MINUTE SHEET 3

Draw the hands in the correct place to match the time.

		
1:11	2:46	12:17
		
5:33	1:47	9:03
		
11:24	3:38	12:57



Free Math Sheets, Math Games and Math Help

MATH-SALAMANDERS.COM

Name _____

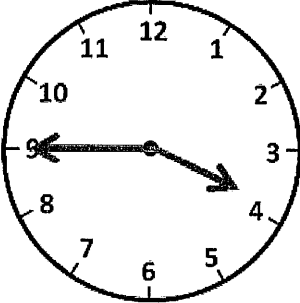
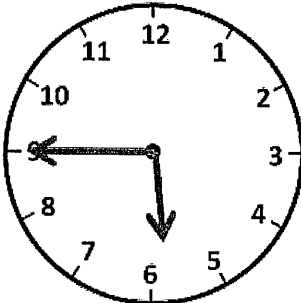
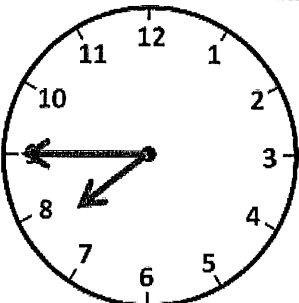
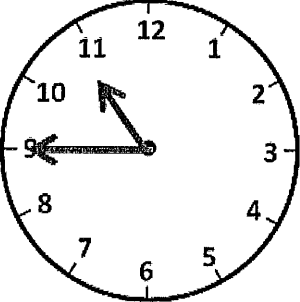

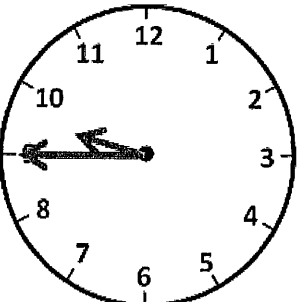
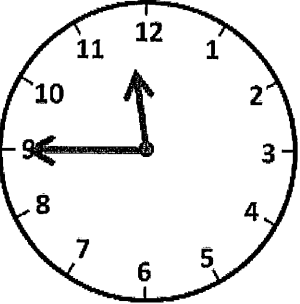
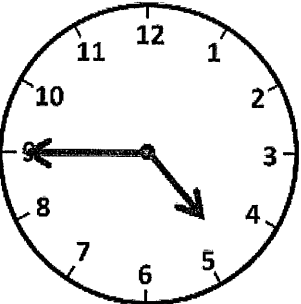
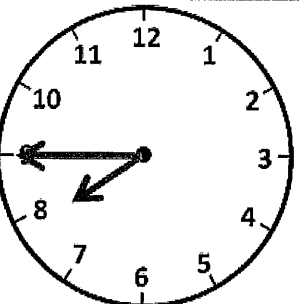
Date _____



TELLING THE TIME - QUARTER TO SHEET 2

Write the correct time underneath each clock.

The first one has been done for you.

		
3:45		
		
		



Name: _____

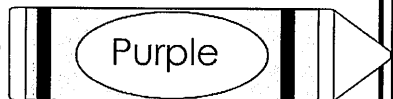
Noun, Verb or Adjective?

Directions: Use the key to color hot chocolate mugs.


Noun:




Adjective:




Verb:




mug




shiny




hot



run




mint




friend




sit




brown




marshmallow



wet



outside



move

Name : _____

Score : _____

Teacher : _____

Date : _____

$$\begin{array}{r} 6 \\ \times 3 \\ \hline \end{array}$$

$$\begin{array}{r} 12 \\ \times 2 \\ \hline \end{array}$$

$$\begin{array}{r} 11 \\ \times 1 \\ \hline \end{array}$$

$$\begin{array}{r} 9 \\ \times 4 \\ \hline \end{array}$$

$$\begin{array}{r} 6 \\ \times 1 \\ \hline \end{array}$$

$$\begin{array}{r} 7 \\ \times 4 \\ \hline \end{array}$$

$$\begin{array}{r} 8 \\ \times 2 \\ \hline \end{array}$$

$$\begin{array}{r} 8 \\ \times 1 \\ \hline \end{array}$$

$$\begin{array}{r} 8 \\ \times 1 \\ \hline \end{array}$$

$$\begin{array}{r} 10 \\ \times 3 \\ \hline \end{array}$$

$$\begin{array}{r} 12 \\ \times 1 \\ \hline \end{array}$$

$$\begin{array}{r} 9 \\ \times 1 \\ \hline \end{array}$$

$$\begin{array}{r} 7 \\ \times 4 \\ \hline \end{array}$$

$$\begin{array}{r} 12 \\ \times 2 \\ \hline \end{array}$$

$$\begin{array}{r} 9 \\ \times 4 \\ \hline \end{array}$$

$$\begin{array}{r} 8 \\ \times 3 \\ \hline \end{array}$$

$$\begin{array}{r} 5 \\ \times 3 \\ \hline \end{array}$$

$$\begin{array}{r} 5 \\ \times 1 \\ \hline \end{array}$$

$$\begin{array}{r} 5 \\ \times 3 \\ \hline \end{array}$$

$$\begin{array}{r} 11 \\ \times 4 \\ \hline \end{array}$$


$$\begin{array}{r} 7 \\ \times 2 \\ \hline \end{array}$$

$$\begin{array}{r} 9 \\ \times 3 \\ \hline \end{array}$$


$$\begin{array}{r} 10 \\ \times 1 \\ \hline \end{array}$$


$$\begin{array}{r} 10 \\ \times 3 \\ \hline \end{array}$$

Snowflake Maze!



1-Blue 2-Pink 3-Yellow 4-Green 5-Red 6-Purple





1= blue 2= brown 3=yellow 4=red 5=white 6=black 7=pink