



The Sweet Shop

Kelly and her friends have gone to sweet shop! Use the candy menu to figure out how much each person spent and how much change they will have left.



Candy Sticks
15¢



Gumballs
6¢






Fudge
54¢









Taffy
33¢







Hard Candy
27¢

\$. ____		Kelly has
+\$. ____		\$1.05
+\$. ____		
<hr/>		
\$. ____		\$. ____
		<u>- \$. ____</u>
Change = \$. ____		

\$. ____		Tom has
+\$. ____		\$0.85
<hr/>		
\$. ____		\$. ____
		<u>- \$. ____</u>
Change = \$. ____		

\$. ____		Carly has
+\$. ____		\$1.50
+\$. ____		
+\$. ____		
<hr/>		
\$. ____		\$. ____
		<u>- \$. ____</u>
Change = \$. ____		

\$. ____		Mike has
+\$. ____		\$2.00
+\$. ____		
+\$. ____		
<hr/>		
\$. ____		\$. ____
		<u>- \$. ____</u>
Change = \$. ____		

Foot Measurements

Put one foot in the frame. Use a pencil to trace around your toes and foot. If your foot does not fit in the box, flip the piece of paper over and use the back!



PAGE 1

Foot Measurements

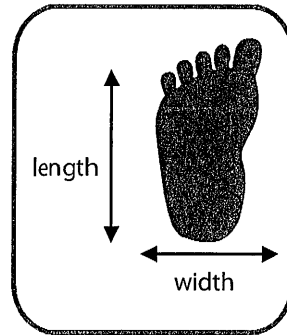
Use your own ruler or cut out the ruler.

Measure your foot with the ruler.

Write the measurements to the nearest inch or half inch on the lines.

My foot is about _____ inches long.

My foot is about _____ inches wide.



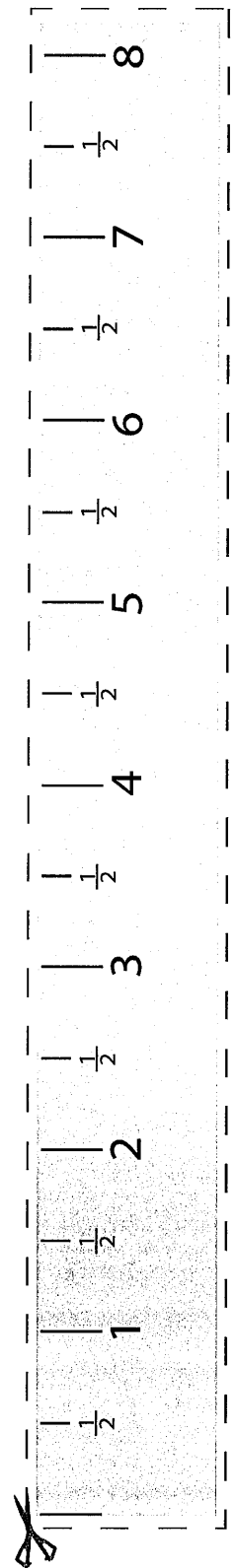
My big toe is about _____ inch(es) long.

My second toe is about _____ inch(es) long.

My middle toe is about _____ inch(es) long.


My fourth toe is about _____ inch(es) long.

My little toe is about _____ inch(es) long.



Name: _____

Date: _____



How Much Time?

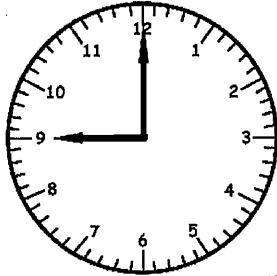
Hours Worksheet 4




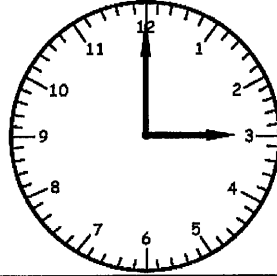
Write the time inside each clock below. Tell how much time has passed.

1)

Tammy got sick at...



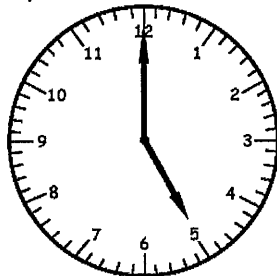
Tammy felt better at...



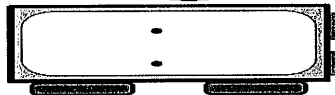
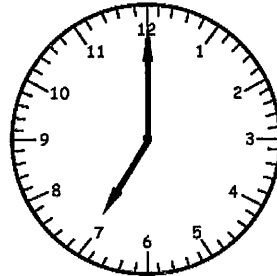
How much time has passed?

2)

Nancy mowed the lawn at...



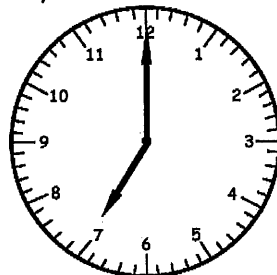
She cut all the grass by...




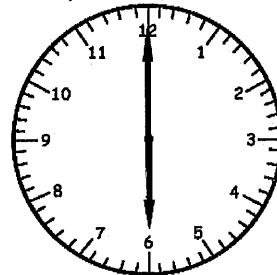
How much time has passed?

3)

Randy ate breakfast at...

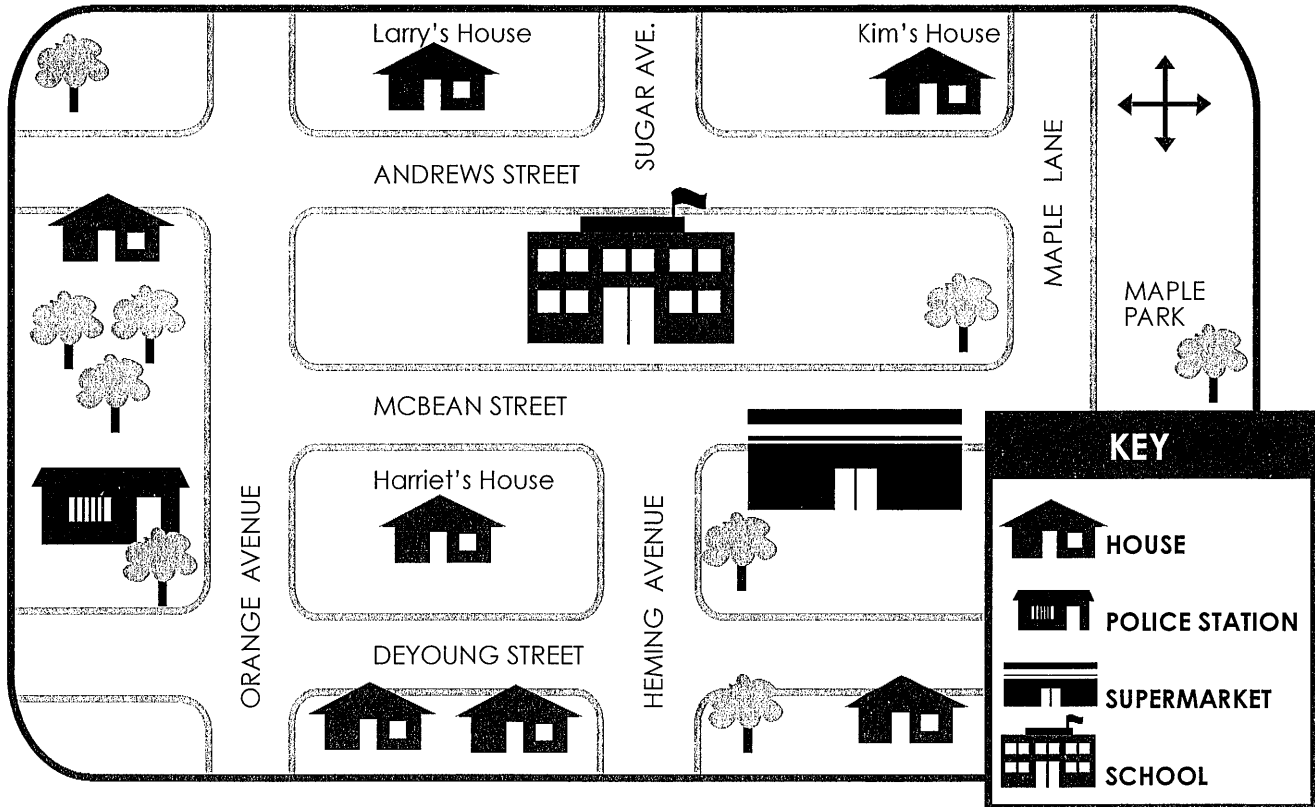


Randy ate dinner at...



How much time has passed?

TOWN MAP



LABEL the compass rose with N, S, E, W.

Write NORTH, SOUTH, EAST OR WEST to complete each sentence.

1. Harriet heads _____ to go to school.
2. Larry goes _____ to go to Harriet's house.
3. Kim heads _____ to go to the supermarket.
4. A police officer would go _____ to the supermarket.
5. Kids at school head _____ to play at the park.
6. Harriet's dad is a police officer. He heads _____ to work.
7. Larry heads _____ to go to school.
8. Kim heads _____ to visit Larry.

Add & Spell The Hidden Word

Add these numbers to find the letters that spell out the hidden word. You may need to carry.

$$\begin{array}{r} 93 \\ + 74 \\ \hline \end{array}$$

$$\begin{array}{r} \text{O} 30 \\ + 66 \\ \hline \end{array}$$

$$\begin{array}{r} 10 \\ + 32 \\ \hline \end{array}$$

$$\begin{array}{r} \text{Y} 98 \\ + 97 \\ \hline \end{array}$$

$$\begin{array}{r} \text{M} 23 \\ + 71 \\ \hline \end{array}$$

$$\begin{array}{r} 12 \\ + 45 \\ \hline \end{array}$$

$$\begin{array}{r} \text{L} 99 \\ + 88 \\ \hline \end{array}$$

$$\begin{array}{r} 97 \\ + 51 \\ \hline \end{array}$$

$$\begin{array}{r} 79 \\ + 92 \\ \hline \end{array}$$

$$\begin{array}{r} \text{H} 31 \\ + 96 \\ \hline \end{array}$$

$$\begin{array}{r} 67 \\ + 20 \\ \hline \end{array}$$

$$\begin{array}{r} \text{C} 60 \\ + 35 \\ \hline \end{array}$$


★ ★ ★

94 96 96 171 187 42 167 127 57


○ ○ ○ ○ ○ ○ ○ ○ ○

Add & Spell The Hidden Word

Add these numbers to find the letters that spell out the hidden word. You may need to carry.


 58
+ 39

F 88
+ 46


 65
+ 30


Y 47
+ 46

R 54
+ 89


 59
+ 96

L 86
+ 44

 37
+ 81

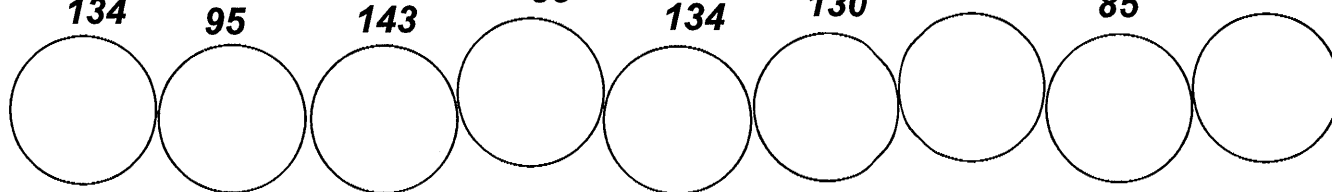
 60
+ 38

H 52
+ 54

 79
+ 65

E 19
+ 66


134 95 143 85 134 130 95 85 144



Carnival Count

Mark is working at the carnival fair today. Help him calculate his totals by adding or subtracting.


Mark sold 14 pink cotton candies and 23 blue cotton candies.
How many cotton candies did he sell in total?



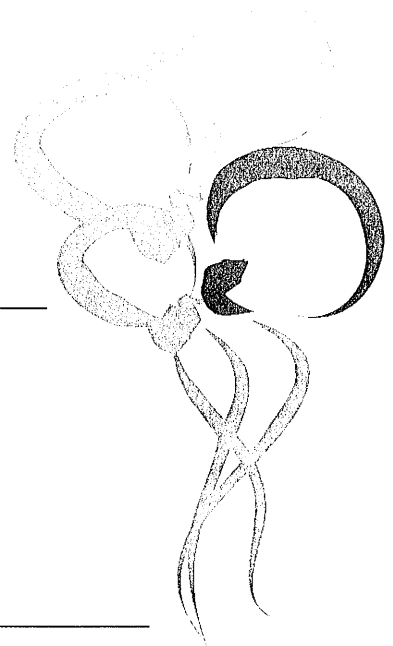
It was a hot day and many people bought ice cream cones at the fair. Mark sold 18 vanilla flavored cones, 15 strawberry flavored cones, and 21 chocolate cones.
How many cones did he sell in total?



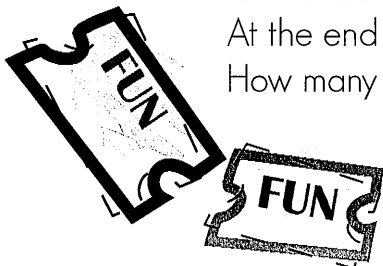
At the beginning of the day, Mark had 63 pretzels but by the end of the day he only had 18 pretzels. How many pretzels did he sell?



When Mark wasn't busy helping customers, he gave away balloons to visitors. Mark gave away 8 neon pink balloons, 11 forest green balloons, 24 jumbo purple balloons and 5 sky blue metallic balloons. How many did he give away?



Mark had 57 fun pack tickets.
At the end of the day he only had 9.
How many fun packs did he sell ?



Fact or Opinion?

- 1) Read each sentence.
- 2) Next, decide if each sentence is a **fact** or **opinion**.
- 3) If it is a **fact**, color it **green**. If it is an **opinion**, color it **red**.
- 4) When done, write a **fact** or **opinion** below.
- 5) Raise your hand for your teacher to check your worksheet.

The Sign Says... Fact or Opinion?

Name: _____

Sentence 1: A dog is a pet.



Sentence 2: My teacher is the smartest.



Sentence 3: Popcorn is a child's favorite snack.



Sentence 4: Winter is cold and snowy.



Sentence 5: Thanksgiving is a holiday.



Sentence 6: My dad is the fastest runner.



Write a fact or opinion below.




Winter Word Search

S K I I N G S N O W B O O H T
 S F I R E P L A C E I N G E O
 L I E A R M U F F S C N Y T S
 E W S B C O L T R A E S T A C
 D I M L R O W S N O U G H E A
 D N U I A U L O W P S H T O R
 I T F Z E S A D E H A T A O F
 N R B Z B A E R O W P L Y I I
 G C O A T O T L Y D M W L C R
 I T O R H A F R O T A S U I E
 P O T D E C E M B E R I L C L
 L A S N C R O V I N C L O L R
 O A D H J K T C E S H O V E L
 W J A N U A R Y O E S A H S T
 M I T T E N S W E A T E R E L

BLIZZARD
 BOOTS
 COAT
 COCOA
 COLD
 DECEMBER
 EARMUFFS
 FEBRUARY

FIREPLACE
 FROSTY
 HAT
 ICE
 ICICLES
 JANUARY
 MARCH
 MITTENS

PLOW
 SCARF
 SHOVEL
 SKIING
 SLEDDING
 SNOW
 SWEATER
 WINTER



Codebreakers:

Use the key to decode each of the words.


1	2	3	4	5	6	7	8	9	10	11	12	13
A	B	C	D	E	F	G	H	I	J	K	L	M
14	15	16	17	18	19	20	21	22	23	24	25	26
N	O	P	Q	R	S	T	U	V	W	X	Y	Z



1.

4	15	14	1	12	4

4	21	3	11



2.

13	15	1	14	1

3.

2	5	1	19	20

4.

3	9	14	4	5	18	5	12	12	1
	I								

5.

4	15	18	25

6.

19	9	13	2	1
	I			

7.

16	5	20	5	18

16	1	14

8.

18	1	16	21	14	26	5	12

