



# LEGOLAND® CALIFORNIA RESORT WEEKLY MAZE CHALLENGE!



HELP ME DELIVER  
THESE PIZZAS!



FOR MORE FUN ACTIVITIES FROM LEGOLAND CALIFORNIA, VISIT [LEGOLAND.COM/LLCBUILDINGCHALLENGE](https://www.legoland.com/llcbuildingchallenge)

©2020 The LEGO Group

## Good Personal Hygiene

There are 19 words in the word search. Have fun as you find each!!!


g y e s i c r e x e q m u s i t f h d m  
g g p o l o l w h p e n e i g y h r t a  
l i a o h g l f j e y a g r i x o v l u  
u d o r s t d n s r m s g m d m w w g e  
z j s r p k r h h t l a e h d o o g a f  
y p e w o c i b o e e s y u m t a t m s  
f l s k n e n v w w o q u e w i v d s f  
z x u v g b k v e h y d r a t e h o z h  
z l x y e z w c r q u v j u g u l o s f  
p t k b b h a n e h w p e e f o e t k  
s s w u a r t b r u s h t e e t h s i l  
d l r g t u e g g r s a a t i y f e u a  
n e t d h d r p m r b d d o q o q e r n  
a e p h y s i c a l a c t i v i t y f o  
h p d i l n f n e o l k b z d w t q h s  
h u o w g p f s c l e a n l i n e s s r  
s q e x g z l s g s a a e b a h k p e e  
a y u r i a h b m o c l q f r g b h r p  
w h c e g n i e b l l e w k y a b k f t  
e m m t p o l p l u i p f g o s a x q j

BRUSHTEETH  
DRINKWATER  
FLOSS  
HYDRATE  
PHYSICALACTIVITY  
SPONGEBATH  
WELLBEING

CLEANLINESS  
EATVEGETABLES  
FRESHFRUITS  
HYGIENE  
SHOWER  
USES SOAP

COMBHAIR  
EXERCISE  
GOODHEALTH  
PERSONAL  
SLEEP  
WASHHANDS

# I SPY camping



- |   |  |   |  |   |  |   |  |   |  |   |  |   |  |   |  |   |  |   |  |
|---|--|---|--|---|--|---|--|---|--|---|--|---|--|---|--|---|--|---|--|
| 2 |  | 4 |  | 4 |  | 5 |  | 4 |  | 5 |  | 7 |  | 4 |  | 6 |  | 5 |  |
| 1 |  | 6 |  | 7 |  | 1 |  | 3 |  | 6 |  | 7 |  | 4 |  | 7 |  | 5 |  |
| 3 |  | 3 |  | 4 |  | 6 |  | 2 |  | 7 |  | 5 |  | 9 |  | 6 |  | 3 |  |

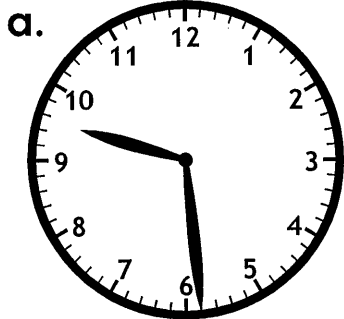


Name: \_\_\_\_\_

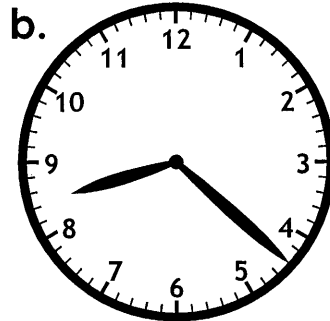
Time to the Nearest Minute

# Telling Time


Write the time shown.



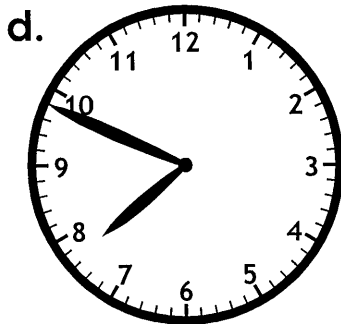
\_\_\_\_\_



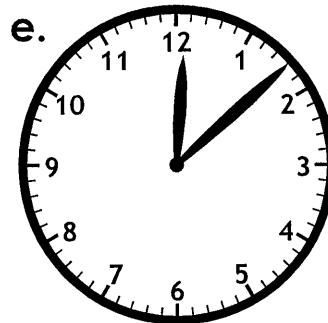
\_\_\_\_\_



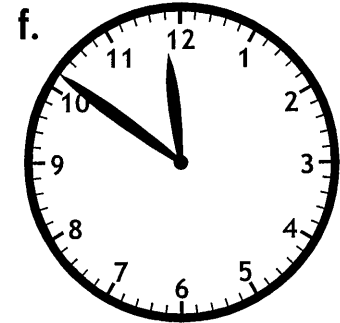
\_\_\_\_\_



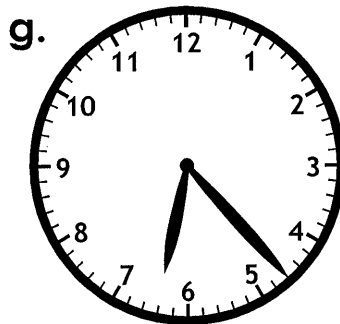
\_\_\_\_\_



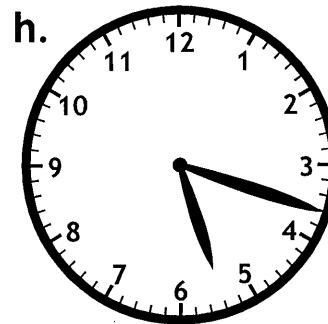
\_\_\_\_\_




\_\_\_\_\_



\_\_\_\_\_



\_\_\_\_\_



\_\_\_\_\_

## Action Verbs

**An action verb is a word that shows what someone or something is doing.**

Examples: Mary sleeps on the couch.

Jason's best friend thinks of a plan.

Ken and his mother cook dinner.

**Circle the action verb in each sentence below.**

1. Sal listens to his favorite song.
2. Craig hits the baseball over the fence.
3. The little pig grunts.
4. The roof of the house leaks.
5. The hunter searches for a deer.
6. Dr. Gold examines his patient.
7. The bluebird in the tree sings beautifully.
8. The football team dashes out of the locker room.
9. Paul reads *The Adventures of Tom Sawyer*.
10. Mrs. Gray buys a roll of paper towels at the store.
11. Judy solves the mystery.
12. Harold finds a purple crayon.



# Action Verbs

Tell whether each word is an action verb or noun. Write the words action verb next to each action verb. Write the word noun next to each noun.

13. swims \_\_\_\_\_

20. basketball \_\_\_\_\_

14. thinks \_\_\_\_\_

21. plays \_\_\_\_\_

15. sneezes \_\_\_\_\_

22. relaxes \_\_\_\_\_

16. clock \_\_\_\_\_

23. grass \_\_\_\_\_

17. tooth \_\_\_\_\_

24. game \_\_\_\_\_


18. drives \_\_\_\_\_

25. writes \_\_\_\_\_

19. takes \_\_\_\_\_

Write a sentence with an action verb to describe each picture. Underline the action verb.


26.



\_\_\_\_\_

\_\_\_\_\_

27.



\_\_\_\_\_

\_\_\_\_\_

28.



\_\_\_\_\_



\_\_\_\_\_

Name: \_\_\_\_\_

# Fact or Opinion

A **fact** is something that can be proven true.

An **opinion** is someone's feelings about a particular topic.



Tell whether each sentence is a fact or opinion.

- \_\_\_\_\_ Sunday is the best day of the week.
- \_\_\_\_\_ George Washington was born in February.
- \_\_\_\_\_ Memorial Day is the most important holiday of the year.
- \_\_\_\_\_ Thanksgiving is celebrated in autumn.
- \_\_\_\_\_ Some families eat turkey on Thanksgiving.
- \_\_\_\_\_ Watching fireworks on the 4th of July is lots of fun.
- \_\_\_\_\_ April is a month with 30 days.
- \_\_\_\_\_ There are 12 months in the year.
- \_\_\_\_\_ This has been a terrible week.
- \_\_\_\_\_ Spring is the most beautiful season of all.
- \_\_\_\_\_ Monday, Wednesday, and Friday are weekdays.
- \_\_\_\_\_ The first day of the school year is scary.
- \_\_\_\_\_ Everyone should make Valentine's Day cards.
- \_\_\_\_\_ Your birthday comes only one day a year.



Name: \_\_\_\_\_


# Synonyms & Antonyms

Synonyms are words that have almost the same meaning.  
example: The words big and large are synonyms.

Antonyms are words that have opposite meanings.  
example: The words open and closed are antonyms.

**Tell whether each pair of words are synonyms or antonyms.**

1. agree, disagree \_\_\_\_\_
2. cold, freezing \_\_\_\_\_
3. easy, difficult \_\_\_\_\_
4. argue, squabble \_\_\_\_\_
5. guess, estimate \_\_\_\_\_
6. bottom, top \_\_\_\_\_
7. tired, energetic \_\_\_\_\_
8. huge, gigantic \_\_\_\_\_
9. sink, float \_\_\_\_\_
10. windy, calm \_\_\_\_\_
11. noisy, quiet \_\_\_\_\_
12. unhappy, sad \_\_\_\_\_



**Write one complete sentence that includes two words that are antonyms.  
Choose antonyms that are different from the ones listed above.**

---

---

Name: \_\_\_\_\_

## Counting Backwards

Count backwards. Fill in the missing numbers.

a. 

27	26		24	23		21	
----	----	--	----	----	--	----	--

b. 

87	86				82		
----	----	--	--	--	----	--	--

c. 

51				47	46		
----	--	--	--	----	----	--	--

d. 

	33	32					27
--	----	----	--	--	--	--	----

e. 

	98					93	
--	----	--	--	--	--	----	--

f. 

		61				57	
--	--	----	--	--	--	----	--

Name: \_\_\_\_\_

**Daily Word Problem**

Jamie has 3 pencils in his backpack,  
4 pencils in his desk, and 6 pencils on the table.  
How many pencils does he have altogether?

Fluffy and Spot are dogs.

Fluffy has 10 stuffed toys and 3 rubber toys.

Spot has 3 stuffed toys and 8 rubber toys.

Which dog has more toys?

Name: \_\_\_\_\_

# Make Change to \$1.00

Counting On Method

You have:



50¢

You buy:



43¢

Count on:



44¢



45¢



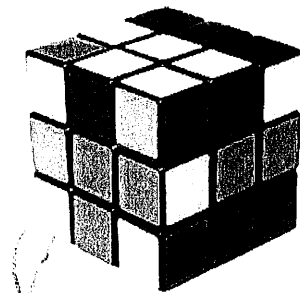
50¢

Total Change: 7¢

1. You have:



You buy:



12¢

Count on:



Total Change: \_\_\_\_\_

2. You have:



You buy:



69¢

Count on:




Total Change: \_\_\_\_\_

3. You have:



\_\_\_\_\_

You buy:



53¢

Count on:



\_\_\_\_\_


Total Change: \_\_\_\_\_

4. You have:




\_\_\_\_\_

You buy:



85¢

Count on:



\_\_\_\_\_

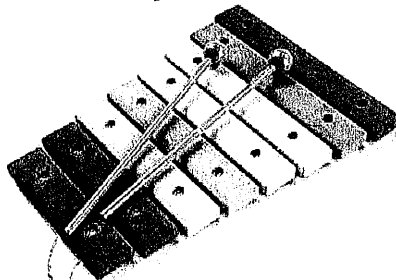
Total Change: \_\_\_\_\_

5. You have:



\_\_\_\_\_

You buy:



32¢

Count on:




\_\_\_\_\_


Total Change: \_\_\_\_\_

Name: \_\_\_\_\_

## Make Change at a Garage Sale




- a. How much is the lamp? \_\_\_\_\_  
Eva buys the lamp. She gives the cashier \$1.00.  
How much change will Eva receive? \_\_\_\_\_
- b. How much is the guitar? \_\_\_\_\_  
Isabella buys the guitar. She gives the cashier 25¢.  
How much change will Isabella receive? \_\_\_\_\_
- c. How much are the crayons? \_\_\_\_\_  
Nolan buys the crayons. He gives the cashier 25¢.  
How much change will Nolan receive? \_\_\_\_\_
- d. How much is the wagon? \_\_\_\_\_  
Dr. Gavin buys the wagon. She gives the cashier \$1.00.  
How much change will Dr. Gavin receive? \_\_\_\_\_



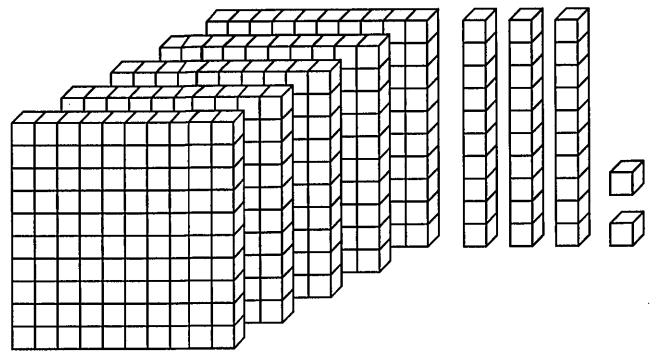
Name: \_\_\_\_\_

# Math Buzz

Circle the word that names the equal parts.




halves    thirds    quarters



What number is shown? \_\_\_\_\_

Circle the digital clock that shows the same time as the analog clock.








Mr. Burke's class needs 250 points to earn outdoor free time. If they already have 165 points, how many more points do they need to earn?

Show your work

answer: \_\_\_\_\_ points

How many fish are there in all?



answer: \_\_\_\_\_ fish

Name: \_\_\_\_\_



# Math Buzz

Fill in the missing numbers.















186	514

472	
155	

Deja logged 161 minutes of reading on her reading log last week. This week she logged 189 minutes of reading. How many minutes did Deja log for both weeks combined?

Show your work

answer: \_\_\_\_\_ minutes


Goals Scored	
Luca	   
Avery	    
Yessenia	 
Cyrus	  

Which player(s) scored more goals than Luca?

answer: \_\_\_\_\_

How many total goals did the team score?

answer: \_\_\_\_\_

Each  = 1 goal

Write the numbers in standard form.

**one hundred ninety-four**

---

**600 + 50 + 2**


---

How many sides?

answer: \_\_\_\_\_


How many angles?

answer: \_\_\_\_\_



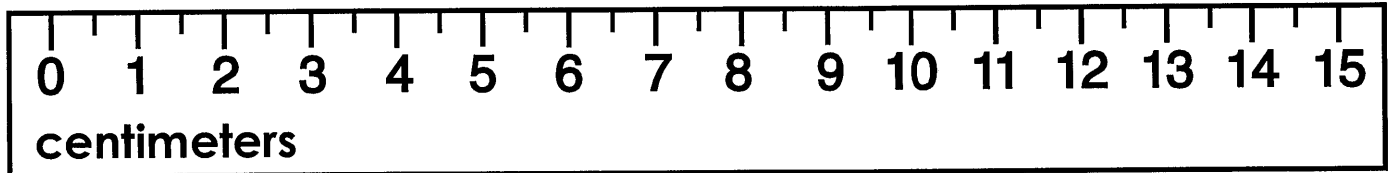


Name: \_\_\_\_\_



# Math Buzz

How long is the paper clip?



The paper clip is \_\_\_\_\_ centimeters long.


Olivia bought a pencil and an emoji eraser for 75¢ from the school store. She paid with a \$1 bill. How much change did Olivia receive?

Show your work

answer:

\_\_\_\_\_ ¢

Circle the word that names the equal parts.



halves

thirds

fourths

Write the number in word form.

825

\_\_\_\_\_

Add. Show your work

$$\begin{array}{r} 313 \\ + 609 \\ \hline \end{array}$$

Find the sum of 224 and 738. \_\_\_\_\_

$$549 + 160 = \underline{\hspace{2cm}}$$





