

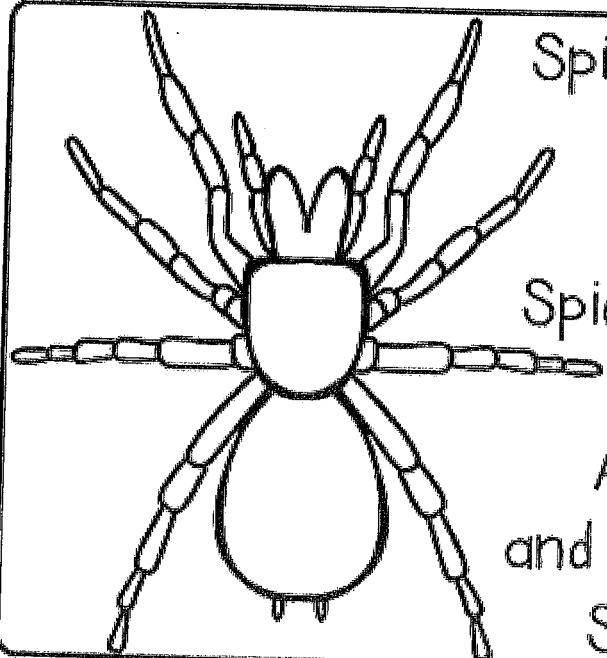
Name _____



Date _____

Comprehension Check #12

Directions: Read the short story. Answer the questions.



Spiders and insects are different.

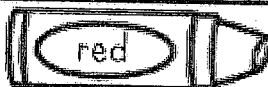
Spiders have eight legs,
and insects have six legs.

Spiders use silk to make webs and
capture their prey.

A spider has two body parts,
and an insect has three body parts.

Spiders are called arachnids.

1. Are spiders and insects the same?



2. How many legs does a spider have?



3. How many legs does an insect have?



4. How do spiders capture their prey?




5. How many body parts does an insect have?



Date: _____

Name: _____



Directions: Write a story about what you think is happening in this picture. Color the picture.

Writing Checklist – I have checked my writing for:

- Neat printing
- Capital letters (Cc)

- Spaces ()
- Punctuation (.!?)

Name: _____

Fact or Opinion

A **fact** is something that is true or can be proven.

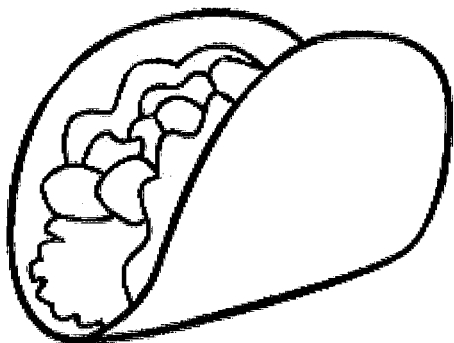
An **opinion** is your feelings or how someone else feels about a particular topic.

Directions: Read each sentence. Determine if it is a fact or opinion and write it on the line.

1. _____ Green is my favorite color.
2. _____ George Washington was the first president.
3. _____ I really enjoyed the football game last weekend.
4. _____ Thanksgiving is celebrated in November in America.
5. _____ Billy's favorite food is pizza.
6. _____ The Presidential Election is held in November.
7. _____ Brazil is located in the continent of South America.
8. _____ Atlanta is the capital of Georgia.
9. _____ Country is my favorite type of music.
10. _____ I enjoy reading books by Judy Blume.
11. _____ Earth only has one moon.
12. _____ There are 60 seconds in a minute.
13. _____ Christmas is the best part of the year.
14. _____ Rhode Island is the smallest state in the US.

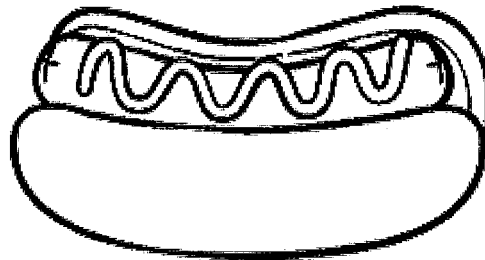
Name _____

Opinion Writing



tacos

or



hot dogs

Do you like tacos or hot dogs








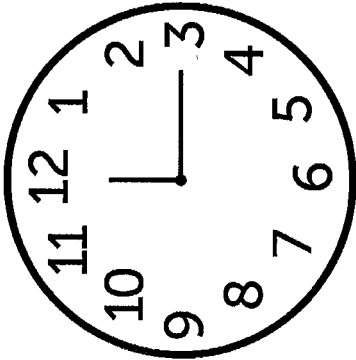
I like

because

What time is it?

Name: _____

INSTRUCTIONS: Write the time below each clock.



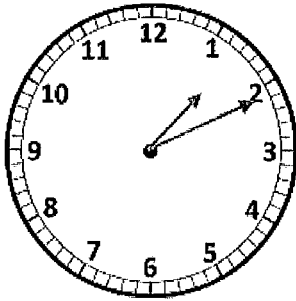
Name _____

Date _____

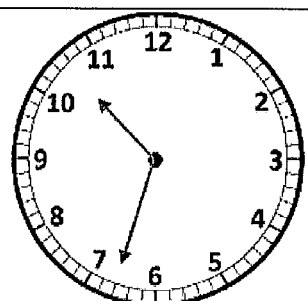
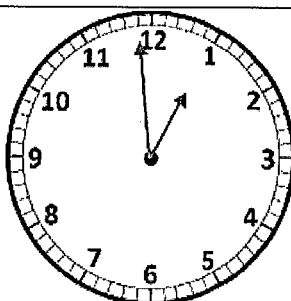
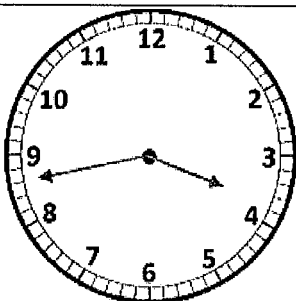
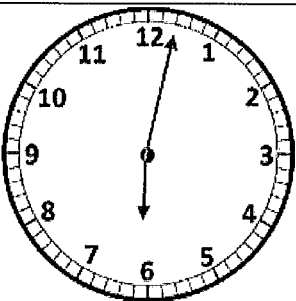
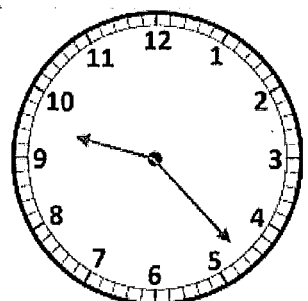
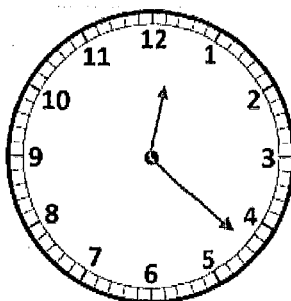
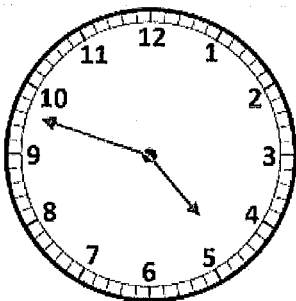
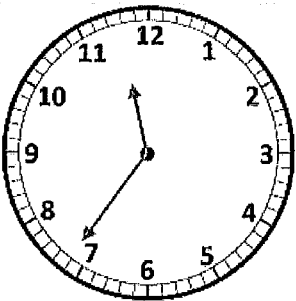
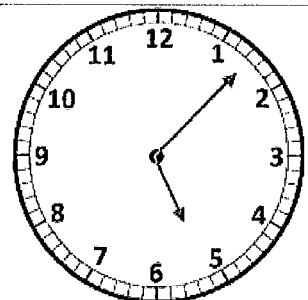
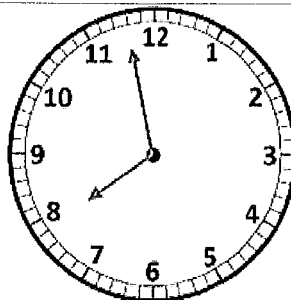
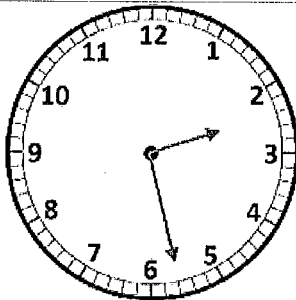
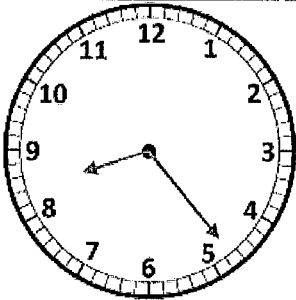
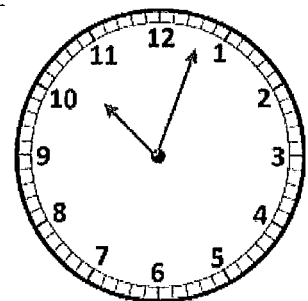
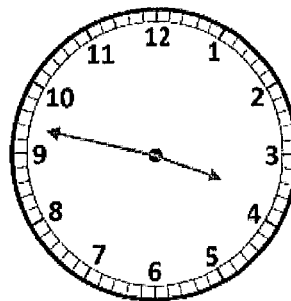
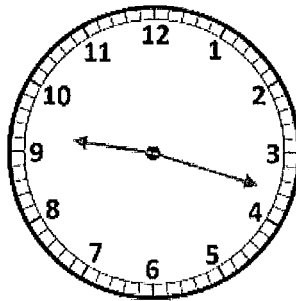


TELLING THE TIME TO 1 MINUTE SHEET 2

Write the correct time underneath each clock.



1:11



Free Math Sheets, Math Games and Math Help

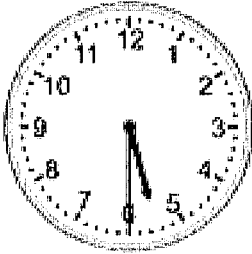
MATH-SALAMANDERS.COM

Telling time - half hours


Grade 1 Time Worksheet

Write the time below each clock.


1.



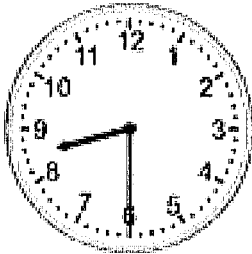
2.




3.



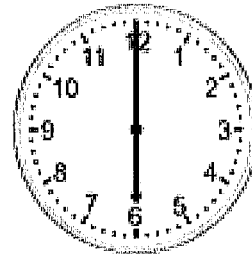
4.



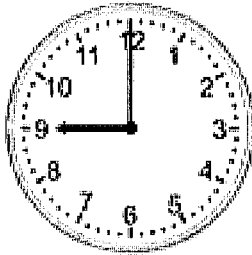
5.




6.




7.



8.



9.



Name: _____

Date: _____

Map of the United States

Directions: Use the map to answer the questions.



1. Color your state green.

2. What is the largest state? _____ Color it yellow.

3. What is the smallest state? _____ Color it blue.

4. Color Nevada orange. Color the states that border Nevada purple.

5. What states border Florida?


6. How many states have the word New in them?

7. What state is south of Georgia?

8. What state is east of Arizona?

9. What state is north of Wyoming?

10. What state is west of Kansas?






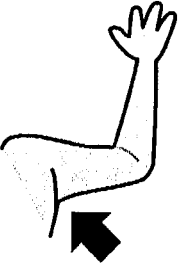



** We will do this one together with a video.*
Personal Hygiene Worksheet


Date: _____
Name: _____
Class: _____

List the Examples

For each part of your body, list examples of good hygiene, as well as consequences of bad hygiene.

	Good Hygiene	Bad Hygiene
		
		
		
		
		






CREATIVITY

takes

COURAGE



Henri Matisse