

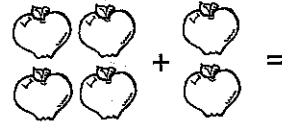
Minute 1

Name _____

1. Write the missing number. _____





2. How many apples in all? _____ apples



3. Kevin's mom has 6 cookies. She gave 2 cookies to Kevin.
How many cookies are left? _____ cookies

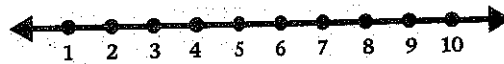
For questions 4 and 5, count. Write the number.



6. Use <, >, or, =. 6 _____ 3

Use the number line to complete questions 7 and 8.

7. $6 + 2 =$ _____




8. $10 - 7 =$ _____

For questions 9 and 10, circle the name of the shape.

9. triangle circle square

10. triangle circle square



Minute 2


Name _____

For questions 1 and 2, use $<$, $>$, or $=$.

1. 4 _____ 7

2. 12 _____ 8

3. How many teddy bears are left? _____ teddy bears



4. Laurel has 2 dolls. Rosa has 3 dolls. How many dolls do they have in all? _____ dolls

For questions 5-7, circle the digit in the ones place.


5. 19 6. 92 7. 27

8. Write the missing number. _____



9. $5 + 4 =$ _____

10. $9 - 4 =$ _____



Minute 4

Name _____

1. $8 - \square = 6$

2. $\begin{array}{r} 4 \\ +3 \end{array}$

3. Use $<$, $>$, or $=$. 31 _____ 43

4. Write the missing number. $12, 14, \underline{\hspace{1cm}}, 18, 20$

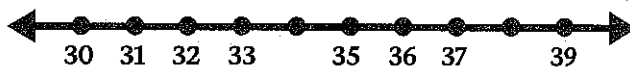
5. 12 children like blue balloons. 8 children like red balloons. Which color balloon do more children like? _____ balloons

For questions 6 and 7, circle the value of the underlined digit.


6. $\underline{1}5$ 5 50


7. $\underline{5}2$ 5 50


8. Write the missing numbers. _____ and _____



For questions 9 and 10, circle the name of the shape.

9.  square circle triangle

10.  square circle triangle



Minute 3

Name _____

- Write what comes next in the pattern. 2, 4, 6, _____, _____
- $7 - 5 =$ _____
- $2 + 5 =$ _____


For questions 4 and 5, write the number.

- nine = _____
- seven = _____

- $2 + \square = 8$
- Use $<$, $>$, or $=$. 12 _____ 9



Use the pictograph to complete questions 8-10.

Ice Cream Children Like Best





- How many children like chocolate ice cream? _____ children
- Which flavor do children like more—vanilla or strawberry?

- Circle which flavor children like the most:
strawberry chocolate vanilla



Minute 5

Name _____

1. How many stars in all?  +  stars

2. $8 - 3 =$ _____

For questions 3 and 4, write the number.

3. eleven = _____


4. three = _____


5.
$$\begin{array}{r} 11 \\ + 13 \\ \hline \end{array}$$


6. The clown has 9 balls. He drops 3 balls. How many balls does he have left? _____ balls

7. + 6 = 9

For questions 8-10, circle the name of the coin.

8.  penny nickel dime quarter

9.  penny nickel dime quarter

10.  penny nickel dime quarter