

Pineapple Math

Add the numbers.

$$\begin{array}{r} 25 \\ + 43 \\ \hline \end{array}$$

$$\begin{array}{r} 71 \\ + 26 \\ \hline \end{array}$$

$$\begin{array}{r} 54 \\ + 32 \\ \hline \end{array}$$

$$\begin{array}{r} 30 \\ + 18 \\ \hline \end{array}$$

$$\begin{array}{r} 51 \\ + 46 \\ \hline \end{array}$$

$$\begin{array}{r} 47 \\ + 22 \\ \hline \end{array}$$

$$\begin{array}{r} 68 \\ + 10 \\ \hline \end{array}$$

$$\begin{array}{r} 32 \\ + 54 \\ \hline \end{array}$$

$$\begin{array}{r} 70 \\ + 17 \\ \hline \end{array}$$

$$\begin{array}{r} 83 \\ + 16 \\ \hline \end{array}$$


$$\begin{array}{r} 25 \\ + 44 \\ \hline \end{array}$$

$$\begin{array}{r} 69 \\ + 20 \\ \hline \end{array}$$

$$\begin{array}{r} 48 \\ + 31 \\ \hline \end{array}$$

$$\begin{array}{r} 36 \\ + 52 \\ \hline \end{array}$$


$$\begin{array}{r} 57 \\ + 21 \\ \hline \end{array}$$




Word Problems: Subtraction

Read each problem. Write a number sentence and solve.

1. Ms. Hua has 21 pigeons and 17 finches in her aviary.
How many more pigeons does she have?




2. The meadow holds 70 sheep. 61 graze there.
How many spaces remain?




3. Bahar has 53 cherry trees. 24 are saplings (young trees).
How many grown trees does Bahar have?



4. Irena has 55 geese. 31 are ganders (male geese). How many are female?



5. There were 67 kittens at the animal rescue shelter on Friday. 42 found loving homes on Saturday.
How many kittens remain on Sunday?



6. I counted 27 butterflies in the garden yesterday. Now I see only 14. How many flew away?





WINTER

WORD SEARCH

H	T	G	I	H	I	C	I	C	L	E	F	B	B	J
F	E	B	R	U	A	R	Y	A	W	J	D	L	O	C
W	M	A	C	K	P	T	J	O	M	O	I	A	E	J
J	P	X	N	O	S	J	N	D	Y	Z	L	N	P	A
R	E	T	A	E	W	S	C	A	Z	I	M	K	M	N
B	R	Y	F	D	R	M	J	A	L	O	P	E	C	U
E	A	M	S	U	C	E	R	N	W	S	T	T	B	A
K	T	L	I	M	K	D	N	A	U	N	Y	A	S	R
F	U	P	K	T	L	E	G	M	H	O	C	K	E	Y
N	R	A	S	J	T	C	C	W	E	W	R	O	L	C
M	E	O	U	N	I	E	A	O	B	F	M	S	D	N
J	B	T	S	W	K	M	N	N	D	L	K	E	N	T
C	O	J	M	T	E	B	Y	S	N	A	K	O	A	L
A	E	L	R	P	F	E	O	X	P	K	W	I	C	E
Y	W	I	N	T	E	R	B	C	U	E	D	Y	A	B

BLANKET
BLIZZARD
CANDLES
COLD
DECEMBER

FEBRUARY
FROST
HAT
HOCKEY
ICE

ICICLE
JANUARY
MITTENS
SKIS
SNOW

SNOWFLAKE
SNOWMAN
SWEATER
TEMPERATURE
WINTER




Name _____

Directions: Read the passage. Write the correct answer for each question.

Missing Mitten

It is a cold day outside. Cece wants to play outside, but she lost one of her mittens! First, she looks for her mitten under her bed. Her mitten is not there!

Next, she looks behind the curtains in the living room. Her mitten is not there! Last, she looks under the big chair. Cece found her missing mitten!



What does Cece want to do?

Where does Cece look for her mitten first?

Where does Cece find her mitten?

- 
- Select the words that are **nouns**.

Cow	long	Red
tell	Book	read
Pen	thin	Iran

- Select the words that are **Adjectives**.

Loud	long	Red
tell	Book	read
Funny	thin	Far

- Select the words that are **Verbs**.

play	long	taste
tell	Book	read
Funny	look	Far

Name: _____

Date: _____

TWO-STEP ADDITION & SUBTRACTION WORD PROBLEMS CHECK-IN

Directions: Solve the problems below. Be sure to show your work!


1. This morning, there were 26 fish in an aquarium and 32 fish in the other aquarium. At noon, 11 fish were sold. How many fish are left in the aquariums?

2. There are 52 cars in the movie theater parking lot. 12 more cars parked in the parking lot before the movie started, but 3 cars left. How many cars are in the parking lot?

3. There are 44 people on the train. At the first stop, 16 more people got on the train. 9 people got off the train. How many people are on the train?

4. There were 18 volleyballs in the bag. There were 13 volleyballs in the basket. 10 balls were used for practice. How many volleyballs were not used?

5. My mom baked 36 cookies for the bake sale. I baked 24 cookies. My brother ate 5 cookies. How many cookies are there for the bake sale?



Name: _____

Date: _____

TWO-STEP ADDITION & SUBTRACTION WORD PROBLEMS CHECK-IN

Directions: Solve the problems below. Be sure to show your work!

6. Jeremiah's class collected 61 cans for the food drive. Jennifer's class collected 73 cans. 14 cans fell off the table and had to be thrown away. How many cans did they have left?

7. McKenzie had 50 dollars. She spent 37 dollars. Then she earned 20 more dollars. How many dollars does she have?

8. There were 27 pieces of candy in the bag. The boy bought 14 more pieces of candy. He ate 12 pieces. How much candy does he have left?

9. Mickey earned 92 points in his game. The second time he played it, he lost 43 points. Then he earned 75 points. How many points does Mickey have?

10. There were 94 people at the football game. 34 more people came to watch the game. 16 people left early. How many people were at the football game?

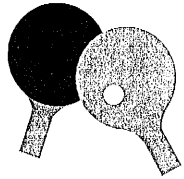


Toy Store

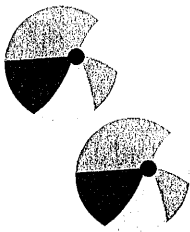
Sally and her friends are at the toy store. Answer each problem about **making change**. Show your work!



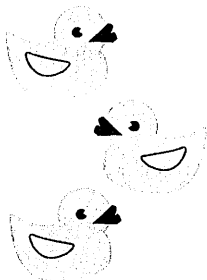
Sally has 65 cents. If she buys a teddy bear for 32 cents, how much change will she get back?



Alex has 82 cents. If he buys a ping-pong ball set for 64 cents, how much change will he get back?



Devon has 76 cents. Each beach ball costs 35 cents. If he buys two beach balls, how much change will he get back?



Maria has 98 cents. She wants to buy three rubber ducks. Each rubber duck costs 32 cents. Does she have enough money?

Name: _____ Date: _____

Math Madness: Multiplication Facts

Multiply.

$$\begin{array}{r} 8 \\ \times 2 \\ \hline \end{array}$$

$$\begin{array}{r} 5 \\ \times 7 \\ \hline \end{array}$$

$$\begin{array}{r} 10 \\ \times 2 \\ \hline \end{array}$$

$$\begin{array}{r} 9 \\ \times 7 \\ \hline \end{array}$$

$$\begin{array}{r} 5 \\ \times 1 \\ \hline \end{array}$$

$$\begin{array}{r} 2 \\ \times 1 \\ \hline \end{array}$$

$$\begin{array}{r} 5 \\ \times 4 \\ \hline \end{array}$$

$$\begin{array}{r} 1 \\ \times 0 \\ \hline \end{array}$$

$$\begin{array}{r} 9 \\ \times 4 \\ \hline \end{array}$$

$$\begin{array}{r} 8 \\ \times 1 \\ \hline \end{array}$$

$$\begin{array}{r} 5 \\ \times 5 \\ \hline \end{array}$$

$$\begin{array}{r} 2 \\ \times 4 \\ \hline \end{array}$$

$$\begin{array}{r} 7 \\ \times 5 \\ \hline \end{array}$$

$$\begin{array}{r} 2 \\ \times 8 \\ \hline \end{array}$$

$$\begin{array}{r} 4 \\ \times 5 \\ \hline \end{array}$$

$$\begin{array}{r} 6 \\ \times 5 \\ \hline \end{array}$$

$$\begin{array}{r} 9 \\ \times 9 \\ \hline \end{array}$$

$$\begin{array}{r} 12 \\ \times 2 \\ \hline \end{array}$$

$$\begin{array}{r} 11 \\ \times 8 \\ \hline \end{array}$$

$$\begin{array}{r} 5 \\ \times 6 \\ \hline \end{array}$$

$$\begin{array}{r} 3 \\ \times 7 \\ \hline \end{array}$$

$$\begin{array}{r} 6 \\ \times 3 \\ \hline \end{array}$$

$$\begin{array}{r} 7 \\ \times 7 \\ \hline \end{array}$$

$$\begin{array}{r} 8 \\ \times 4 \\ \hline \end{array}$$


$$\begin{array}{r} 7 \\ \times 11 \\ \hline \end{array}$$

$$\begin{array}{r} 5 \\ \times 12 \\ \hline \end{array}$$

Total: 28


Complete: _____

Correct: _____










Learning to Tell Time


Write the time under the first set of clocks. The first one has been done for you.




9:15




Now draw the hands on these analog clock faces to match the digital time already given. The first one has been done for you.




9:45




12:15




3:30




7:00




10:15



6:00



5:15



11:00

Name _____

Date _____

At the Store: Multiplication Word Problems

Directions: Solve each multiplication word problem with a strategy of your choice. Remember to show your work!

1. Gentry and Kennedy each bought 6 pencils from the school store. What was the total number of pencils that the friends purchased?

2. Donica purchased 8 yellow pencils that cost 6 ¢ each. What was the total cost of her pencils?

3. Sandy bought 9 animal pencils that cost 8 ¢ each. How much money did she spend?

4. Haniya bought 4 polka dot pencils that each cost 7 ¢. How much money did Haniya spend?

5. Later, Haniya returned 2 of her pencils that cost 7 ¢ each. How much money did she get back?

6. A teacher, Ms. Wright, bought 5 boxes of pencils. Each box holds 8 pencils. How many pencils did the teacher buy altogether?

7. Bruno bought 6 green pencils that cost 5 ¢ each. How much money did Bruno spend on his pencils?

8. Niko bought pencils for each of her 3 friends. She wanted to give each friend 3 pencils. How many pencils did she buy?

CryptoQuote #8

Topic: Money

A	B	C	D	E	F	G	H	I	J	K	L	M	N	O	P	Q	R	S	T	U	V	W	X	Y	Z
				13																					

E _ E _ _ _ _ _ E _ _ _ _ _ E _ _ _ _ _
 13 24 13 25 18 3 15 18 12 4 13 19 6 21 15 1 3

_ _ _ _ _ E _ _ _ _ _ E _ _ _ _ _
 9 8 8 22 19 5 25 8 6 4 5 19 5 13 26 8 25 14 13 16

_ _ _ _ _ E _ _ _ _ _ E _ _ _ _ _ E _ _ _ _ _
 9 12 16 19 8 26 19 5 13 25 12 11 5 13 16 19 21 13 8 21 9 13

_ _ _ _ _ E _ _ _ _ _ E _ _ _ _ _
 12 1 15 23 13 25 12 11 15 12 26 12 23 1 8 19

_ _ _ _ _ E _ _ _ _ _ E _ _ _ _ _
 19 5 13 25 13 12 4 8 19 8 17 8 25 22

- Robert Orben



