



Name: _____

Spring Word Search



KID	SPRING BREAK	DAFFODIL
SPRING CLEANING	LIFE CYCLE	GALOSHES
VERNAL EQUINOX	BUTTERFLY	HYACINTH
PASQUE FLOWER	NARCISSUS	SUNSHINE
BABY ANIMALS	BASEBALL	RAINCOAT

© Monsterwordsearch.com

Novice



Name: _____

Counting Backwards

Count backwards. Fill in the missing numbers.

a.

27	26		24	23		21	
----	----	--	----	----	--	----	--

b.

87	86				82		
----	----	--	--	--	----	--	--

c.

51				47	46		
----	--	--	--	----	----	--	--

d.

	33	32					27
--	----	----	--	--	--	--	----

e.

	98					93	
--	----	--	--	--	--	----	--

f.

		61				57	
--	--	----	--	--	--	----	--

Name: _____

Subtraction

Subtract to find the differences.

a.
$$\begin{array}{r} 35 \\ - 17 \\ \hline \end{array}$$

b.
$$\begin{array}{r} 58 \\ - 29 \\ \hline \end{array}$$

c.
$$\begin{array}{r} 96 \\ - 34 \\ \hline \end{array}$$

d.
$$\begin{array}{r} 80 \\ - 47 \\ \hline \end{array}$$

e.
$$\begin{array}{r} 51 \\ - 10 \\ \hline \end{array}$$

f.
$$\begin{array}{r} 72 \\ - 7 \\ \hline \end{array}$$

g.
$$\begin{array}{r} 28 \\ - 13 \\ \hline \end{array}$$

h.
$$\begin{array}{r} 47 \\ - 18 \\ \hline \end{array}$$

i.
$$\begin{array}{r} 16 \\ - 9 \\ \hline \end{array}$$

j.
$$\begin{array}{r} 60 \\ - 26 \\ \hline \end{array}$$



- k. Meg had a lemonade stand.
She bought 24 lemons. She used 16
of them to make lemonade.
How many lemons did she have left? _____

- l. Meg had 40 cups. She used 7 of them.
How many cups did she have left? _____

Name: _____

Counting Money



















Name: _____

Chloe is watching 5 cars in a race.

How many tires are on 5 cars?

Mr. Pastel has 9 buckets of blue paint and 6 buckets of red paint.

His students use up 2 buckets of blue paint and 1 bucket of red paint.

How many buckets of paint does he have left?

Mr. Hammer has a son and 2 daughters. He gives each of his children 4 oranges. How many oranges did he give them altogether?

Name: _____

Jace has a jar of marbles. The table below shows how many of each color marble is in the jar.

Jace's Marbles	
yellow	2
blue	10
white	8
black	9

How many more black marbles than yellow marbles are in the jar?

Show your work.

answer: _____



One of the things I like best about school is my art class. We have a great teacher named Mrs. Hilbert. She is a wonderful artist. I love to watch her draw and paint. She taught us how to mix paint to make just the right colors for our paintings. She plays good music while we draw and paint. We draw and paint almost everyday in class. Some days we look at pictures of other artists. It is interesting to do this. It helps me to think of things that I want to paint or draw. We have an art exhibit in May this year. Our work will be in one of the banks in our town. We are inviting people from the community to our exhibit. Our parents are invited to go with us. I have three paintings I am working on now. I hope one of them will be chosen to be in the exhibit. I like having a goal to work toward.

ANSWER THE QUESTIONS:

1. What is one of the favorite classes of this student?

- a. math
- b. reading
- c. art
- d. music

2. The author describes Mrs. Hilbert as a _____.

- a. nice lady
- b. wonderful artist
- c. sweet person
- d. beautiful person

3. What did Mrs. Hilbert teach the class to do?

- a. bake chocolate cake
- b. write great stories
- c. mix paint
- d. do long division

4. Why does it help this student to see the works of other artists?

- a. to learn to draw
- b. mix paint
- c. to think about what she wants to paint
- d. none of these

5. Where will the art exhibit be?

- a. at the library
- b. at one of the banks
- c. at the school
- d. at one of the churches

6. What does this student hope will happen with her paintings?

- a. one of them will be sold
- b. one of them will be chosen for the exhibit
- c. one of them will be of her younger sister
- d. one of them will be lost



Name: _____


CCSS 2.MD.7 Tell and write time from analog and digital clocks to the nearest....

Telling Time to the Hour

Directions: Write in the digital time.



:




:




:



:



:




:



:



:



:


























Name _____

Date _____



WHO HAS MOST? TO \$2 SHEET 1

Use the correct symbol: $>$, $<$ or $=$ to show whether Newton or Quadra has the most money.

 Newton	Symbol	 Quadra
 	$>$	 
		
 		 
  		 
 		
 		  



2ND GRADE

MATH-SALAMANDERS.COM

Name: _____

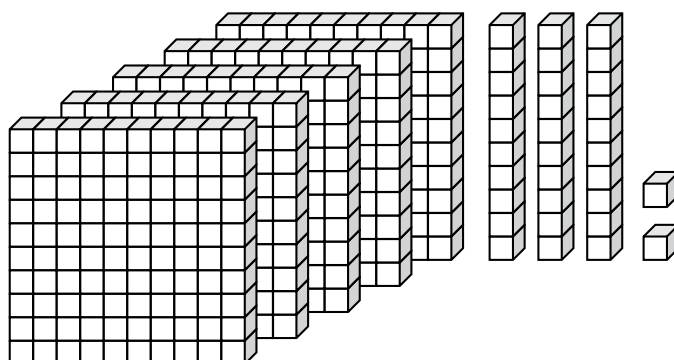


Math Buzz

Circle the word that names the equal parts.

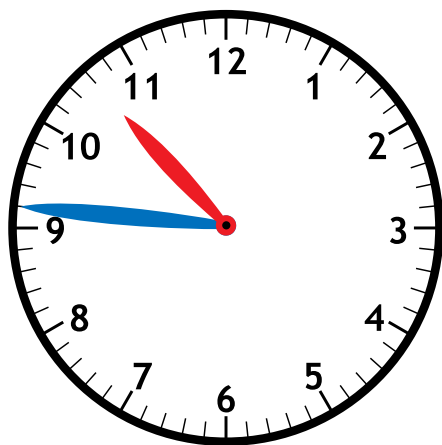
--	--	--

halves thirds quarters



What number is shown? _____

Circle the digital clock that shows the same time as the analog clock.








Mr. Burke's class needs 250 points to earn outdoor free time. If they already have 165 points, how many more points do they need to earn?

Show your work


answer: _____ points

How many fish are there in all?



answer: _____ fish

Name: _____



Math Buzz

Fill in the missing numbers.















186	514


472
155

Deja logged 161 minutes of reading on her reading log last week. This week she logged 189 minutes of reading. How many minutes did Deja log for both weeks combined?

Show your work

answer: _____ minutes

Goals Scored	
Luca	   
Avery	    
Yessenia	 
Cyrus	  

Each  = 1 goal

Which player(s) scored more goals than Luca?

answer: _____

How many total goals did the team score?

answer: _____

Write the numbers in standard form.

one hundred ninety-four


600 + 50 + 2

How many sides?

answer: _____

How many angles?

answer: _____

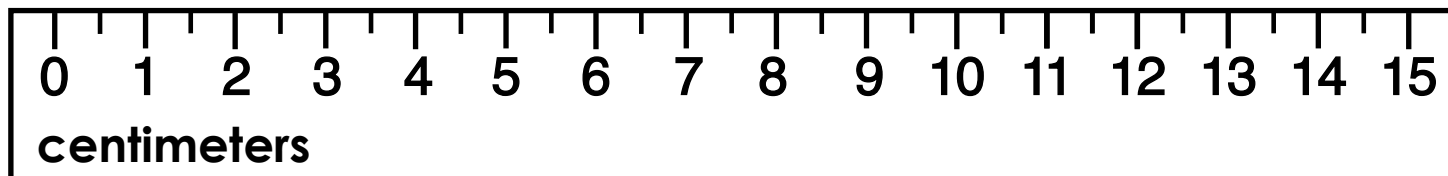


Name: _____



Math Buzz

How long is the paper clip?



The paper clip is _____ centimeters long.


Olivia bought a pencil and an emoji eraser for 75¢ from the school store. She paid with a \$1 bill. How much change did Olivia receive?

Show your work

answer:

_____ ¢

Circle the word that names the equal parts.



halves

thirds

fourths

Write the number in word form.

825

Add. Show your work

$$\begin{array}{r} 313 \\ + 609 \\ \hline \end{array}$$

Find the sum of 224 and 738. _____

$$549 + 160 = \underline{\hspace{2cm}}$$

Name: _____

Ordering Numbers: 2-Digit

Ordering Numbers

Rewrite each list of numbers in order, from least to greatest.

a.

15	21	12	18
----	----	----	----

 _____, _____, _____, _____

b.

56	71	47	50
----	----	----	----

 _____, _____, _____, _____

c.

36	6	37	31
----	---	----	----

 _____, _____, _____, _____

d.

88	81	98	18
----	----	----	----

 _____, _____, _____, _____

e.

39	48	45	41
----	----	----	----

 _____, _____, _____, _____

f.

44	22	42	24
----	----	----	----

 _____, _____, _____, _____

❖ In the box below, write four numbers. Have a friend rewrite them in order from least to greatest.

_____, _____, _____, _____





TEAM
ONGI

FEARLESS, FANTASTIC AND
FUZZY

Disney
RAYA
AND
THE LAST DRAGON

